



Miss: Aanchal
Your Math Teacher

Please stand for the UAE National Anthem

02:00




Class room Rules





I am here

- o Yes
- o No





مؤسسة الإمارات للتعليم المدرسي
EMIRATES SCHOOLS ESTABLISHMENT

Before we start, do you have:



Reveal Maths book


Pencil

Eraser

Colours



B



C

LET'S GET STARTED!



Lesson 5: Represent 2 digits numbers in different ways

One Hundred Twenty Chart

1	2	3	4	5	6	7	8	9	10
11	12	13	14	15	16	17	18	19	20
21	22	23	24	25	26	27	28	29	30
31	32	33	34	35	36	37	38	39	40
41	42	43	44	45	46	47	48	49	50
51	52	53	54	55	56	57	58	59	60
61	62	63	64	65	66	67	68	69	70
71	72	73	74	75	76	77	78	79	80
81	82	83	84	85	86	87	88	89	90
91	92	93	94	95	96	97	98	99	100
101	102	103	104	105	106	107	108	109	110
111	112	113	114	115	116	117	118	119	120



Numbers 1-120

1	2	3	4	5	6	7	8	9	10
11	12	13	14	15	16	17	18	19	20
21	22	23	24	25	26	27	28	29	30
31	32	33	34	35	36	37	38	39	40
41	42	43	44	45	46	47	48	49	50
51	52	53	54	55	56	57	58	59	60
61	62	63	64	65	66	67	68	69	70
71	72	73	74	75	76	77	78	79	80
81	82	83	84	85	86	87	88	89	90
91	92	93	94	95	96	97	98	99	100
101	102	103	104	105	106	107	108	109	110
111	112	113	114	115	116	117	118	119	120

Revise on the numbers from
1- 100



Revise on the numbers from 100- 120



COUNT BY 10

Please open
your books:

p. 82,83,84


Learning Objective

Represent a 2 digit number in

two ways.



34 is 3 tens and 4 ones.




34 is also 1 ten and 24 ones.

Represent 2-Digit Numbers in Different Ways



Be Curious

How are they the same?
How are they different?



Copyright © McGraw-Hill Education

Math is... Mindset

What helps you understand your partner's ideas?

Learn

Grant shows a number with 1 ten and 24 ones.
Laila shows a number with 3 tens and 4 ones.

Do they both show the same number?

Math is... Quantities

How can you show the number?

You can show the tens and ones.

<p>34 is 3 tens and 4 ones.</p>	<p>34 is also 1 ten and 24 ones.</p>
---------------------------------	--------------------------------------

You can show a number in different ways.

Work Together

Does each group show the same number?
How do you know? Write each number.

<p>_____</p>	<p>_____</p>
--------------	--------------

Work Together

Does each group show the same number?
How do you know? Write each number.



74



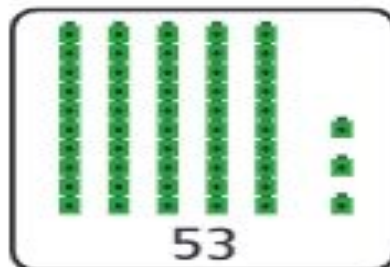
74

On My Own

Name _____

Circle the answer to each problem.



1. Which shows a different way to make the number shown?



2. Do these show the same number?

Yes

No



Write the numbers.

3. **STEM Connection** Jin has 76 fossils.

What are two ways he can show the number?


7 tens and 4 ones is 74.

6 tens and 14 ones is 74.




Draw to show your thinking.

4. How can you draw to show the number 29?



5. How can you draw to show 29 a different way?



6. Extend Your Thinking How can you show 49 in different ways? Use connecting cubes to help. Write the numbers.

0 tens and 49 ones

1 ten and 39 ones

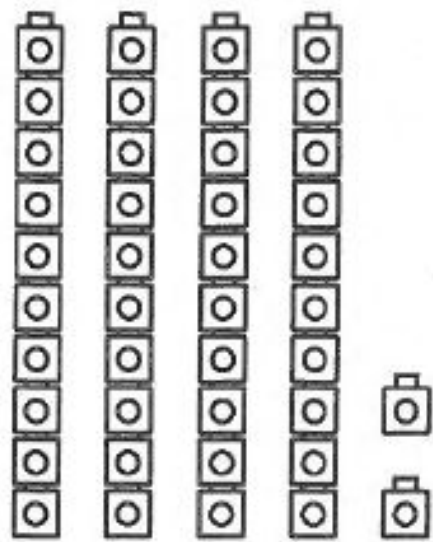
2 tens and 29 ones

3 tens and 19 ones


4 tens and 9 ones

Review


You can show the tens and ones in a number, such as 42, in different ways.



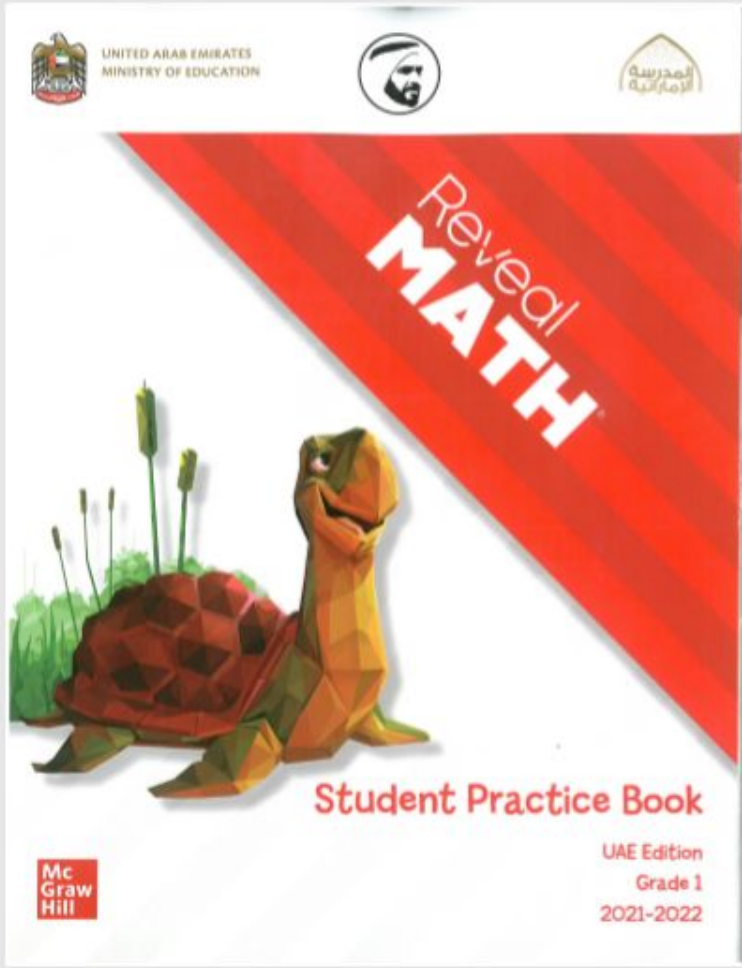
$42 = 4$ tens
and 2 ones



$42 = 3$ tens
and 12 ones



$42 = 2$ tens
and 22 ones



PRACTICE AT HOME

Student Practice Book

Do page numbers 19 and 20 for practice. Take the picture and upload your answers in LMS.



Goodbye!

See you soon!

