

MEASURE MANIA!

...



Names



Top of Desk

	cm Estimate	in Estimate	cm Actual	in Actual
Name	?	?	?	?
Name	?	?	?	?

Length of Your Partner's Foot

	cm Estimate	in Estimate	cm Actual	in Actual
Name	?	?	?	?
Name	?	?	?	?


Width of Your Fingernail

	cm Estimate	in Estimate	cm Actual	in Actual
Name	?	?	?	?
Name	?	?	?	?

Width of Your Computer

	cm Estimate	in Estimate	cm Actual	in Actual
Name	?	?	?	?
Name	?	?	?	?

Height of the Two Bears in the Pictures



Height of the Two Bears in the Pictures


	cm Estimate	in Estimate	cm Actual	in Actual
Bear 1	?	?	?	?
Bear 2	?	?	?	?

Length of the Two Sandwiches in the Pictures

1




2



Length of the Two Sandwiches in the Pictures

	cm Estimate	in Estimate	cm Actual	in Actual
Sandwich 1	?	?	?	?
Sandwich 2	?	?	?	?

Height of the Playground Equipment Pictures



Height of the Playground Equipment Pictures

	cm Estimate	in Estimate	cm Actual	in Actual
Swings	?	?	?	?
Slide	?	?	?	?