

Name: \_\_\_\_\_

## Math Homework-Quarter 4 Week 2


Due: 4/17/2026

**Please complete at home and return with your Friday folder. The homework is due Friday morning. (You can turn it in early.) Remember you get 5 points for completed homework each week and we take away one of those 5 points for each day that your homework is turned in late. (If you struggle with a question, please circle it and your teacher will help you)**

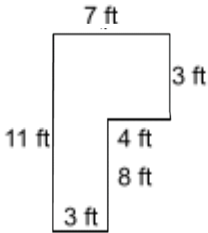
<p>Order the numbers from least to greatest.</p> <p style="font-size: 1.2em; text-align: center;">199    109    900</p>	<p>Round each number to the nearest 10 and 100.</p> <table border="1" style="width: 100%; border-collapse: collapse; text-align: center;"> <thead> <tr> <th style="width: 20%;"></th> <th style="width: 20%;">10</th> <th style="width: 20%;">100</th> </tr> </thead> <tbody> <tr> <td style="text-align: left;">796</td> <td></td> <td></td> </tr> <tr> <td style="text-align: left;">302</td> <td></td> <td></td> </tr> <tr> <td style="text-align: left;">451</td> <td></td> <td></td> </tr> </tbody> </table>		10	100	796			302			451			<p>Write the number 740 in each form.</p> <p style="text-align: center; font-size: 1.2em;">Word:</p>  <p style="text-align: center; font-size: 1.2em;">Expanded:</p>	<p>What is the VALUE of the underlined number?</p> <p style="font-size: 1.2em; text-align: center;">7,3<u>8</u>9    8,0<u>2</u>4</p>
	10	100													
796															
302															
451															
<p>There are 498 students in grades Kindergarten, First, and Second. There are 589 students in Third, Fourth, and Fifth. How many students are there altogether?</p>	<p>Walden has \$120. He wants to buy video games that are \$10 each. How many video games can he buy?</p>	<p>808 people said that their favorite color is red. 589 people said their favorite color is blue. How many more people like red than blue?</p>	<p>Catherine went to the movies 4 times this week. Each time she went she spent \$8 on a movie ticket. How much money did she spend going to the movies this week?</p>												
<p>Find the product.</p> <p style="font-size: 1.2em;">7 x 5 = _____ 12 x 8 = _____</p>  <table style="width: 100%; text-align: center;"> <tr> <td style="width: 33%;">3</td> <td style="width: 33%;">4</td> <td style="width: 33%;">8</td> </tr> <tr> <td><u>x 9</u></td> <td><u>x 4</u></td> <td><u>x 5</u></td> </tr> </table>	3	4	8	<u>x 9</u>	<u>x 4</u>	<u>x 5</u>	<p>Find the quotient.</p> <p style="font-size: 1.2em;">49 ÷ 7 = _____ 121 ÷ 11 = _____</p>  <p style="font-size: 1.2em;">54 ÷ 6 = _____ 32 ÷ 8 = _____</p>	<p>Find the product.</p> <p style="font-size: 1.2em;">9 x 7 = _____ 7 x 12 = _____</p>  <table style="width: 100%; text-align: center;"> <tr> <td style="width: 33%;">6</td> <td style="width: 33%;">5</td> <td style="width: 33%;">6</td> </tr> <tr> <td><u>x 8</u></td> <td><u>x 12</u></td> <td><u>x 6</u></td> </tr> </table>	6	5	6	<u>x 8</u>	<u>x 12</u>	<u>x 6</u>	<p>Find the quotient.</p> <p style="font-size: 1.2em;">50 ÷ 5 = _____ 96 ÷ 8 = _____</p>  <p style="font-size: 1.2em;">63 ÷ 9 = _____ 84 ÷ 12 = _____</p>
3	4	8													
<u>x 9</u>	<u>x 4</u>	<u>x 5</u>													
6	5	6													
<u>x 8</u>	<u>x 12</u>	<u>x 6</u>													

What is the area of a square when the side length is 6 inches?

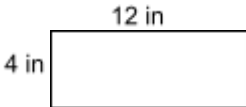
What is the area of the figure?




Find the total area.



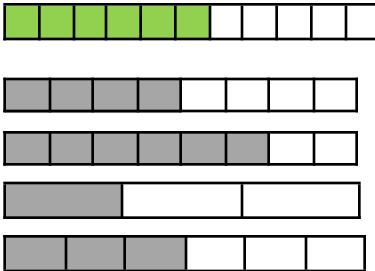
Find the area of the square.



How are the two shapes similar?



Circle all the fractions that are equivalent to  $\frac{6}{12}$



Draw a parallelogram.

Fill in the missing number.

$$\frac{6}{6} = \square$$

$$\frac{\square}{3} = 3$$

Compare the fractions using  $>$ ,  $<$ , or  $=$ .

$$\frac{5}{6} \bigcirc \frac{5}{8}$$

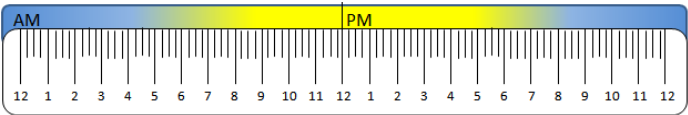
Gracie ate  $\frac{3}{8}$  of the cookies, and Emma ate  $\frac{3}{6}$ . Who ate more cookies?

Compare the fractions using  $>$ ,  $<$ , or  $=$ .


$$\frac{3}{4} \bigcirc \frac{3}{6}$$

Jonathan has a bag of marbles.  $\frac{4}{8}$  of the marbles are red, and  $\frac{1}{8}$  of the marbles are blue. Are there more red or blue marbles?

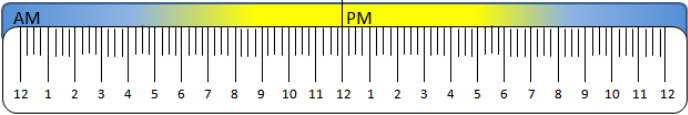
School starts at 8:15am. Recess is 5 hours and 15 minutes later. What time is recess?



Use the number line to solve the problem. Everyday at 9:15am Jessie takes his dog for a walk for 30 minutes. He then takes the next 2 hours to work on his computer before he eats lunch. What time does he eat lunch?



Ronnie goes to bed every night at 8:30pm. He sleeps for 10 hours and 15 minutes. What time does he wake up?



Andy wakes up at 6:45am. Before leaving for school, he takes 15 minutes to get dressed and 30 minutes to eat breakfast. What time does he leave for school?

