



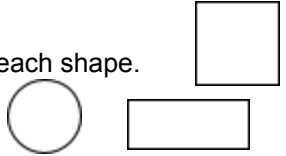








July 2025 – Second Grade Summer Math Calendar

	<p>1 Round these numbers to the nearest 10.</p> <p>57 31 88 25</p>	<p>2 I am thinking of a number between 10 and 100 that has one 9 in it. What might my number be?</p> 	<p>3 Mary has 14 flowers. Some are red and some are blue. List all the different combinations of red and blue flowers she can have.</p>	<p>4 Write all the addition sentences that have an answer of 9. Now write all the addition facts that have an answer of 10.</p> 
<p>7 Choose five books. Each book should have at least 50 pages. Write the page number of the last page of each book on a piece of paper. Round each number to the nearest ten.</p>	<p>8 Use a ruler to measure 5 things in your house. Arrange them in order from tallest to shortest.</p>	<p>9 Tell how many tens are in each number below.</p> <p>63, 48, 18, 95, 30</p>	<p>10 Write each number below in expanded form. (Ex. $234 = 200 + 30 + 4$)</p> <p>572, 386, 104, 840, 581</p>	<p>11 Find the following sums.</p> <p>$38 + 67 = \square$</p> <p>$75 + 13 = \square$</p> <p>$17 + 36 = \square$</p>
<p>14 Skip count by 2's, 5's, and 10's to 100. Write each pattern on a piece of paper.</p> 	<p>15 Use paper clips to measure a pencil, pen and book. Draw a picture of the items from shortest to longest.</p> 	<p>16 Draw these shapes. Color $\frac{1}{4}$ of each shape.</p> 	<p>17 Use coins to count back the change you would get if you bought candy for 12 cents and paid for it with a quarter.</p> 	<p>18 Decide if these equations are true or false. Explain why to a family member.</p> <p>$21 + 38 = 35 + 24$ $87 - 35 = 80 - 29$ $37 + 39 = 32 + 44$ $30 + 43 = 26 + 47$</p>
<p>21 Start at 8, add 4, subtract 6, and add 9. What is the answer?</p> 	<p>22 What number is less than 80 and has the same ones digit as 76?</p> 	<p>23 Which number does not belong in the set below? Explain why it does not belong.</p> <p>382, 981, 561, 87, 784</p>	<p>24 Bill bought a toy for 57¢. He paid with 3 quarters. How much change will he get back?</p> 	<p>25 Which number sentence does not belong? Why?</p> <p>$14 - 7 = \square$ $3 + 4 = \square$</p> <p>$16 - 9 = \square$ $8 + 7 = \square$</p>
<p>28 Is the number of pets in your house greater or less than the number of people? Write a number sentence using is greater than or is less than sign to show this.</p> 	<p>29 What time did you go to bed last night? What time did you get up this morning? Draw 2 clocks and show these times.</p> 	<p>30 I am thinking of a number between 40 and 100 that has one 5 in it. What might my number be?</p>	<p>31 Look at a calendar. On what days of the week do the 5th, 13th, 26th and 30th fall?</p> 