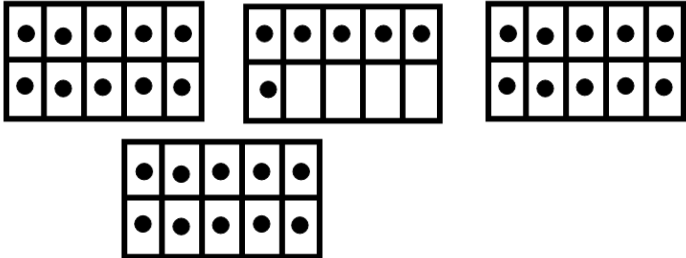
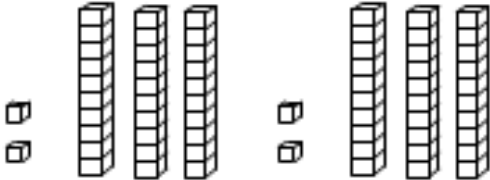
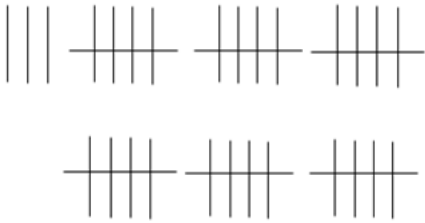



Grade 2 – Unit 7: Addition & Subtraction and Extending Number Sense – Place Value

1. Write the numeral represented by these images.

a.		<p>_____</p>
b.		<p>_____</p>
c.		<p>_____</p>
d.		<p>_____</p>

Name _____ Date _____

2. Show 75 in three different ways using expressions and/or pictures.

--	--	--

3. Grade 2 students order milk for recess. There are 9 white milk and 23 chocolate milk. How many more chocolate milk were ordered? Solve and show your thinking.



Write the number sentence that matches this story.

Name _____ Date _____

4. Jarod has a 32 pack of markers. He is giving away all of the blue ones. Now he has 24 markers left in the package. How many blue markers did he give away?
Solve and show your thinking.



Write the number sentence that matches this story.