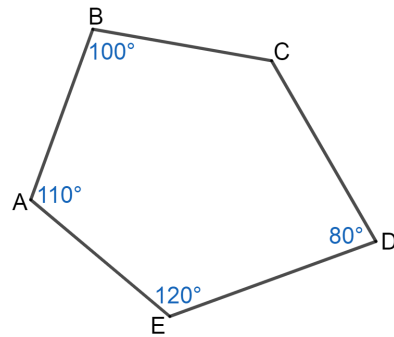
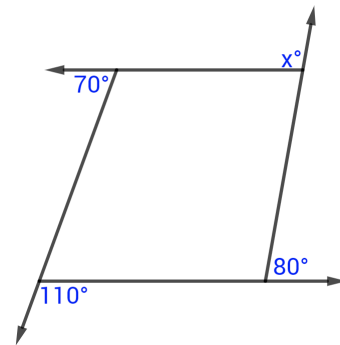


Warm Up

What is the measure of $\angle C$?

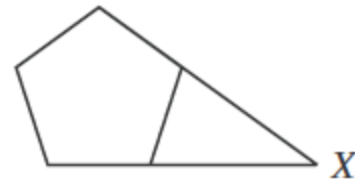


What is the value of x ?



In the figure below, 2 nonadjacent sides of a regular pentagon (5 congruent sides and 5 congruent interior angles) are extended until they meet at point X. What is the measure of $\angle X$?

- A. 18°
- B. 30°
- C. 36°
- D. 45°
- E. 72°



How many times can Texas fit vertically across the US?

Too Low	Official Guess	Too High