

NOME: _____

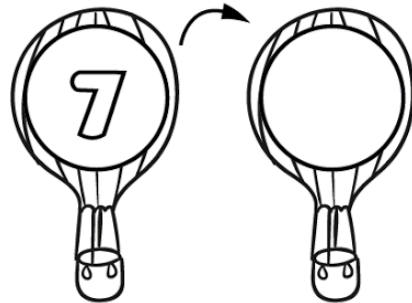
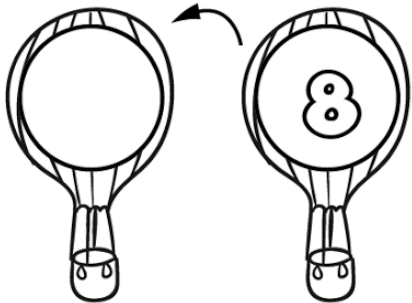
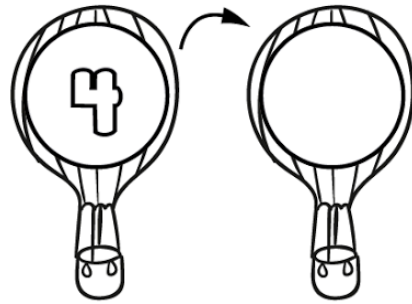
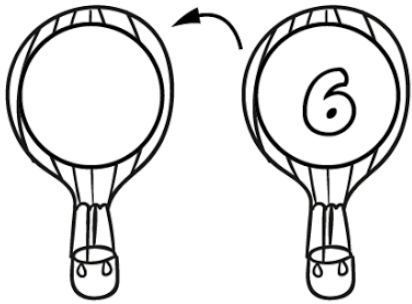
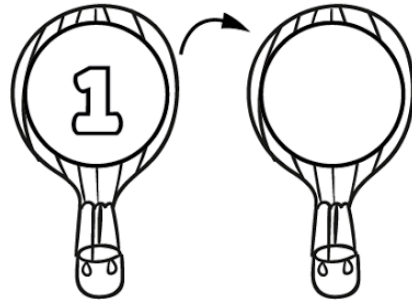
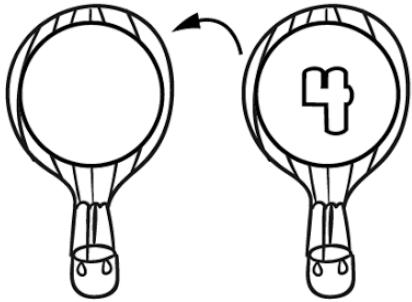
MATEMÁTICA

1 2 3 4 5 6 7 8 9 10

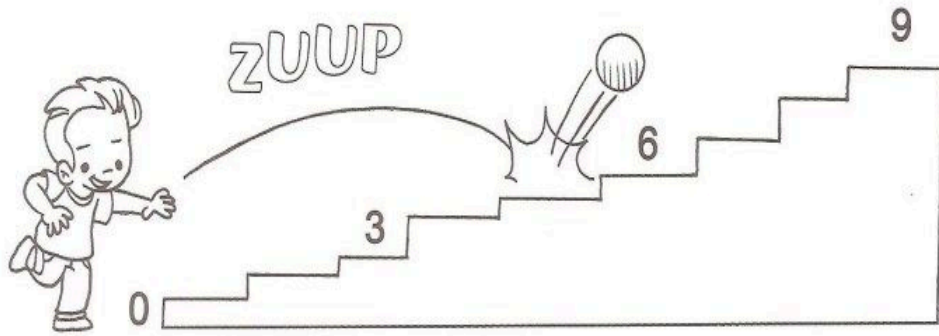
DE ACORDO COM A ORDEM NUMÉRICA, QUE NÚMERO VEM:

ANTES

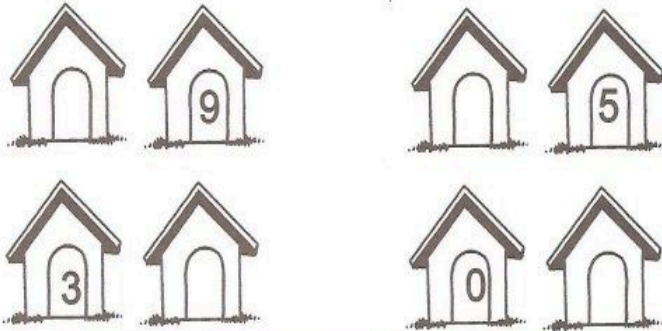
DEPOIS




- 1) COMPLETE A ESCADA COM OS NUMERAIS QUE FALTAM. ESCREVENDO-OS NA ORDEM CRESCENTE.



- 2) QUEM VEM ANTES OU DEPOIS?



- 3) ESCREVA NA CENTOPÉIA OS NUMERAIS DE 0 A 9 NA ORDEM CRESCENTE.



ALUNO(A): _____



MEIOS DE TRANSPORTES

1- CLASSIFIQUE OS MEIOS DE TRANSPORTES, SEGUINDO A LEGENDA

1

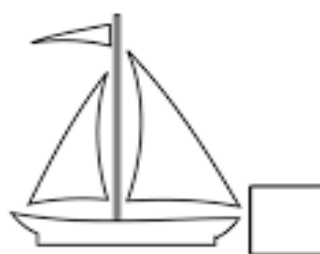
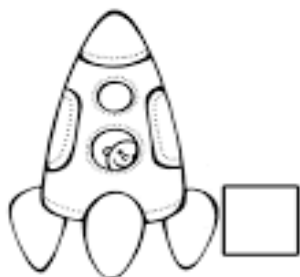
AÉREO

2


TERRESTRE

3

AQUÁTICO



NOME: _____ DATA: ___/___/___

 RECORTE OS DESENHOS, MONTE-OS NO CADERNO E PINTE-OS COMO DESEJAR. DEPOIS, DIGA O NOME DE CADA MEIO DE TRANSPORTE PARA O PESSOAL DE CASA

