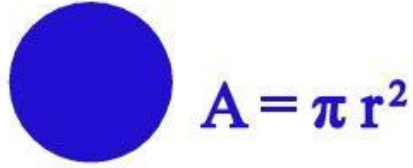
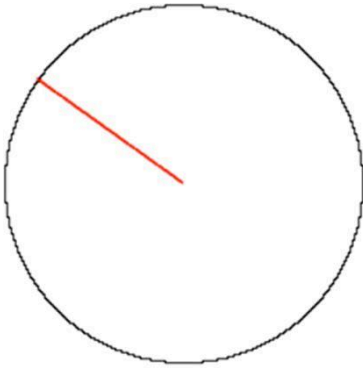


The Area of a Circle



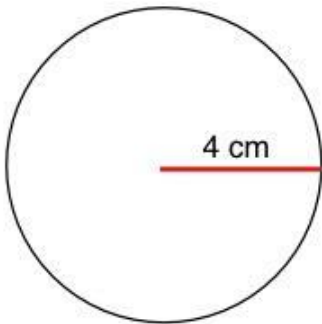
Question 1

What is the area of the following circle?



Question 2

What is the area of the following circle?



Question 3

What is the area of the following circle?

