


## Assessment Time

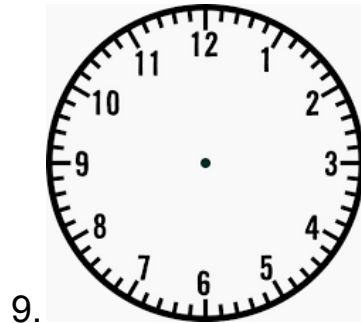
Fill in the blanks:

1. There are \_\_\_\_ minutes in 1 hour.
2. There are \_\_\_\_ hours in 1 day.
3. There are \_\_\_\_ days in 1 week.
4. There are \_\_\_\_ months in 1 year.

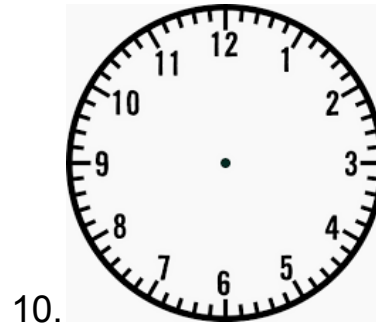
Write the digital time for the following clocks:



Write the analog time for the following clocks:



12:44



1:17

Solve the following elapsed time problems:

11. If you have swimming lesson for 45 minutes and you start swimming lessons at 3:30 pm. What time are your lessons over?

---

---

12. If you go to a movie that is 1 hour and 30 minutes long and the movie starts at 7 o'clock pm. What time should you get picked up at?

---

---

13. Your class goes on a field trip. The field trip starts at 9:30 am and ends at 2:30 pm. How long is your field trip?

---

---

14. If you lunch and recess start at 11:20 am and ends at 12:10 pm, how long is your lunch and recess break?

---

---

