

NAME _____


DATE _____





Doubles & More page 1 of 2


1 Add.

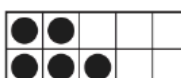
$$\begin{array}{r} 0 \\ + 0 \\ \hline \end{array}$$

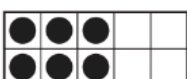

$$\begin{array}{r} 0 \\ + 1 \\ \hline \end{array}$$


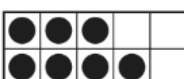
$$\begin{array}{r} 1 \\ + 1 \\ \hline \end{array}$$


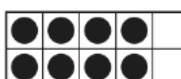
$$\begin{array}{r} 1 \\ + 2 \\ \hline \end{array}$$



$$\begin{array}{r} 2 \\ + 2 \\ \hline \end{array}$$



$$\begin{array}{r} 2 \\ + 3 \\ \hline \end{array}$$


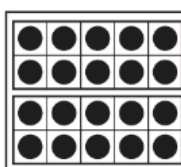
$$\begin{array}{r} 3 \\ + 3 \\ \hline \end{array}$$


$$\begin{array}{r} 3 \\ + 4 \\ \hline \end{array}$$


$$\begin{array}{r} 4 \\ + 4 \\ \hline \end{array}$$


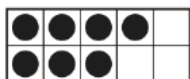
$$\begin{array}{r} 4 \\ + 5 \\ \hline \end{array}$$


$$\begin{array}{r} 5 \\ + 5 \\ \hline \end{array}$$


$$\begin{array}{r} 10 \\ + 10 \\ \hline \end{array}$$


2 Find the sums. Make dots in the frames to show the answers.

$4 + 3 = \underline{\quad 7 \quad}$



$3 + 2 = \underline{\hspace{2cm}}$



$5 + 4 = \underline{\hspace{2cm}}$



$4 + 4 = \underline{\hspace{2cm}}$



$4 + 3 = \underline{\hspace{2cm}}$



$5 + 5 = \underline{\hspace{2cm}}$




$2 + 3 = \underline{\hspace{2cm}}$



$4 + 5 = \underline{\hspace{2cm}}$



$2 + 2 = \underline{\hspace{2cm}}$



(continued on next page)


NAME _____

DATE _____

Doubles & More page 2 of 2

- 3** Gus had some fish. He got 6 more fish at the pet store. Now he has 11 fish. How many fish did Gus have to start with? Show your work.

Gus started out with _____ fish.



- 4 CHALLENGE** Mrs. Jones has ducks and sheep on her farm. The animals have a total of 6 heads and 16 legs. How many ducks does Mrs. Jones have? How many sheep does Mrs. Jones have? Show your work.

Mrs. Jones has _____ ducks and _____ sheep.



