

NAME

DATE

PERIOD

Section D: Practice Problems

- a. Find the value of $1 \div 0.01$. Use the diagram if it is helpful.



- b. Jada says that there are 100 hundredths in 1 so $1 \div 0.01$ is 100. Do you agree with Jada? Show or explain your reasoning.


(From Unit 5, Lesson 22.)

- a. Find the value of $2 \div 0.2$. Use the diagram if it is helpful.

NAME _____

DATE _____

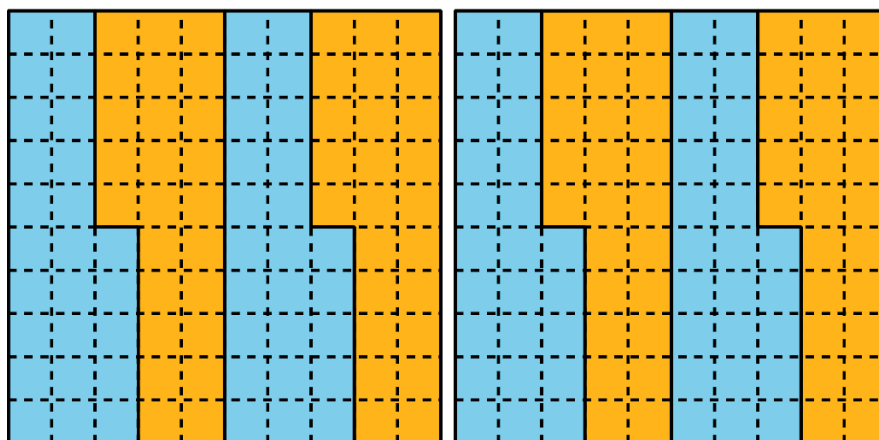
PERIOD _____



b. Find the value of $21 \div 0.2$

(From Unit 5, Lesson 23.)

1. Here is a diagram.



a. Explain or show how the diagram shows $200 \div 25$. What is the value of the expression?

NAME _____

DATE _____

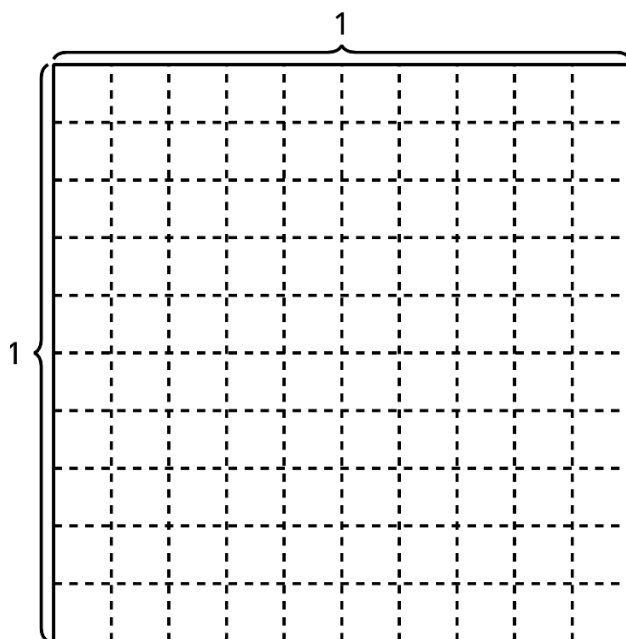
PERIOD _____

- b. Explain or show how the diagram shows $2 \div 0.25$. What is the value of the expression?

(From Unit 5, Lesson 23.)

2. Find the value of each expression. Explain or show your reasoning.

- a. $0.2 \div 5$. Use the diagram if it is helpful.



- b. $6 \div 3$

- c. $6 \div 0.3$

(From Unit 5, Lesson 24.)

3. Find the value of each expression. Explain or show your reasoning.

- a. $0.5 \div 0.1$

- b. $0.5 \div 0.01$

- c. $3.5 \div 0.01$

(From Unit 5, Lesson 25.)

4. Exploration

NAME	DATE	PERIOD
------	------	--------

Noah has a scale that weighs to the nearest ounce. The table shows the weights of different numbers of paper clips in ounces.


paper clips	weight
1	0
10	0
20	1
25	1
50	2
100	3

How many ounces do you think each paper clip weighs? Explain or show your reasoning.

5. Exploration

The daily recommended allowance of vitamin C for a 5th grader is 0.05 grams.

- a. A vitamin C tablet has 1 gram of vitamin C. How many times the daily recommended allowance of vitamin C is one vitamin C tablet? Use the diagram if it is helpful.




NAME _____

DATE _____

PERIOD _____

- b. A large orange has 0.18 grams of vitamin C. How many times the daily recommended allowance of vitamin C is in a large orange? Use the diagram if it is helpful.



© CC BY 2021 Illustrative Mathematics®