




Today's Goal: I will be able to identify triangles by their angles.

Lesson Guide:


Right Triangle

•contains one
right angle (90°)



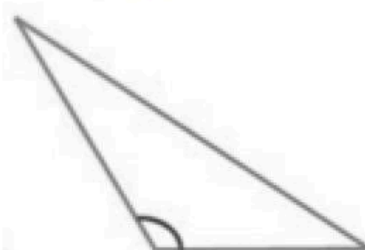
Acute Triangle

•contains three
acute angles (1° - 89°)




Obtuse Triangle

•contains one obtuse
angle (91 - 179°)




Guided Practice:



This is a(n): obtuse triangle because
it contains one obtuse angle.

Independent Practice:



This is a(n): _____ because

