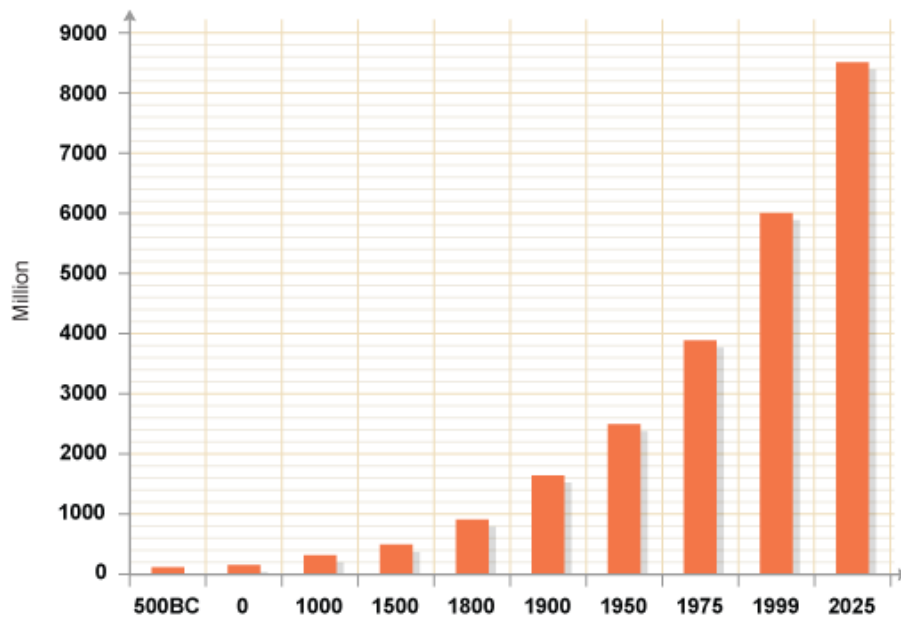


## Year 8 Population and Migration

There is approximately 7 billion people on Earth.

7000 million = 7 billion



Using the graph above, describe how the world population has changed over time. You should refer to **data** from the graph as evidence.

---

---

---

---

The global population began increasing much faster from 1900. Give one reason for this rapid increase.

---

---

**Key terms:** Match up key terms to definitions - draw a line.

Population density	The average age someone is expected to live to.
Sparsely populated	The average number of people in a sq km.
Infant mortality	Lots of people within a certain area.
Death rate	The number of people that die per year.
Densely populated	Few people within an area
Life expectancy	The number of children that die before the age of 1 years old per year.

**Write a definition or key term to complete the table.**

Key term	Definition
Push factor	
Pull factor	
	The movement of people from one place to another
Birth rate	

Explain why a city such as London has a high population density.

---

---

---

---

Explain why an area such as the Sahara Desert has a low population density.

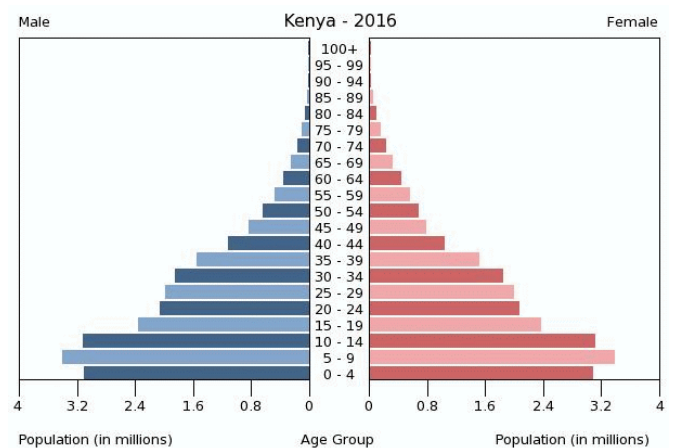
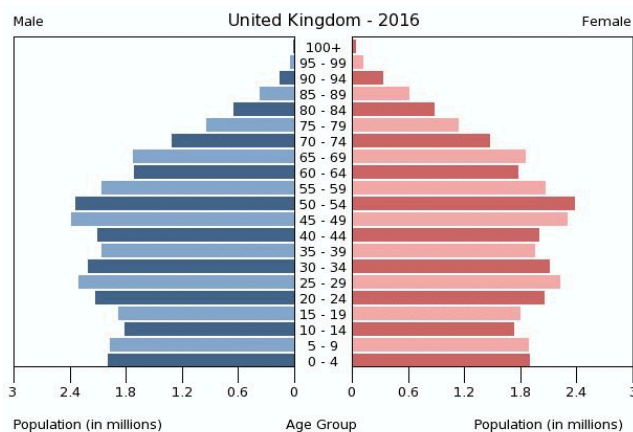
---

---

---

---

## Population pyramids



Above shows two population pyramids, one for Kenya and one for the UK.

Identify two differences between the population pyramids for the UK and Kenya. (Tip - refer to key terms, such as life expectancy, birth rate, infant mortality etc)

1) \_\_\_\_\_

2) \_\_\_\_\_

Suggest why a government may use a population pyramid - why is it useful?

---

---

---

---

## One Child Policy

The One Child Policy limited Chinese families to only having one child. This recently changed in 2016 to allow Chinese families to have two children.

Why did China introduce the One Child Policy?

---

---

There are a range of **stakeholders** that have different views on the One Child Policy.

**Stakeholder: someone that is involved in the situation or change  
eg. The Chinese government.**

Task - Plot stakeholders along the opinion line below to show what you believe their opinion would be of the One Child Policy.

**Chinese government**

**Chinese family**

**Child**

**Doctor in China**

**Farmer in China**

AGREE



DISAGREE

Why were millions of girls aborted or abandoned? Why were boys favoured in a family - suggest at least 2 reasons.

---

---

---

---

Do you agree with the One China policy? - justify your opinion by giving multiple reasons.

---

---

---

**Migration:**

Many people are migrating for a number of reasons. Push factors are why people want to leave an area. Pull factors are why people want to go to a place.

Write 3 examples of push and pull factors in the table.

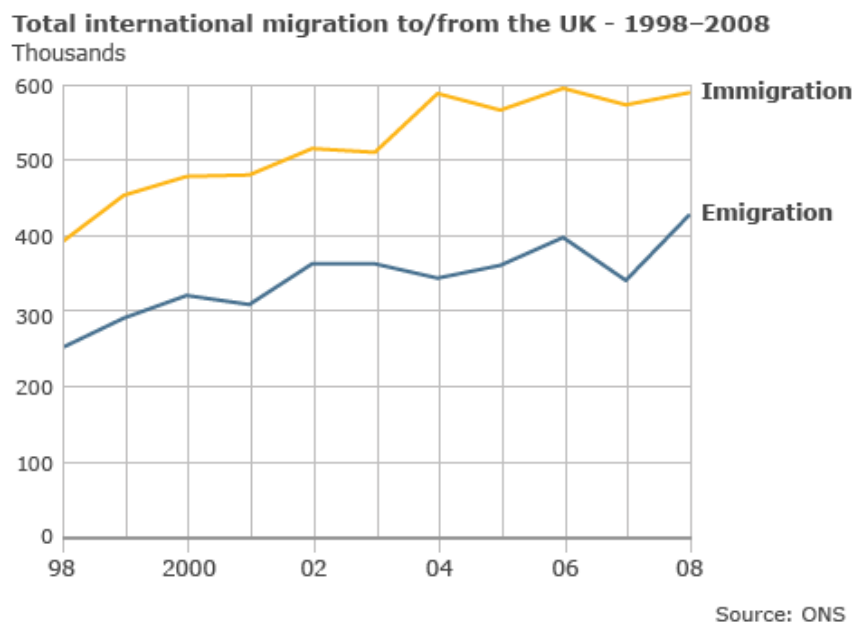
Push factors	Pull factors

**Challenge** - Which push factor is the most important reason for someone migrating from Mexico to the USA?

Create a mind map of **positive** and **negative** impacts of migration. Either wrote the **positive** and **negative** impacts in different colours or colourcode them!



### Migration into Britain.



What is immigration?

What is emigration?

How many immigrants were there in 2006 (Hint - look at the units)