
NAME

DATE

PERIOD

Grade 1, Unit 5, Section A: Additional Practice Problems

1. Han and Elena added

$$6 + 32.$$

Han says the sum is 92.

Elena says the sum is 38.

- a. Which child is correct?

- b. Explain why you agree with the child you choose using drawing or audio.

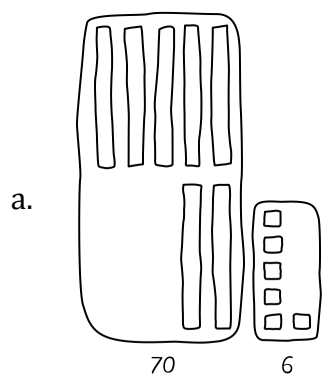
(From Unit 5, Lesson 1.)

NAME

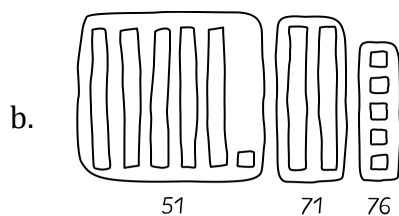
DATE

PERIOD

2. Noah and Jada represented $51 + 25$.
Which equations go with which drawings?



- Set A
 $51 + 20 = 71$
 $71 + 5 = 76$



- Set B
 $50 + 20 = 70$
 $1 + 5 = 6$
 $70 + 6 = 76$

Show your thinking using drawings, numbers, words, or equations.

(From Unit 5, Lesson 2.)

NAME

DATE

PERIOD

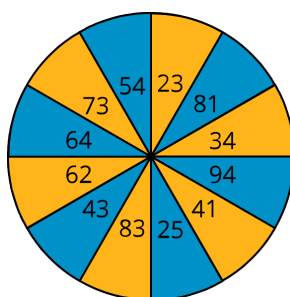
3. Find the value of $46 + 23$ using drawings, numbers, or words. Write equations to represent your thinking.

(From Unit 5, Lesson 3.)

4. EXPLORATION

Diego is playing “What did I add?” He spins the spinner to get a number and then picks a number on a card to add to it.

He ends up with numbers all between 50 and 60 when he spins and adds. What are all 7 ways this can happen?



Show your work with words, equations, or drawings.