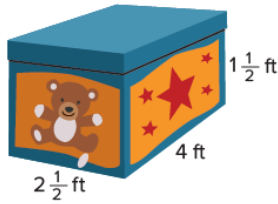
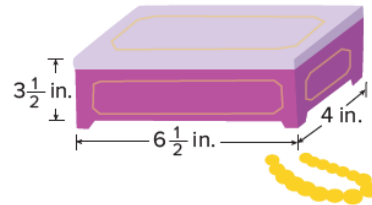


## Volume of Rectangular Prisms Practice


1. Geneva's younger brother has a toy box that is shaped like a rectangular prism with the dimensions shown. What is the volume of the toy box?



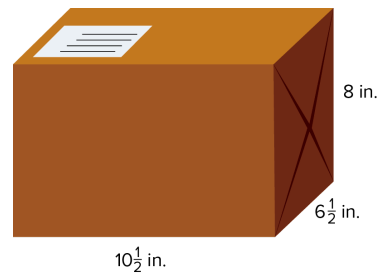
2. Roy made a jewelry box in the shape of a rectangular prism with the dimensions shown. What is the volume of the jewelry box?



3. Duska borrowed a book from the library that is shaped like a rectangular prism with the dimensions shown. What is the volume of the book?



4. Ken received a package in the mail that is shaped like a rectangular prism with the dimensions shown. What is the volume of the package?



5. A rectangular prism has a length of 8 inches, a width of  $7\frac{1}{2}$  inches, and a height of  $6\frac{1}{4}$  inches. What is the volume of the prism?



NAME

DATE

PERIOD