

Name: _____

date: _____

Solving Equations

Q1) Solve.



Cup represents the unknown variable



Q2) Solve.



Q3) Solve.



Q4) Solve.



A1)

ANSWERS

Name: _____ Oct 2018

$$X + 3 = 5$$




Cup represents the unknown variable



$$X + 3 - 3 = 5 - 3$$



Cup represents the unknown variable






$$X = 2$$

A2)

ANSWERS

Name: _____ Oct 2018



$$x = 2$$