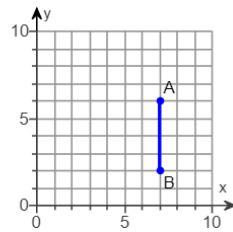


For those who CANNOT access Digits and have talked to me about it, you can access the homework problems here.

You can either “Make a Copy” of this document and type your answers below the question OR do your homework on paper and turn it in to me by the due date.

1.

Find the distance between point A and point B.



The distance between point A and point B is units.

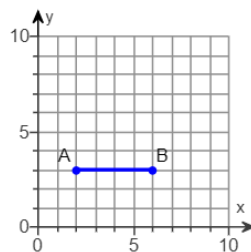
2.

What is the distance between the points (0,9) and (0,15)?

The distance between the two points is units.

3.

Find the distance between point A and point B.



The distance is units.

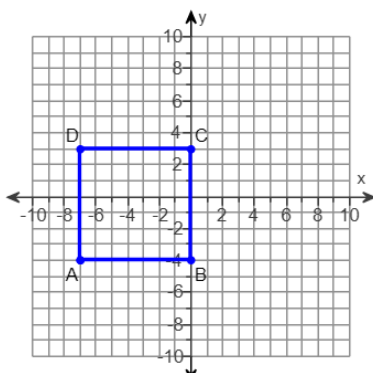
4.

What is the distance between $(3, -2)$ and $(17, -2)$?

The distance between the two points is units.

5.

What is the length of side AD?



The length of side AD is units.