

NAME _____

DATE _____

PERIOD _____

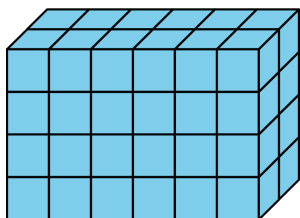
Grade 5, Unit 1, Section A: Additional Practice Problems KEY

1. A, B, E

2. B

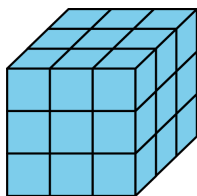
3.

a.



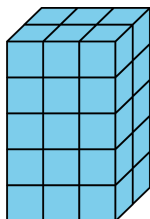
• 3×9

b.

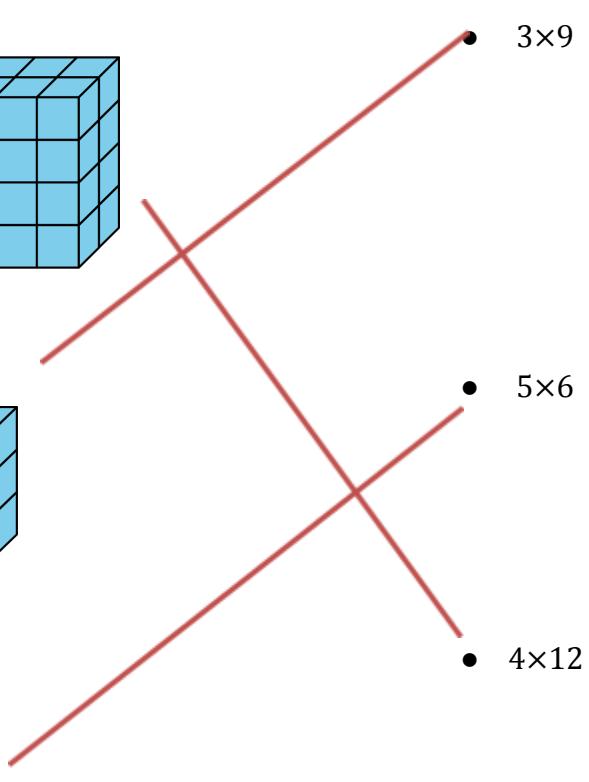


• 5×6

c.



• 4×12



4.

a. B, E

b. C, E

5. EXPLORATION

Sample response:

NAME

DATE

PERIOD

- 180 cubes; Sample response: Prism D would have 4 layers of 25 cubes. Prism E would have 5 layers of 36 cubes.