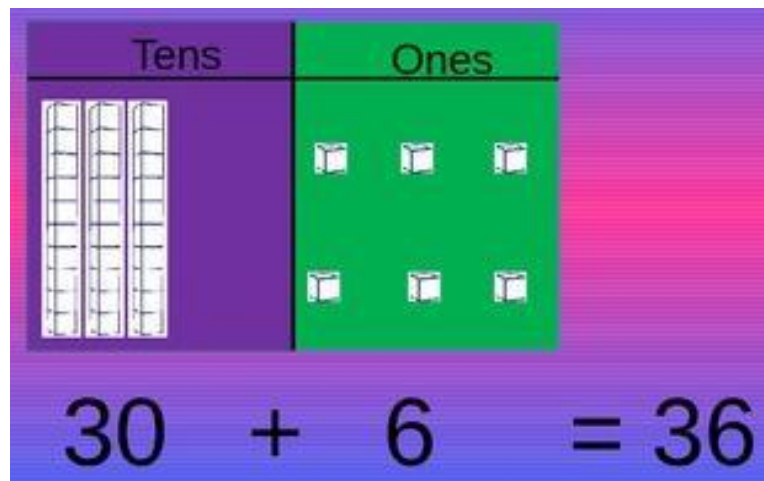
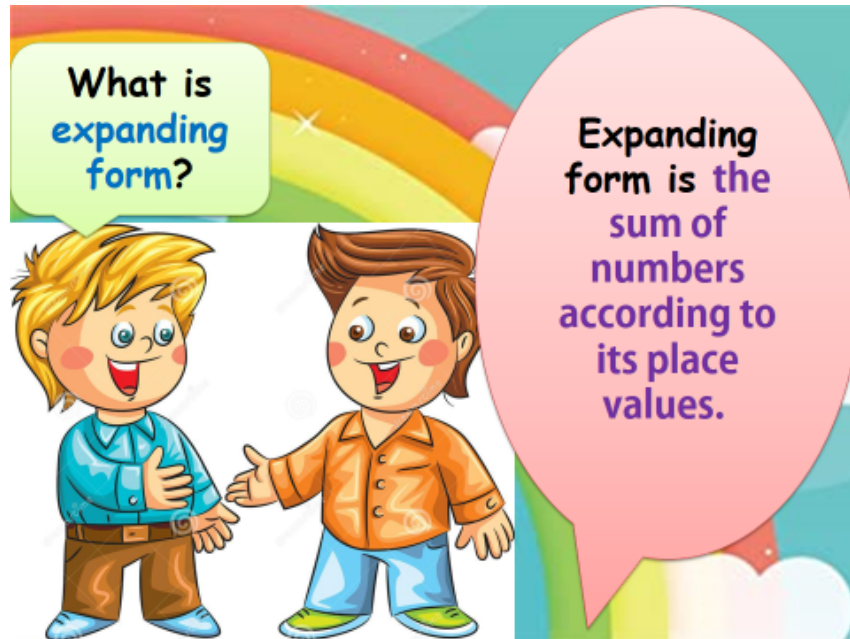


MATHS HANDOUT

Tens and More



Numbers: Expanded Form

Write the **expanded form** of the numbers below.

$$23 = \underline{20} + \underline{3}$$

$$55 = \underline{\quad} + \underline{\quad}$$

$$17 = \underline{\quad} + \underline{\quad}$$

$$89 = \underline{\quad} + \underline{\quad}$$

$$96 = \underline{\quad} + \underline{\quad}$$

$$42 = \underline{\quad} + \underline{\quad}$$

$$74 = \underline{\quad} + \underline{\quad}$$

$$68 = \underline{\quad} + \underline{\quad}$$

$$31 = \underline{\quad} + \underline{\quad}$$

$$26 = \underline{\quad} + \underline{\quad}$$

Fill in the numbers to complete each addition sentence.

$$\underline{\quad} = 10 + 2$$

$$\underline{\quad} = 20 + 4$$

$$\underline{\quad} = 40 + 8$$

$$\underline{\quad} = 70 + 3$$


$$\underline{\quad} = 90 + 1$$

$$\underline{\quad} = 30 + 7$$


$$\underline{\quad} = 50 + 6$$

$$\underline{\quad} = 60 + 9$$

Greater than, Less than



Remember! The hungry alligator always eats the largest number.



1) 91 27

2) 83 65

3) 57 59

4) 69 72

5) 22 11

6) 36 25

7) 38 20

8) 36 53

