



KENDRIYA VIDYALAYA .....

SESSION ENDING EXAM (2022-23)

Subject: English

Class: V \_\_\_\_\_

Time: 1 hours 30 Min

Max. Marks: 40

Name: \_\_\_\_\_

Roll No.: \_\_\_\_\_

Date: \_\_\_\_\_


Observation	Identification	Discovery of Facts	Total
15	12	13	40

Sign of the Invigilator: \_\_\_\_\_ Sign of Subject Teacher: \_\_\_\_\_

OBSERVATION

VSA  $1 \times 10 = 10$

Q.1) (a) Observe the picture and list any five kinds of work being done by people



\_\_\_\_\_

\_\_\_\_\_

Q.1) (b) Observe and write

i) Name the natural disaster from which the boy is trying to save himself.

\_\_\_\_\_



ii) What is Mini doing to cool her tea?



iii) P.V. Sindhu is the first woman to win silver medal in Olympics. Which sports does she play? \_\_\_\_\_.



iv) Damajibhai made his wooden box to store seeds which leaves are kept in the grain box to protect them from insects? \_\_\_\_\_

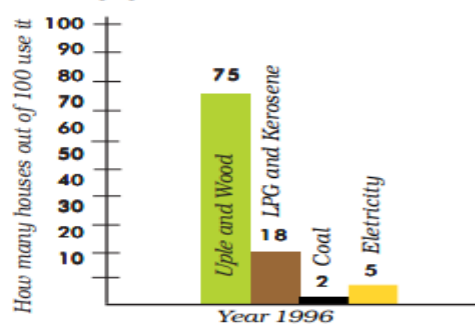
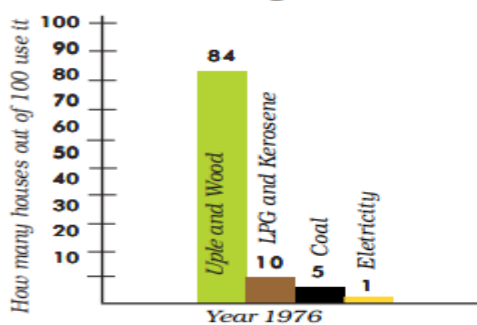


v) Sati has polio, will her child also have polio? \_\_\_\_\_



**Q.2) Observe the bar chart and write the answers.**

$$1 \times 5 = 5$$



i) In year 1976 out of 100 how many houses used uple and wood?

Ans:- \_\_\_\_\_

ii) Which fuel was used the least in 1976?

Ans:- \_\_\_\_\_

iii) in 1976 LPG and kerosene were used in \_\_\_\_\_ houses and in 1996 this increased to \_\_\_\_\_.

This means that in twenty years their use increased by \_\_\_\_\_%.

iv) Out of 100 how many houses used electricity in 1996?

Ans:- \_\_\_\_\_

v) Which fuel was used the least in 1996? What percentage of house used it in the year 1976?

Ans:- \_\_\_\_\_

### IDENTIFICATION

VSA  $5 \times 1 = 5$

**Q.1 A) Choose the correct answer from the bracket.**

i) Polio is caused by \_\_\_\_\_. (bacteria / virus)

ii) \_\_\_\_\_ air is light and rises up. ( Hot / cold)

iii) Forest dwellers are called \_\_\_\_\_. (changpas / adivasis )

iv) There is need to \_\_\_\_\_ petrol. ( Waste / save )

v) \_\_\_\_\_ is indoor game. ( football / chess )

**Q.1 B) Identify**

i) Many families in Srinagar live in a \_\_\_\_\_.



ii) Name the plant on which Gregor Mendel did his experiments.

Ans:- \_\_\_\_\_



They look exactly alike. They are called \_\_\_\_\_.

iv) Name the place \_\_\_\_\_.



v) He lends money as loan to villagers he is a \_\_\_\_\_.

**LA: 1 X 2 = 2**

**Q.4) Write a short note on 'Jhoom farming'.**

Ans: \_\_\_\_\_  
\_\_\_\_\_  
\_\_\_\_\_  
\_\_\_\_\_

**DISCOVERY OF FACTS**

**Q.1) Match the columns:**

**1 X 5 = 5**

- |                |  |
|----------------|--|
| a) Stethoscope | 1) shortage of water and food              |
| b) Famine      | 2) Co-operation                            |
| c) Narmada Dam | 3) Instrument used to listen to heartbeats |
| d) Team Games  | 4) Agent who lends money                   |
| e) Mukadam     | 5) Gujarat.                                |

**S A**

**Q.2) Answer in short**

**1 X 3 = 3**

i) Write full forms of

LPG \_\_\_\_\_

ii) Fill in the gaps to compare modern and traditional method of farming.

MODERN FARMING	TRADITIONAL FARMING
	bullock
Chemical fertilizers	
Motor pump and pipes for water	
Medicines to spray to keep away insects	

LA

Q.3) Locate the following states on the map of India and colour them.

5 X 1 = 5

( Gujarat , Mizoram, Jammu & Kashmir , Goa and Jharkhand )

