





<p>1.</p> 	<p>2.</p> 
<p>3.</p> 	<p>4.</p> 

graphics by KPM Doodles

1. 2.

3. 4.

graphics by KPM Doodles

Draw a circle. Draw a circle. Divide it into
Divide it
into 2 equal parts.

4 equal

parts. Show this





Show this

frac on: $\frac{1}{2}$

frac on: $\frac{1}{4}$

Draw a circle. Divide it into 3 equal parts. Show this frac on: $\frac{1}{3}$

Draw a circle. Divide it into 4 equal parts. Show this frac on: $\frac{2}{4}$

<p>5.</p> 	<p>6.</p> 
<p>7.</p> 	<p>8.</p> 

graphics by KPM Doodles

5. 6.

7. 8.





graphics by KPM Doodles

Draw a triangle. Divide it into 2 equal parts. Show this frac on: $\frac{1}{2}$

Draw a square. Divide it into 2 equal parts. Show this frac on: $\frac{1}{2}$

Draw a square. Divide it into 4 equal parts. Show this frac on: $\frac{3}{4}$

Draw a rectangle. Divide it into 2 equal parts. Show this frac on: $\frac{1}{2}$

<p>9.</p>  <p>Draw a rectangle. Divide it into 3 equal parts. Show this fraction: $\frac{1}{3}$</p>	<p>10.</p>  <p>Draw a circle. Divide it into 6 equal parts. Show this fraction: $\frac{4}{6}$</p>
<p>11.</p>  <p>Draw a circle. Divide it into 6 equal parts. Show this fraction: $\frac{5}{6}$</p>	<p>12.</p>  <p>Draw a heart. Divide it into 2 equal parts. Show this fraction: $\frac{1}{2}$</p>

graphics by KPM Doodles

9. 10.

11. 12.

graphics by KPM Doodles

Draw a rectangle.

circle. Divide it into 3

Draw a

Divide it

into 6 equal parts. Show

equal parts.

Show this frac on: $\frac{1}{3}$

this frac on: $\frac{4}{6}$

Draw a circle.

Draw a

heart. Divide it into 6

Divide it

into 2 equal parts. Show

equal parts.

Show this frac on: $\frac{5}{6}$

this frac on: $\frac{1}{2}$

Name _____

Fraction Task Cards

Read each card and find the correct box. Draw the shape and make the correct fraction.

1.	2.	3.	4.
5.	6.	7.	8.
9.	10.	11.	12.



graphics by KPM Doodles

Name _____

_____ Fraction Task Cards

Read each card and find the correct box. Draw the shape and make the correct fraction.

1. 2. 3. 4.

5. 6. 7. 8.

9. 10. 11. 12.

graphics by KPM Doodles