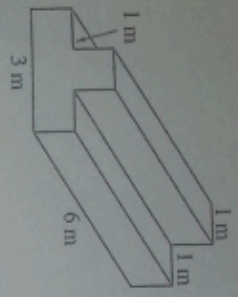


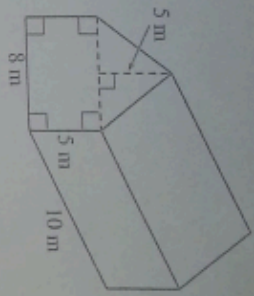
求下列角柱體的體積。(題1-6)

1.



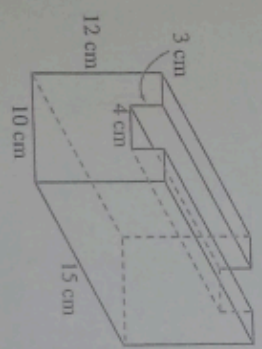
體積 = _____

2.



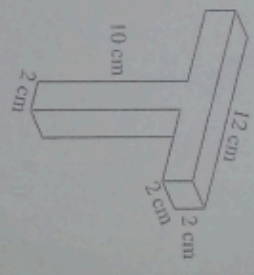
體積 = _____

3.



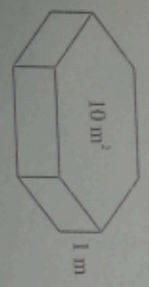
體積 = _____

4.



體積 = _____

5.



6.

