








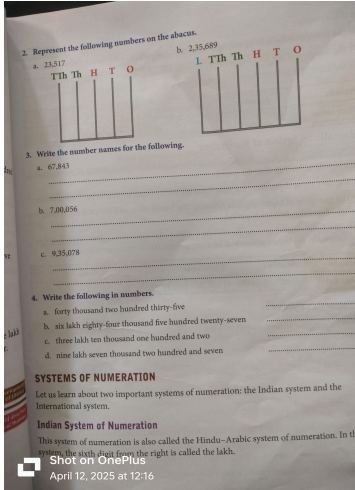
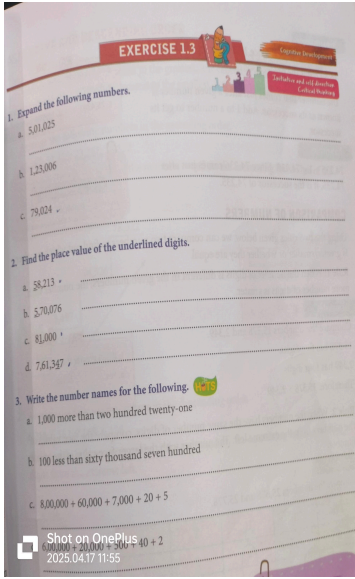
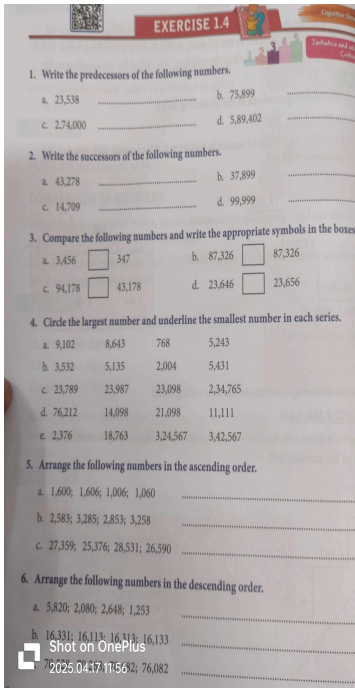


T.Izardar sir
4th lotus Maths

N o .	Date	Lesson	CW	HW
0 1	02/04/2025	Number beyond of 10,000 	Fundamental knowledge Digit number	Q.1 Write the number 1 to 100 Q.2 Write the number name 1 to 100 in words
0 2	03/04/2025	Digit number Smallest and Largest number Indian system place value chart 		Which is the smallest four digit number Which is the largest 6 digit number Write the table 2 to 15 Lean
3	05/04/2025	Exercise 1.1 Full in the blanks Examples Write the given number in the Indian system 	 EXERCISE 1.1 1. Fill in the blanks. a. The greatest five-digit number is b. The smallest six-digit number is c. hundreds make a thousand. d. thousands make a lakh.	Write the given number in the Indian system A.23,517 B.67,843 C.9,35,078 D.2,35,689
0 4	07/04/2025	Sports day 		Write the given number in the Indian system A.23,517 B.67,843 C.9,35,078 D.2,35,689

05	08/04/025	Story of Number system and Zero		<p>Q.1 In which Indian manuscript is the invention of zero mentioned ?</p> <p>Q.2 Who developed the counting number?</p>
	09/04/025	Maths Activity		Write the odd and even number 1 to 100
	11/04/025	Maths Activity		Write the odd and even number 1 to 100
	12/04/025	Exercise 1.1 International system Exe		<p>Write the given number in the international system</p> <p>418723 202124 628702</p>
	15/04/25	Sports day		<p>Write the given number in the international system</p> <p>418723 202124 628702</p>

	<p>17/04/02 5</p>	<p>Exercise 1.3</p>	 	<p>Write the place value and face value</p> <p>A.5823</p> <p>B.81000</p> <p>C.7,61,347</p> <p>D.79024</p>
--	-----------------------	---------------------	--	---

