


Answer all questions

NO.	QUESTIONS	WORKING PLACE	ANSWER
1	Grade five pupils were asked to identify the correct position of digit 7 in the numeral 70965. Which correct answer did they get?		
2	How can you write six hundred and six thousand and six correctly?		
3	Write 34.654 in word.		
4	During mathematics session, a teacher wrote 7968 on the chalkboard and asked the pupils to re-write it to be the biggest digit four numbers formed. Which correct answer did they write?		
5	A certain pupil was asked to write the name of the figure below <div style="text-align: center;"> <p>20cm                  20m</p> <p>20 cm</p> </div> Which correct answer did pupils get		
6	Mother bought two and a half kilograms of meat. Write that fraction into an improper fraction		
7	In Wambura's Farm there are 846 goats, 8,076 sheep and 405 chickens. What is the total number of animals in the Wambura's farm?		
8	$\text{IV}/_{\text{VIII}} + \text{III}/_{\text{VIII}} =$ (Answer in Arabic numbers)		
9	Use prime factorization method to analyze all factor of 72.		
10	Which fraction among the following fractions is improper fraction? $\left[ \frac{11}{3}, \frac{11}{3}, 3\frac{2}{3}, 3\frac{2}{3}, \frac{5}{6}, \frac{5}{6}, 0.69 \right]$		

11	Kokunuza who is grade five now was asked to identify all multiples of 6 which are between 12 and 39 Which correct did she write?		
12	Basing on concept of multiples that you have learned from your Math teacher, what are the first three multiples of 8?		
13	Find the next number in the series 29, 23, 19, _____, _____		
14	Grade five pupils were asked by their Math-teacher to identify the first two common multiples of 6 and 7. Which correct answer did they write?		
15	Kyoma and Halima shared 600,000 shillings equally. How much did each get?		
16	Write in figures Eight hundred thousand two hundred and eighty eight		
17	How many prime numbers are there from 30 to 40		
18	Mr. Anold had forty-five goats. He shared his goats among his seven children. How many goats did each child got? And how many goats did Mr. Anold remain with?		
19	The following watermelon shows the number of pupils at St.Mwombeki primary school.  If one watermelon represents 50 pupils. how many pupils are there?		
20	Kiumbo visited his sister Jane and stayed with her for exactly three days. How many hours did he stay at Jane's place?		
21	How many angles are in a pentagon figure?		
22	Work out the sum of all prime numbers which are in the following list of numbers		

	12, 13, 14, 15, 16, 17, 18, 19.		
23	A rectangular farm has a length of 55metres long and 25metres wide. What is the total distance around it?		
24	Three dogs bakes after every interval of 4minutes and 6minutes and 12minutes respectively. After how many minutes will the dogs together again?		
25	The weight of six seedlings were arranged in consecutive order such that, 11cm,16cm, 21cm, 26cm, 31cm, _____. What is the height of sixth seedling		
26	If three bells rings after an interval of 6 minutes, 8 minutes and 12 minutes altogether. After how long will they ring altogether once again?		
27	A grade five pupil was appointed by his mathematics teacher to write the reciprocal of $3\frac{1}{7}$ . Which correct answer did he give?		
28	Which Among the following fractions is the largest between $\frac{3}{6}$ and $\frac{2}{5}$ .		
29	At St Peter primary school there are 897 pupils, 45 teachers and 50 non-teaching staff. What is the total number of people at the school in Roman numerals?		
30	Five pupils were assigned to write all factors of 24. If they got correct answer which was it?		
31	What is the difference between 5 and 8.8?		
32	In a sport bonanza last year 137,932 pupils from different school 5,472 guests and 1379 staff members attended. How many people attended this occasion?		
33	Mr. Onesmo asked his pupils to write the total value of digit 9 in the numeral seven hundred		

	nine thousand five hundred twenty. What was the answer of the correct pupil?		
34	Mr. Gerald assigned a class five girl to find the sum of $\frac{5}{10}$ and $\frac{3}{5}$ . What answer did she get for him?		
35	Basing on concept of multiples that you have learned from your Maths teacher, what are the first three multiples of 13?		
36	Mary is 8 years older than Jane. Jane is 10 years old. How old is Mary?		
37	Madam Asha wrote the numbers 3, 4, 5, 6, 7, 8, 9, 10, 11, 12, 13, 14, 15. Madam Veronica also asked the pupils to list all even numbers which are also multiples of 3 from the list of numbers above. As a Maths expert in your class. What do you think is the correct answer?		
38	A primary has 240 pupils and 12 classrooms. If the number of pupils in each class is the same, how many pupils are in each class?		
39	Nurath bought fifteen sweets for Sh. 4500/=. How much was one sweet?		
40	In her birthday party Pendo bought 9 litres of alcohol. If each guest were given $\frac{1}{9}$ litres of alcohol. How many guests were there?		
	<b>SECTION:B</b>		
41	Grade five pupils were asked by their mathematics teacher to find the number that can divide 14 and 28. What number did they get?		
42	The perimeter of a figure is 480cm if one of its side is 150 cm, what is the measurement of the other side?		
43			





- a) regional administrative secretary    c) regional commissioner  
b) district commissioner                      d) city director

19. Which borders our country in the eastern part? \_\_\_\_\_

- a) Indian Ocean    b) Kenya                      c) Uganda    d) Malawi

20. Who is a criminal? \_\_\_\_\_

- a) A person who promote is our country  
b) A person who obey the laws of the country  
c) A person who follows laws  
d) A person who breaks the country`s lows

21. In which year did the law that prohibits the manufacture, supply and use of plastic bags in Tanzania come into force? \_\_\_\_\_

- a) 2004                      b) 2015                      c) 2019                      d) 2007

22. Recho is a pupil of standard five at Kazoba Primary School, she is not able to see well in her daily life. Therefore recho is a pupil with \_\_\_\_\_ impairment.

- a) mental                      b) hearing                      c) albinism                      d) visual

23. The ability of handling difficult challenges in daily life is known as \_\_\_\_\_

- a) Resilience                      b) Optimitics                      c) Patience    d) Trust worth person

24. Mr David asked by his pupils about different slogans of Tanzania presidents.

What was his correct answer if he started with the slogan of the first president to be elected after reintroduction of multiparty system? \_\_\_\_\_

a). Tranparency and truth  
b). socialism and self reliance  
c). Free market economy  
d). Kazi iendelee

25. Mr Dickson always he strongly loving and supporting his one's country and being ready to defend and protect it . How can we describe the act shown by her? \_\_\_\_\_

- a). Integrity  
b). traitor  
c). Patriotism  
d). Patriot

26. Mr. Emanuel was born in Netherland. Both of his parents are the citizens of Tanzania by birth. Which type of citizenship can be granted by Mr. Emanuel so as he become a Tanzanian citizen? \_\_\_\_\_

- a). Citizenship by birth  
b). Citizenship by descent  
c). Citizenship by marriage  
d). Citizenship by registration

27. Mr. Wadhifa is a village chairperson of Bugomora village. He is normally involves his citizens in decision making and provides detailed explanations to his citizens about the decisions or steps taken in discharging his duties. Which quality of leadership does Mr. Wadhifa have? \_\_\_\_\_

- a). Democracy  
b). Dishonesty  
c). Integrity  
d). Transparency

28. Strategies of protecting resources means  
a) ways of conserving resources      b) lessons on protecting resources  
c) importance of resources              d) missuse of resources
29. Man – made resources means  
a) Resources that are used to men only      b) Resources that are made by people  
c) Resources that a exist naturally              d) Resources that can meant for tour
30. Regional Police Commander is appointed by \_\_\_\_\_  
a) The President of Zanzibar                      b) Inspector General of Police(I.G.P)  
c) The President of United Republic of Tanzania      d) Speaker
31. Construction of schools, hospitals, roads and water ways are \_\_\_\_\_ activities.  
a) home                      b) school                      c) someone's                      d) development
32. \_\_\_\_\_ is catching fish from rivers lakes or ponds.  
a) Fishing                      b) Agriculture                      c) Mining                      d) Trade
33. Which of the following actions love to people with special needs? \_\_\_\_\_  
a) to ignore them                      b) to be kind to them  
c) to isolate them                      d) to discriminate them
34. The following are aspect of our national culture. Which one is not? \_\_\_\_\_  
a) art                      b) craft                      c) norms and value                      d) historical site
35. \_\_\_\_\_ colour in our national flag represent minerals in our country.  
a) Green                      b) Blue                      c) Yellow                      d) Black
36. The head of district council is \_\_\_\_\_  
a) The district commissioner (DC)                      b) The district council chairperson  
c) District executive director                      d) The President
37. The first President of Tanganyika was \_\_\_\_\_  
a) Rashid. M. Kawawa                      b) Sheikh Abeid. A. Karume  
c) Mwl. Julius. K. Nyerere                      d) Ali Hassan Mwinyi
38. Which of the following is an acceptable act committed against family members? \_\_\_\_\_  
a) Female genital mutilation                      b) Schooling  
c) Worshipping                      d) Farming
39. Which of the following is not an evil act committed against children. \_\_\_\_\_  
a) beating                      b) injuring  
c) forcing them to go to school                      d) denying them food
40. Example of negative tradition and custom include:- \_\_\_\_\_  
a) inheritance of widow                      b) loving your country

c) cooperation among the people

d) human rights

**SECTION: B Fill in the blanks**

41. Mtalemwa is the head of an administrative area in a region that is larger than a ward and smaller than the district. Who is Mtalemwa? \_\_\_\_\_

42. Mjuni Rabani is a Human Resource Manager in a certain company who has employed most of his relatives and close friends despite their poor performance in the company. How is this act called? \_\_\_\_\_

43. Mwebesa is a pupil who is honest and truthful. He always does right things even if no one is looking at him. How is this quality called? \_\_\_\_\_

44. Kalunde's uncle is the head of the secretariat of the organ which makes our country's laws. Who is Kalunde's uncle? \_\_\_\_\_

45. Political parties in Tanzania are established according to the law, and they are supposed to function according to the law. Who is responsible for banning a political party in case it violates the established laws? \_\_\_\_\_

**SUBJECT: SOCIAL STUDIES**

NAME \_\_\_\_\_ DATE \_\_\_\_\_ STD V

TIME 1:30HRS

**Answer all questions**

**Choose the letter of the correct answer and write it in the space given**

- In case you need to do investment with your money on cotton farming, in which of these regions will you go? \_\_\_\_\_  
a) Mwanza    b) Pwani    c) Arusha    d) Kagera
- I was born in 1922 and contributed towards the Independence of modern Tanzania . who am I? \_\_\_\_\_  
a) Edward Moringe Sokoine    b) Jomo Kenyatta  
c) Julius Kambarage Nyerere    d) Ali Hassan Mwinyi
- Just a grade five girl observed wind moving at a very high speed. Which weather instrument was suitable for measuring its speed? \_\_\_\_\_  
a) Windsock    b) wind vane    c) speedometer    d) anemometer
- The sources of historical information given by people who witnessed the event are called \_\_\_\_\_

- a) Oral testimonies    b) oral tradition    c) oral memories    d) archeology
5. Which among the following Countries was not colonized because it had strong armies which defeated their enemies? \_\_\_\_\_
- a) Nigeria            b) Lesotho    c) Nigeria            d) Ethiopia
6. Mr. Denice is a meteorologist working at Kidulo weather station. He told us that rainfall is measured in millimeters. What unit do you think he mentioned for measuring humidity ? \_\_\_\_\_
- a) centigrade    b) milliliters    c) percentage    d) hygrometer
7. The following might happen to a nation that promotes its culture **except** \_\_\_\_\_
- a) promoting sense of patriotism            b) imitating the foreigner's culture  
c) promoting a sense of unity                d) maintaining its origin
8. The teacher taught pupils the characteristics of planets and said that one of the planets supports life and three quarters of it is covered by water. Which planet is that? \_\_\_\_\_
- a) Neptune            b) Venus    c) Jupiter    d) Earth
9. If you are told to explain the importance of warming in the early morning sun for a good health, what reason would you explain to them? \_\_\_\_\_
- a) it is a source of Vitamin E                b) it is a source of Vitamin D  
c) it is a source of carbohydrate            d) it is a source of Vitamin A
10. Which is the main reason for occurrence of single parent family in most societies in Tanzania? \_\_\_\_\_
- a) death of all parents                        b) the desire of church and mosques  
c) death of all children                        d) the issue of divorce
11. An essential of a map used to describe the meaning of signs and symbols used in a map is called \_\_\_\_\_ a) margin    b) scale    c) key    d) title
12. Mrs. Kagaruki is very good pastoralist who has cows, goats and sheep in Nyanga village. What are the negative effects of keeping those animals in small area.
- a) disappearing of those animals    b) hungar            c) soil erosion  
d) getting much money
13. Tanzania has different elements of culture there elements have been affected by the following **except**;- \_\_\_\_\_
- a) growth of the Kiswahili language            b) environmental changes  
c) development of science and technology    d) promotion of indigenous language
14. Which of the following was the political effect between the interaction of Tanzania and Asia. \_\_\_\_\_
- a) development of slave trade                b) rise of centralized city states  
c) spread of Islam                                d) exploitation of Tanzanian resources
15. The famous Hehe chief who fought against German was called \_\_\_\_\_
- a) chief Mkwawa                                b) chief Mirambo                                c) chief Isike

d) chief Mchemba

16. How do we call everything surrounding human beings? \_\_\_\_\_  
a). Water bodies   b). land   c). the sky   d). environment
17. What is the correct term used to describe the destruction of the natural environment? \_\_\_\_  
a). Environmental conservation   b). environmental degradation   c). afforestation  
d). destocking
18. How can one differentiate oral traditions from oral testimonies? \_\_\_\_\_  
a). Oral testimonies must be written while oral traditions must be spoken  
b). Oral testimonies must be spoken while oral traditions must be written  
c). In oral traditions, a person who narrates a story did not witness the event while in oral testimonies a person who narrates the story witnessed a historical event.  
d). In oral testimonies, a person who narrates a story did not witness the event while in oral traditions a person who narrates the story witnessed a historical event.
19. Flavia Venus lives with her father Mr. Venus, her mother Nyangoma Venus, her brother Joshua, her aunt Anitha. What type of family Flavia belong? \_\_\_\_\_  
a). nuclear family   b). traditional family   c). couple Family  
d). orphan family
20. Madam Akidia told us that why Neptune is colder than Mercury? \_\_\_\_\_  
a). it is closer to the sun than Mercury   b). it is the largest planet of all  
c). it is brighter than mercury   d). it is far away from the sun
21. The largest resistance against colonialists in East Africa was \_\_\_\_  
a). Abushiri resistance   b). Hehe resistance   c). Bwana heri resistance  
d). Maji maji resistance
22. A group of related families that originate from the same ancestor is  
Known as \_\_\_\_\_  
a). a clan   b). family   c). community   d). society
23. "I am the central body in the solar system. All planets revolve around me". What is my name? \_\_\_\_\_  
a). Moon   b). Comet   c). Asteroid   d). The sun
24. A complete map has the following \_\_\_\_\_  
a) heading, key, scale, compass and the margin  
b) vegetation, roads, railways, cities and the key  
c) crops, the margin, scale, heading and compass  
d) compass, the key, scale, boundaries and the heading
25. The United Republic of Tanzania was established on \_\_\_\_\_  
a) 26<sup>th</sup> January 1964                      b) 9<sup>th</sup> December 1961   c) 9<sup>th</sup> December 1962  
d) 26<sup>th</sup> April 1964.

26. One of the ways used to prevent soil erosion is \_\_\_\_\_  
a) to keep many livestock    b) to cultivate in steep slopes  
c) to burn the remains of crops    d) to plant a lot of tree
27. The main source of natural light to earth is \_\_\_\_\_  
a) fire flies                    b) moon                    c) stars                    d) sun
28. Mtemi Machemba was a leader of \_\_\_\_\_  
a) Chagga                    b) Yao                    c) Nyamwezi                    d) Sambia
29. If human activities is not done properly can results to \_\_\_\_\_  
a) environmental degradation                    b) environmental construction  
c) environmental improvement                    d) environmental cleanliness
30. The information about the past that are given by people who witnessed the historical event. \_\_\_\_\_  
a) oral testimonies    b) oral traditions    c) oral history    d) oral story
31. What of the following can be caused by improper fishing \_\_\_\_\_  
a) destruction of ozone layer                    b) destruction of fish breeding site  
c) destruction of infrastructures                    d) destruction of food
32. The following are items found in archives, **EXCEPT** \_\_\_\_\_  
a) books                    b) journals                    c) pamphlets                    d) painted rocks
33. The last group of agents of colonialism were \_\_\_\_\_  
a) Explores                    b) Missionaries                    c) Traders                    d) Rulers
34. Kasharankoro drew a map of East Africa and located some points basing to the relationship of the distances on the map and the ground. This relationship is known as \_\_\_\_  
a) map                    b) contour                    c) scale                    d) margin
35. My father grows vegetables, flowers, fruits and some cash crops . What type of farming does my father practice? \_\_\_\_\_  
a) pastoralism                    b) nomadism                    c) arable farming                    d) horticulture
36. Mr. Kachebonaho used to harvest 6 – 7 tonnes of coffe in his 10 Acres farm. Surprisingly he has been recently harvesting 100kg to 50kg in the same farm for last three seasons. This indicates that Mr. Kachebonaho`s land \_\_\_\_\_  
a) has undergone degradation                    b) has been pollutes  
c) has been fertilized                    d) has been established
37. African culture has been modifiield both positively and negatively due to the interaction between Africans and the foreigner. The use of Khanzu, Khanga, Shungi, tasbih and the Quran is as a result of the contact between East Africans and the \_\_\_\_\_  
a) Europeans                    b) Asians                    c) Americans                    d) Canadians
38. One of the following is an environment friendly sources of energy \_\_\_\_\_

- a) petroleum      b) coal      c) solar      d) nuclear

39. \_\_\_\_\_ is the keeping of livestock whereby animals are confined in the building or a cage where water and food are served from there.

- a) zero grazing      b) overgrazing      c) destocking      d) deforestation

40. A traditional dance among the Makonde is Sindimba, the one of the Zaramo is called\_

- a) Akasimbo      b) Omtoro      c) Mdundiko      d) Ghutuka

### SECTION:B Fill in the blanks

41. Who was the third president of Tanzania? \_\_\_\_\_

42. person who is admired for his courage and outstanding achievement in the society is called \_\_\_\_\_

43. Mrs Mwombeki read about seasons of the year that has cold, windy and rainy weather. Which the season was that \_\_\_\_\_

44. Dorcas drew the map of her school. The map possessed the five essential elements of the map. What did she use on the map to show directions? \_\_\_\_\_

45. Wind is one of the elements which determine weather of a place. Which instrument is used to measure the strength of wind? \_\_\_\_\_

### SUBJECT: SCIENCE AND TECHNOLOGY

NAME \_\_\_\_\_ DATE \_\_\_\_\_ STD V

TIME 1:30HRS

Answer all questions

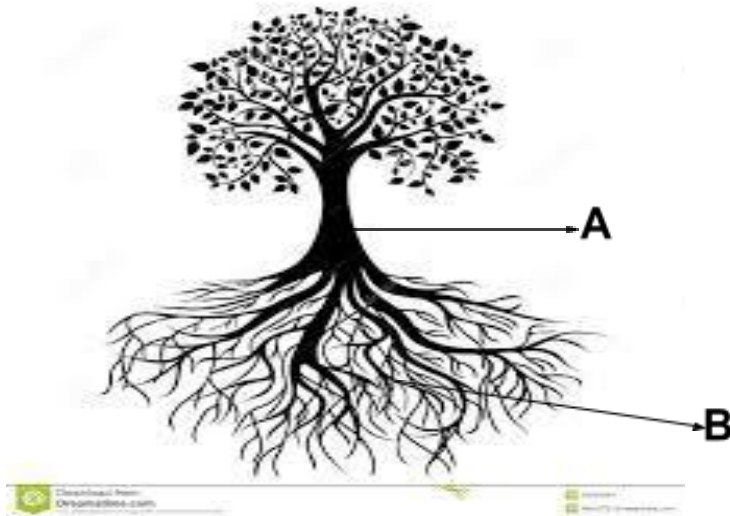
Choose the letter of the correct answer and write it in the space given

#### SECTION A:

- The term which stands for surrounding or conditions which include living and non- living things is \_\_\_\_\_  
a) kingdoms      b) creatures      c) organisms      d) environment      [      ]
- The branch of science that deal with the grouping and naming of living things is \_\_\_\_  
a) biology      b) taxonomy      c) ecology      d) taxonomist      [      ]
- \_\_\_\_\_ produce seeds but do not produce flowers      [      ]  
a) orange trees      b) pine trees      c) maize plants      d) mango tree
- The group of animals with vertebral column are termed as \_\_\_\_\_  
a) invertebrate animal      b) vertebrate animal      c) insect      d) snail      [      ]
- \_\_\_\_\_ lay eggs in water although they live on land.  
a) Tortoises      b) Turtles      c) Toads      d) crocodile      [      ]

6. Multicellular organism are made up of \_\_\_\_\_  
 a) one cell                      b) many cell                      c) atoms                      d) steels                      [     ]
7. \_\_\_\_\_ is a basic unity and origin of life of any living organism.  
 a) nucleus                      b) energy                      c) cell                      d) enzymes                      [     ]
8. Which among of the following terms, refers to the animals whose body temperature varies with the environment temperature? \_\_\_\_\_  
 a) reptiles                      b) invertebrates                      c) cold – blooded                      d) warm blooded                      [     ]
9. What do we call the kind of animals that do not have backbone? \_\_\_\_\_  
 a) small animals                      b) invertebrates                      c) vertebrates                      d) insects                      [     ]
10. Which of the following plants characteristics differentiate them from animals: \_  
 a) they produce                      b) they respond to change in the environment  
 c) they grow                      d) they manufacture their own food                      [     ]
11. Is an instrument used to see objects which are obstructed from being see such as objects at the corner.  
 a) mirror                      b) microscope                      c) periscope                      d) telescope                      [     ]
12. The speed of light is \_\_\_\_\_  
 a) 300,000km/h                      b) 300km/s                      c) 300,000km/s                      d) 3km/s                      [     ]
13. The bending of light when passing through one medium to another is known as \_\_\_\_\_  
 a) dispersion                      b) refraction                      c) reflection                      d) defraction                      [     ]
14. The group of light rays traveling in the same direction is called \_\_\_\_\_  
 a) light                      b) a beam of light                      c) straight lines                      d) spectrum                      [     ]
15. Which of the following is not necessary for seed germination? \_  
 a) water                      b) soil                      c) warmth                      d) oxygen                      [     ]
  
16. An animal which kills and eats other animals is called \_\_\_\_\_  
 a) prey                      b) omnivores                      c) predator                      d) parasite                      [     ]
17. Green plants make their own food through the process called \_\_\_\_\_  
 a) reproduction                      b) nutrition                      c) photosynthesis                      d) respiration                      [     ]
18. The stage when young ones break the shell and get out of the egg is known as \_\_\_\_\_  
 a) incubation                      b) hatching                      c) birth                      d) braking                      [     ]
19. One of the following features is a feature of dicot plants \_\_\_\_\_  
 a) many roots                      b) parallel vein                      c) one cotyledon                      d) tap roots                      [     ]
20. The small opening found on the lower and upper side of leaf are known as \_\_\_\_\_  
 a) stomata                      b) phloem                      c) chlorophyll                      d) Lamina                      [     ]
21. Stomata in plant are similar to \_\_\_\_\_ in fish.  
 a) spiracles                      b) gills                      c) lungs                      d) book lungs                      [     ]
22. Organisms which have a back bone are called \_\_\_\_\_  
 a) mammals                      b) fish                      c) vertebrates                      d) invertebrates                      [     ]
23. Cold – blooded organisms is also called \_\_\_\_\_ [     ]






41. The part labeled A is called \_\_\_\_\_

42. What is the function of part B? \_\_\_\_\_

Observe the food shown in diagram 4 carefully then answer the question that follows.



43. The function of the food shown in this above diagram is \_\_\_\_\_

44. What is photosynthesis?

\_\_\_\_\_

\_\_\_\_\_

45. Monocots seeds store their food in the part called \_\_\_\_\_

**SUBJECT: VOCATIONAL SKILLS**

NAME \_\_\_\_\_ DATE \_\_\_\_\_ STD V

TIME 1:30HRS

Answer all questions

Choose the correct answer by writing its letter in the blanks

- The study of creative things is called \_\_\_\_\_  
a) English      b) driving      c) vocational skills      d) history      [    ]
- The people who are playing football match on the ground are \_\_\_\_\_.  
a) dancers      b) teacher      c) player      d) singers      [    ]
- A person who flies an aeroplane is called \_\_\_\_\_  
a) captain      b) driver      c) judge      d) pilot      [    ]

4. Rocks, water bodies, plants, building, roads, landforms are termed as \_\_\_\_\_  
a) environment    b) luxury things    c) wastes    d) eaten things    [    ]
5. Changes of our bodies from being a child to an adult that action is known as \_\_\_\_\_  
a) making    b) manufacturing    c) growing    d) puberty    [    ]
6. Good grooming is the action of taking \_\_\_\_\_ of one`s body.  
a) injury    b) skin oil    c) care    d) shampoo    [    ]
7. \_\_\_\_\_ is a way of making our bodies to be smart and attractive.  
a) bathing    b) dirtiness    c) playing    d) eating    [    ]
8. Sports and games lead our bodies to be \_\_\_\_\_  
a) active    b) weak    c) strong    d) attentive    [    ]
9. Balance diet is good for our \_\_\_\_\_  
a) skin    b) healthy    c) brain    d) wealthy    [    ]
10. Every school has its own school \_\_\_\_\_  
a) National flag    b) music    c) dress code    d) National language [    ]
11. Sangula, Mdundiko, Akasimbo and Sindimba are **example** of.  
a) modern dance    b) national dance    c) past dance  
d) tribal dance    [    ]
12. Failure to practice personal hygiene leads the effects of.  
a) growing well    b) becoming strong    c) infection disease  
d) preventing disease    [    ]
13. Which of the following is not true about good grooming?  
a) bathing    b) wearing ironed clothes    c) brushing teeth  
d) dressing poorly    [    ]
14. We wash our bodies so as to.  
a) look short    b) look tall    c) remove dirt    d) add dirt    [    ]
15. Some of diseases resulted from poor environment of a child is.  
a) HIV and flu    b) flu and allergies    c) headache and flu  
d) malnutrition and HIV    [    ]
16. A room which used for sleeping is called.  
a) bathroom    b) dining hall    c) meeting room    d) bed room [    ]
17. Any dirt can affect our environment is said to be \_\_\_\_\_

- a) medicine      b) waste      c) good      d) environment      [      ]
18. Repairing garments help to make them \_\_\_\_\_  
a) stay dirt      b) be neat and attractive      c) be wastes  
d) useless      [      ]
19. An area where food is prepared is called \_\_\_\_\_  
a) bedroom      b) kitchen      c) floor      d) dining      [      ]
20. There are \_\_\_\_\_ types of buttons.  
a) three      b) four      c) two      d) five      [      ]
21. The following is an example of energy yielding food **EXCEPT**;  
a) maize      b) cassava      c) rice      d) milk      [      ]
22. Mosquitoes \_\_\_\_\_ prevents mosquitoes from biting us when we sleep at night.  
a) wires      b) medicines      c) nets      d) bags      [      ]
23. \_\_\_\_\_ is one of the means of communication.  
a) clothes      b) mobile phone      c) air      d) watch      [      ]
24. An art of and practice of cooking is called \_\_\_\_  
a) cook      b) food      c) cookery      d) cooking      [      ]
25. A group of people who sing together is known as \_\_\_\_\_  
a) music      b) choir      c) conductor      d) teacher      [      ]
26. \_\_\_\_\_ used to soften skin and looking smart.  
a) hair oil      b) shampoo      c) skin oil      d) shower gel [      ]
27. \_\_\_\_\_ is a material used for cleaning the floor.  
a) ruler      b) broom      c) cup      d) phone      [      ]
28. The parts which are between the legs are called \_\_\_\_\_  
a) buttocks      b) genital area      c) toes      d) chest      [      ]
29. \_\_\_\_\_ is one symptom changes in girls.  
a) seeing the blood      b) playing too much      c) sleeping  
d) laughing      [      ]
30. If you want to make your hair smart, you are advised to \_\_\_\_\_ and \_\_\_\_\_.  
a) make it long      b) add colours      c) cut and comb it.  
d) throw them      [      ]
31. A towel is used to \_\_\_\_\_  
a) dry water on the body      b) add water on the body  
c) carry babies      d) soften the body      [      ]
32. Food prepared by boiling process is \_\_\_\_\_



42. What is garment?

---

---

---

---

43. Define the word "waste"

---

---

**Draw a stick picture of people performing the following activities.**

44. Swimming



45. Reading.



**SUBJECT: ENGLISH**

**NAME** \_\_\_\_\_ **DATE** \_\_\_\_\_ **STD V**

**TIME 1:30HRS**

**Answer all questions**

Listen to the teacher attentively and answer the questions about the short read.

**SECTION A:**

1. What was the forest called \_\_\_\_\_  
a) matata      b) mukono      c) mkoko      d) madowi      [   ]
2. Who lived in the forest \_\_\_\_\_  
a) animals      b) wild animals      c) forests      d) cooks      [   ]
3. Who was the loved king of the forest?  
a) lion      b) elephant      c) zebra      d) dog      [   ]
4. Did all animals love and respect the king?  
a) Yes they did      b) No they didn't      c) did they      d) Yes no they      [   ]
5. He had a **strong** voice what is the opposite of **strong**.  
a) lazy      b) clever      c) weak      d) enough      [   ]

**GRAMMAR AND TENSES**

6. Jackline \_\_\_\_\_ a bicycle to school.  
a) is ride      b) is riding      c) are ridding      d) are ride      [   ]
7. They \_\_\_\_\_ flowers on all side of the compound.  
a) is plant      b) plants      c) planting      d) are planting      [   ]
8. We \_\_\_\_\_ to visit the National park next week.  
a) are going      b) is going      c) going      d) goes      [   ]
9. John is sitting \_\_\_\_\_ Mary.  
a) beside      b) at      c) on      d) in      [   ]
10. She \_\_\_\_\_ on foot to school.  
a) walking      b) walks      c) is walk      d) walk      [   ]
11. How \_\_\_\_\_ money do you need?  
a) many      b) much      c) a lot      d) plenty      [   ]
12. There is \_\_\_\_\_ milk in the Thamos.  
a) some      b) any      c) few      d) a      [   ]
13. Jamila \_\_\_\_\_ at Bukoba village  
a) living      b) lives      c) is live      d) are live      [   ]
14. Allen \_\_\_\_\_ Pendo are brothers  
a) is      b) was      c) and      d) are      [   ]

15. I have \_\_\_\_\_ sugar in the pot.  
 a) little            b) many            c) a lot            d) any            [     ]
16. How \_\_\_\_\_ boys are there in standard v at your school?  
 a) much            b) little            c) many            d) little            [     ]
17. Yesterday Mwajuma \_\_\_\_\_ the mountain.  
 a) climbs            b) climbing            c) climbed            d) is climb            [     ]
18. Sometimes Abeera \_\_\_\_\_ rice for super.  
 a) cook            b) cooks            c) cooking            d) cooker            [     ]
19. He walked \_\_\_\_\_ Manderu Road  
 a) at            b) a long            c) in            d) of            [     ]
20. The teacher told me to put the book \_\_\_\_\_ the table.  
 a) on            b) with            c) un            d) into            [     ]
21. Mr. Musa \_\_\_\_\_ language in our school.            [     ]  
 a) is teach            b) are teaching            c) is teaching            d) teach
22. Last Tuesday \_\_\_\_\_ a public holiday.  
 a) is            b) are            c) was            d) were            [     ]
23. We \_\_\_\_\_ eat apples at the party.  
 a) shall            b) will            c) does            d) into            [     ]
24. An elephant is \_\_\_\_\_ than a lion  
 a) strong            b) strongest            c) stronger            d) a strong            [     ]
25. The opposite word of happy in \_\_\_\_\_  
 a) happier            b) in happy            c) un happy            d) dis happy            [     ]
26. They \_\_\_\_\_ like revising at their homes.  
 a) do not            b) no            c) is not            d) are no            [     ]
27. A baby cries while a dog \_\_\_\_\_  
 a) barks            b) shouts            c) digs            d) dances            [     ]
28. He \_\_\_\_\_ sleep in his house.  
 a) doesn't            b) do not            c) will no            d) shall            [     ]
29. I \_\_\_\_\_ food for him instead of Juice.  
 a) shall buy            b) am buy            c) shall buying            d) buys            [     ]

30. I am \_\_\_\_\_ a letter to my friend.  
 a) write            b) writes            c) writing            d) is write            [    ]
31. Juma and Rose \_\_\_\_\_ good friends.  
 a) are            b) is            c) a            d) an            [    ]
32. Mr. Tobela has over ten \_\_\_\_\_ and \_\_\_\_\_.  
 a) bus – lorry            b) buses – lorries            c) buss – lorrys  
 d) busz – lorryz            [    ]
33. We \_\_\_\_\_ one hundred ninety days at school.  
 a) has            b) have            c) with            d) for            [    ]
34. \_\_\_\_\_ aeroplane is the fastest transport.  
 a) A            b) IN            c) AN            d) ON            [    ]
35. They \_\_\_\_\_ the party last year.  
 a) attend            b) attending            c) attended            d) is attend            [    ]

**COMMPOSITION**

Arrange the sentences in order to get a meaning

36. When the teacher entered class v.  
 37. They greeted the teacher.  
 38. The teacher told them to sit down.  
 39. The children stood up.  
 40. Open your copy book please.

36.	37.	38.	39.	40.

**SECTION: B**

**Read the short passage below and answer questions about it.**

On evening I was walking with my friend, Sia. We were coming from school. Suddenly we saw an ambulance going very fast. The ambulance stopped. We thought there was an accident.

There were a lot of people shouting and others crying. We saw a man lying down on the road. A person who was driving carelessly knocked him down and injured. His leg was broken.

**Questions.**

41. Where was Sia and his friend coming from \_\_\_\_\_

42. The driver was driving \_\_\_\_\_

43. What stopped immediately \_\_\_\_\_

44. What happened on the road? \_\_\_\_\_

45. The ambulance was going very \_\_\_\_\_

## **STD 5 LISTENING SKILL**

Once upon a time there was a forest called Mkoko many wild animals liked there. The king of the forest was an old Lion. He had a strong voice. He was very wise and clever. All animals loved and respected him

**SOMO: KISWAHILI**

**JINA:** \_\_\_\_\_ **TAREHE :** \_\_\_\_\_ **DRS :V**

**SEHEMU A: UFAHAMU WA KUSIKILIZA, SARUFI, LUGHA YA KIFASIHI, UTUNGAJI**

1. Ni watu gani walikuwa wakiogelea kwenye dimbwi?  
a) wanaume                      b) wasichana                      c) watoto  
d) wafungwa                      e) wachezaji                      [     ]
2. Mwandishi anasema "miili ya wale waogeleaji ilijaa....."  
a) mafuta                      b) matope                      c) wadudu  
d) maji                      e) uvundo                      [     ]
3. Mwandishi anasema "haikuwa rahisi kutambua ....."  
a) sura zao                      b) umri wao                      c) wanakotoka  
d) nyumbani kwao                      e) jinsia yao                      [     ]
4. Nani aliyewaona watoto hao?  
a) mama yao                      b) mwalimu                      c) wapita njia  
d) Bibi Huruma                      e) mama Mkosi                      [     ]
5. Alipowaambia "tokeni haraka" wale watoto.  
a) walikataa                      b) walitoka wakavaa nguo zao                      c) walipiga kelele  
d) walishangilia                      e) walimtukana yule Bibi                      [     ]

**SARUFI NA MSAMIATI**

6. Kujibanza ni \_\_\_\_\_  
a) kujionesha                      b) kujiringa                      c) kujificha                      d) kujiumiza  
e) kujifanya wajua                      [     ]

7. Badala ya kusema Karungi anatembea kwa maringo, tunaweza kusema \_\_\_\_  
a) anatembea haraka                      b) anatembea kwa madaha                      [     ]  
c) anatembea kwa vichekesho              d) anarukaruka              e) anatembea kwa shida
8. “Mariamu ni mrembo” Ukanushi wake utakuwa:-  
a) Mariamu si mrembo                      b) Mariamu ni mbaya              c) Mariamu anarembua  
d) Mariamu harembui                      e) Mariamu hawezi kuwa mrembo                      [     ]
9. Mariamu anapanda mlimani. Kinyume chake ni \_\_\_\_  
a) Mariamu hapandi mlimani                      b) Mariamu anateremka bondeni  
c) Mariamu anaogopa mlimani                      d) Mariamu hateremki bondeni  
e) Mariamu anapanda bondeni                      [     ]
10. Badala ya kutamka nafsi ya kwanza wingi “sisi” naweza kutumia silabi  
a) u                      b) a                      c) ni                      d) wa                      e) tu                      [     ]
11. Mama aliishi Mwanza miaka sita iliyopita. Hii sentensi huonesha wakati gani ?  
a) uliopita                      b) ujao                      c) uliopo                      d) mtimilifu                      e) wa mazoea                      [     ]
12. Kitu kinachotengenezwa ili kukamata mnyama au ndege huitwa \_\_\_\_ [     ]  
a) jiwe                      b) chuma                      c) mtego                      d) kamba                      e) bunduki
13. Fundi atengenezaye vifaa vya mbao mf. Meza, Milango, Viti huitwa \_\_\_\_  
a) Fundi cherehani                      b) Fundi seremala                      c) Dobi  
d) Fundi Mwashu                      e) Tabibu                      [     ]
14. Mtu anayeendesha ndege huitwa \_\_\_\_ [     ]  
a) Mwalimu                      b) Tabibu                      c) Mkufunzi                      d) Rubani                      e) Nahodha
15. Mtu mwenye tabia ya kuongea maneno yasiyomhusu, kuyatoa huku na kuyapeleka kule huitwa \_\_\_\_ [     ]  
a) msemaji                      b) mmbea                      c) mzushi                      d) mwongaji                      e) Mpiga stori
16. Mtu asiyependa kufanya kazi na wakati ana nguvu huitwa \_\_\_\_ [     ]  
a) jasiri                      b) mvivu                      c) mchapakazi                      d) mroho                      e) mchoyo
17. Mtoto aliyefiwa au kupotelewa na mzazi mmoja au wote huitwa \_\_\_\_ [     ]  
a) yatima                      b) mpweke                      c) mwenye mkosi  
d) mkosefu                      e) Mwangaji
18. Umoja wa neno “nywele” ni \_\_\_\_ [     ]  
a) vinyweleo                      b) nywele                      c) kanywele                      d) unywele                      e) kanyweleo
19. Neno ipi lililo tofauti na mengine kati ya haya? [     ]



30. Nyumba yangu ina mlango juu (tegua) [     ]  
a) gari                      b) meza                      c) yai                      d) mwavuli                      e) chupa
31. Alikuwa popo katika uchaguzi mkuu wa darasa kuwa popo ina maana gani  
a) kuwa mgonjwa                      b) kupenda kuning'inia                      c) Kuwa kigeugeu  
d) Kuwa mbishi                      e) mwongo
32. Tegua kitendawili kifuatacho "Nyumbani kwangu kuna jinni mnywa maji" \_  
a) Kibatari                      b) kikombe                      c) mtungi                      d) kinywa                      e) tochi

### SOMA SHAIRI HILI KISHA JIBU MASWALI

Elimu pana ajabu, huwezi yote kujua,  
Utaipata aibu, ukijifanya wajua,  
Daima tafuta jibu, ya lile usolijua,  
Elimu pana ajabu, huwezi yote kujua.

### MASWALI

33. Shairi hili linazungumzia [     ]  
a) afya                      b) uvivu                      c) elimu                      d) nidhamu                      e) utu
34. Shairi hili lina beti ngapi? [     ]  
a) nne                      b) mbili                      c) ubeti mmoja                      d) nane                      e) tatu
35. Mwandishi anasema "Elimu pana \_\_\_\_\_ huwezi yote kujua [     ]  
a) jawabu                      b) ajabu                      c) ugumu                      d) mazuri                      e) hatari

### :UTUNGAJI

Panga sentensi hizi kwa mtiririko mzuri kwa (A, B, C, D, E)

36. Tetemeko hilo lilitokea saa nane na nusu mchana.
37. Siku iliyofuata wengi tulienda kanisani kuomba huruma ya Mungu.

38. Ilikuwa ni siku ya Jumamosi tetemeko la ardhi lilipotokea.

39. Tunamshukuru Mungu tangu siku iyo halikutokea tena.

40. Kwakweli tuliogopa sana siku iyo.

36	37	38	39	40

## SEHEMU B : UFAHAMU

### Soma habari ifuatayo kisha jibu maswali yanayofuata

Mimi ni simba , mnyama anayesifika sana, ninayo ngurumoya kutisha, nikiwa jike sina nywele ndefu , nikiwa dume nywele zangu ndefu. Mimi ni mfalme wa porini

Mimi ni mbwa, ninasifika kwa ukali, ninapenda kuishi na binadamu, Mimi ni mlinzi namwindaji mashuhuri. Ninamlinda binadamu na mali zake.

Mimi ni kondoo nasifika kwa upole wangu. Huishi na binadamu, Nywele zangu ni sufu.

Mimi ni ng'ombe chakula changu ni nyasi, ninapokula hucheua, huishi na binadamu, humpatia maziwa na mbolea.

Mimi ni twiga, mnyama aishiye porini, ni mrefu sana kuliko wanyama wote porini. Pia mimi ni alama ya nchi ya Tanzania.

## MASWALI

41. Mimi ni mnyama mkali aishiye na binadamu, husifiwa kwa uwezo wangu wa kuwinda na kulinda mali, mimi kwa jina ni \_\_\_\_\_

42. Mimi ni mnyama mwenye ngurumo ya kutisha na ni mfalme wa porini, mimi kwa jina ni \_\_\_\_\_

43. Mimi ni mnyama, aishiye na binadamu, nywele zangu ni sufu, mimi ni \_\_\_\_\_

44. Mimi ni mnyama aishiye na binadamu, mimi husifiwa kwa upole, mimi ni \_\_\_\_\_

45. Mimi ni ng'ombe, chakula changu ni nyasi, humpatia binadamu \_\_\_\_\_

## DARASA LA 5 UFAHAMU WA KUSILIKIZA

Watoto walikuwa wakioga na kuogelea kwenye dimbwi karibu na nyumbani kwao. Walizama na kuibuka kwenye yale maji machafu. Miili yao ilijaa matope. Haikuwa rahisi kutambua sura zao. Bibi Huruma alipokuwa anapita pale akawaona wale watoto "Loo ! nyie watoto mtaleta balaa! Maji hayo yana wadudu wengi, Tokeni haraka" Wale watoto walitoka wakavaa nguo zao.

