

FOURTH PERIODICAL TEST
MATHEMATICS 2

NAME _____ SCORE _____

Directions: Choose the letter of the correct answer.

1. What time does the clock show?

- A. 5:00 o'clock C. 12:00 O' clock
B. 4:00 o'clock D. 6:00 O' clock



2. How do you read the time in the digital clock?



- A. two thirty five
B two fifty three
C. two three five
D. two o'clock


3. Mang Andoy went to Laguna on Thursday to visit his parents then he came back on Tuesday. How many days did he stay in Laguna?

- A.3 B. 4 C. 5 D 6

4. Yohan left the house at 6:15 in the morning and reached her school at 7:00 . How long did she travel?

- A. 30 minutes B. 35 minutes C. 40 minutes D. 45 minutes

5.What is the measurement of the fork below?



- A. 10 cm B. 11 cm C. 11 cm D. 12 cm

6. Which measurement is the longest?

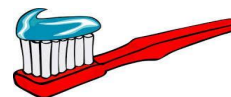
- A. 25 cm B. 10 m C. 1 km D. 26 finger span

7. Which unit of measure you are going to use in measuring short distances like clip, eraser, notebook. paper, and bag?

- A. centimetre B. metre C. kilometre D. finger span

8. What is the possible measurement of the picture at the right?

- A. 18 cm C. 18 m
B. 18 km D 18 finger span



9. A team of four pupils ran a 400-m relay. Johanna ran 75 m and Kylie ran 105 m. How many meters did the remaining members of the team?

- A. 170 m B. 202 m C. 185 m D. 220 cm

10. Michie has a string 12 meters long. He cut it into 2 pieces . If one piece is 2 meters longer than the other, how long is the longer piece

- A. 10 m B. 9 m C. 8 m D. 6 m

11. Which measurement will you use in measuring the picture at the right?

- A. grams or g C. Kilograms or kg
B. meter or m D. centimetre or cm





12. When the hand of weighing scale is pointing to 1, the equivalent of this is 10 kg, The weight of Aling Onyang points to 9, what is the weight of Aling Onyang?

- A. 20 kg B. 40 kg C. 50 kg D. 90 kg

13. What unit of measure will you use in measuring vegetables at the right?



- A. gram B. kilogram C. meter D. centimetre

14. Which is heaviest?

- A. 200 grams milk powder C. 500 grams of cotton
B. 300 grams metal D. 1 kg of rice

15. Manny divided 16 kilos of rice to eight families who are the typhoon victim How many kilos of rice did each family receive?.

- A. 2 kg B. 3 kg C. 4 kg D. 5 kg

16. Arvin has 23 kilos of mangoes. He gave 5 kilos of mangoes to Marvin. He also gave 5 kilos to Juan. How may kilos of mangoes remained to him?

- A. 10 B. 11 C. 12 D. 13

17. If you measure the n the glass, what is the estimated measurement?

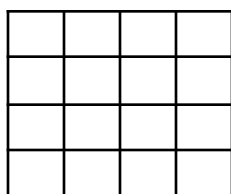
- A. 200 ml B. 900 ml C. 1 litre D. 2 litres



18. It is Noel's birthday; his father bought 18 litres of mineral water. Her auntie also bought 15 litres, How many litres of mineral water did they buy in all?

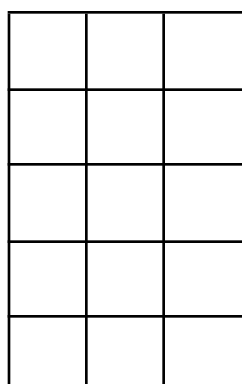
- A. 13 l B. 23 l C. 33 l D. 43 l

19. What is the area of the square below?.



- A. 14 square units
B. 15 square units
C. 16 square units
D. 17 square units


20. .How many square units are there in the figure below?



- A. 10 square units

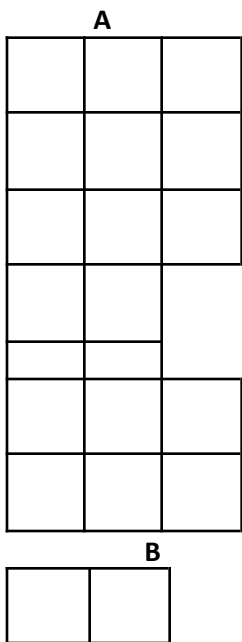
- B. 15 square units
- C. 20 square units
- D. 25 square units

21. Find out how many small tiles are there in a big rectangle below?



- A. 2
- B. 3
- C. 4
- D. 5

22. Which of the figure below has a biggest area?



C

D

23. The Grade Two pupils want to know the area of their classroom. They measure it with a length of 8 meters and 6 meters wide. What is the area of their classroom?

- A. 14 m
- b. 28 m
- c. 48 sq m
- d. 14 sq. M

II. Study the graph about the favourite fruits of the Grade II pupils.

Survey on Favorite Fruits		
Choices	Tally	Votes
Apple	IIII-IIII-IIII	14

Orange	IIII-IIII	9
Grape	IIII-IIII-IIII-II	17
Strawberry	III	3
Guava	IIII-II	7
TOTAL		50

24. According to graph above, which is the most favourite fruits of the Grade II pupils.
 a. apple b. orange c. grape d. guava

III. Study the graph. How many eggs did Mang Andoy gathered everyday in his poultry farm?

Araw	Tala
Sunday	0 0 0 0 0 0
Monday	0 0 0 0 0 0
Tuesday	0 0 0 0
Wednesday	0 0 0 0 0
Thursday	0 0 0 0 0 0
Friday	0 0 0
Saturday	0 0 0 0 0 0 0

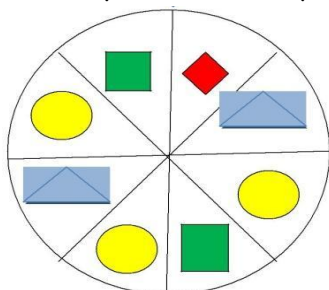
Legend: **0**-100

25. How many eggs did Mang Andoy harvests in Wednesday?
 A. 300 B. 400 C. 500 D. 600

26. Which day is the most number of eggs gathered?
 A. Thursday B. Friday C. Saturday D. Sunday

27. How many eggs did Mang Andoy gathered in Tuesday, Wednesday and Friday?
 A. 1 200 B. 1 300 C. 1 400 D. 1 500

28. . Look at the shapes below. Why circle is become the "most likely"?



- A. There is only one circle.
- B. There are 2 circles.
- C. Circle are most numbers.
- D. There is no circle.

29. Which shapes in number 28 are **equally likely to happen**?
 A. circle and square B. square and rectangle
 C. diamond and circle D. rectangle and circle

30. The clouds is heavy and dark. Which is likely to happen?

- A. It will rain.
- B. There is a strong wind

- C. The sun will shine brightly.
- D. The air is fresh.

Answer Key

- 1. A
- 2. A
- 3. C
- 4. D
- 5. B
- 6. C
- 7. A
- 8. A
- 9. D
- 10. C
- 11. C
- 12. D
- 13. A
- 14. D
- 15. A
- 16. D
- 17. A
- 18. C
- 19. C
- 20. B

- 21. D
- 22. A
- 23. C
- 24. C
- 25. C
- 26. C
- 27. A
- 28. B
- 30. A.