



# TOM NEWBY SCHOOL EXAMINATION



<b>Subject</b>	<b>GEOGRAPHY</b>	<b>Examiner</b>	<b>MRS. P. SINGH</b>
<b>Date</b>	<b>JUNE 2019</b>	<b>Total marks</b>	<b>50</b>
<b>Grade</b>	<b>6</b>	<b>Duration</b>	<b>1 HOUR</b>
<b>Session</b>	<b>1</b>	<b>Moderator</b>	<b>MRS M. FOURIE</b>
<b>Special instructions/ Equipment</b>	<b>1. Read the instructions carefully</b> <b>2. Write neatly</b> <b>3. Take note of the mark allocation</b> <b>4. Answer all questions on the Question Paper</b> <b>5. Good luck</b>		
This assessment has been compiled using notes and information contained in the Tom Newby School resource material. The marking memorandum has been compiled accordingly. While alternative responses will be given due acknowledgement, the official memorandum will be considered a priority document to ensure uniformity of marking.			

<b>Name:</b>	<b>Surname:</b>	<b>Class:</b>
--------------	-----------------	---------------

This paper consists of 9 Questions

### **QUESTION 1** (5)

State whether the following statements are **true or false**. If false, correct the statement.

1.1 The 66½° line of latitude that lies between the equator and the North Pole is the Antarctic Circle.

---

---

1.2 Imaginary lines that run parallel to the Equator are called lines of latitude.

---

---

1.3 North, South, East and West are called cardinal points.

---

---

1.4 The line of longitude which lies between the Equator and the North Pole is called the Tropic of Cancer.

---

---

1.5 The International Date Line is the 90° line of longitude.

---

---

**QUESTION 2 (6)**

Fill in the missing words to complete the sentences.

- 2.1 \_\_\_\_\_ maps show how the land used to be many years ago.
- 2.2 \_\_\_\_\_ and \_\_\_\_\_ maps show how many planets and stars exist.
- 2.3 GPS stands for \_\_\_\_\_
- 2.4 Current events are things that are happening at the moment that are of \_\_\_\_\_
- 2.5 \_\_\_\_\_ maps show information about trade, where minerals are found and food is grown.

**QUESTION 3 (4)**

Read the entry from the atlas index and then answer the questions below.

(A) Aleubian is.	(B) Pac. Oc. 57	(C) E4 52 ON 175
------------------	-----------------	------------------

- 3.1 What does A tell you?

---

- 3.2 What information does B provide you with?

---

- 3.3 What does C tell you?

---

- 3.4 In which hemisphere is the line of latitude found?

---

**QUESTION 4 (7)**

Use Map 1 (on page 7) to answer the questions on co-ordinates.

- 5.1 Find the following countries using the names of the countries.

- a. 10°S 15°E - \_\_\_\_\_
- b. 30°N 60°E - \_\_\_\_\_
- c. 0° 70°W - \_\_\_\_\_

- 5.2 Write the co-ordinates for the following places:

- a. South Africa - \_\_\_\_\_
- b. Mexico - \_\_\_\_\_

**QUESTION 5 (10)**

Match the word in Column A with the meaning or phrase in Column B. Write the letter of the answer you have chosen in the spaces provided under the table.

COLUMN A		COLUMN B	
5.1	Hemisphere	a.	Things that are made from petrol.
5.2	Scale	b.	Another word for Trade.
5.3	Atlas	c.	People are paid less for work in these countries.
5.4	Camels	d.	This household product was used for money long ago.
5.5	Small scale maps	e.	Shows a small area with more details.
5.6	China and Asia	f.	Means half circle.
5.7	Barter	g.	Collection of maps.
5.8	Large scale maps	h.	Method used to work our real distances.
5.9	Petroleum products	i.	Where used to transport goods in the desert.
5.10	Salt	j.	Shows big areas with few small details.

5.1	5.2	5.3	5.4	5.5
5.6	5.7	5.8	5.9	5.10

**QUESTION 6 (3)**

In three good sentences summarise how mercury Extraction is used to extract the gold from rock.

---



---



---



---



---



---



---



---



---



---



---

**QUESTION 7 (5)**

Use Map 2 (on page 6) to calculate the direct distance you would have to travel if you had to go from:

7.1 Alice spring to Singapore

---



---

7.2 Lagos to Moscow

---



---

7.3 Rewrite the scale for the map as a word scale

---






---

**QUESTION 8 (3)**

8.1 Place the pictures below in the correct categories on the table provided: Write A, B or C.

Primary products, Skills and Services or Secondary products.

8.2 Say why they belong in these categories.

<p><b>A</b></p> 	<p><b>B</b></p> 	<p><b>C</b></p> 
---	---	---

<b>Primary products</b>	<b>Secondary products</b>	<b>Skills and Services</b>
8.1 _____	8.1 _____	8.1 _____
8.2 _____	8.2 _____	8.2 _____
_____	_____	_____
_____	_____	_____
_____	_____	_____

**QUESTION 9:** [7]

9.1 If you were given the opportunity to import an item from any country. A) What item would you import? B) Give a reason for your answer. (2)

a) \_\_\_\_\_

b) \_\_\_\_\_

9.2 Why do you think poor people are usually the ones who are exploited in the trading system? (1)

---

---

---

---

9.3 Read the case study below and then answer the questions.

**The human cost of unfair trade**

The Human Rights Watch has issued a negative report on human rights abuses in the wine and fruit farming industries in the Western Cape.

**Inhumane conditions**

A farm worker, referred to as Isaak S, described how for over a decade he and his family have lived in a **hovel** with no **amenities** such as electricity or running water. The former pig pen does not even have appropriate shelter and coverage to protect his wife and children from the **elements**.

According to the report, when Isaak requested a better place to live he was told by his employer that other farm workers had to 'be gotten rid of' before his needs could be addressed. Ten years later, he and his family still live in the same pig stall.

In a separate case, Dino M, who works with **pesticides** every day, told how he had been given inadequate protective clothing to wear while working with the toxic chemicals. According to his **testimony**, he received only gloves and overalls which did not completely shield him from the harmful pesticides. In attempts to block the spray of chemicals he, along with other workers, covered their faces with their caps.

9.3.1 Do you think that Dino M was justified in his complaint? Explain your answer. (2)

---



---



---



---

9.3.2 After reading about the conditions under which Isaak S and his family were living. What conclusion can you make about his employers character. (1)

---

9.3.3 If you were Isaak S's employer, suggest one thing you could do to help him and his family. (1)

---

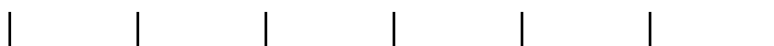
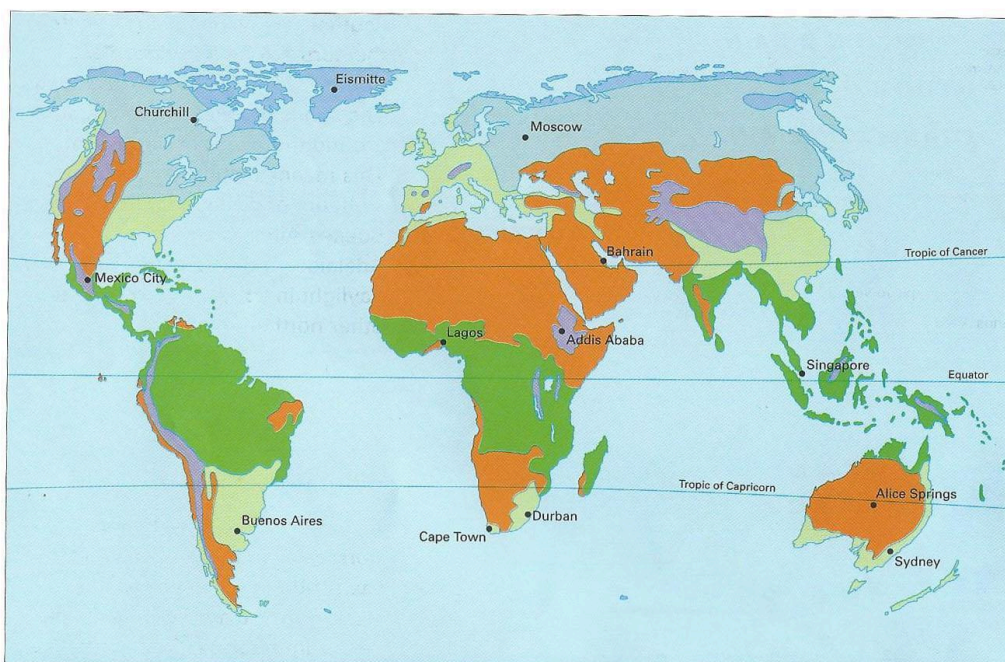


---



---

## MAP 2 (QUESTION 7)



0km 60km 120km 180km 240km 300km 360km

# MAP 1 (QUESTION 4)



