



KENDRIYA VIDYALAYA

SESSION ENDING EXAM (2022-23)

Subject: English

Class: III _____

Time: 2 hours 30 Min

Max. Marks: 80

Name: _____

Roll No.: _____

Date: _____

Observation	Identification	Discovery of Facts	Total
30	25	25	80

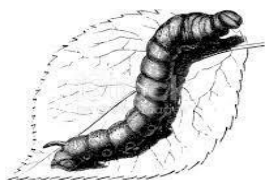
Sign of the Invigilator: _____ Sign of Subject Teacher: _____

OBSERVATION AND REPORTING

Q.1. Observe the pictures and write the answer:-

(1x10=10)

1.



Name this worm _____
(Silk worm, Earth worm)

2.



Name this player _____
(Kapil Dev , Virat Kohli)

3.



Name this person _____

4.



Name this Helper

(Post man, Police man)

5.



Name the type of letter

(Inland letter, Envelope)

6.



Name the house _____


7.



The model of the Earth is called

(Map, Globe)

8.



Onion is the _____ part of
the plant. (Root, Stem)

9.



Name the type of family

(Joint family / small family)

10



Name the game in which these things
are used _____

(Base ball , Cricket)

S A

Q..2 Answer the following.

(2 X 5 = 10)


1



a) What do we call this man ? _____

b) What things does he need to make a pot?

2.



A) Name this animal. _____

b) Why do we keep it?

3. Encircle the odd-one out.....

a) Meat Banana Egg Milk

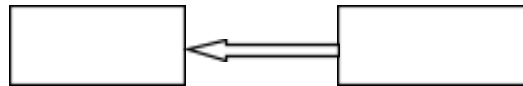
b) Tomato Onion Fish Potato

4. Write any two ways of saving water.

5. Complete the food-chain using the following :--

Snake , Eagle , Frog , Grasshopper

Grass




L A

(5 X 2 = 10 marks)

Q3 i) a) Name this script. _____

b) Write four sentences on Braille script.



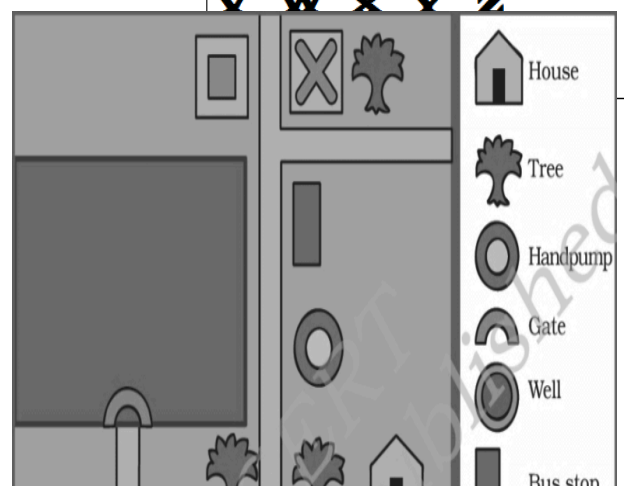
ii) Observe the map carefully and answer the following questions.

a. How many hand pumps are there in the map?

Ans: _____

b. How many trees are there in the map?

Ans : _____



c. How many houses are there in the map?

Ans: _____

d. What is near to the shop?

Ans: _____

e. Is the bus- stop closer to the school or to the hospital?

Ans: _____

IDENTIFICATION AND CLASSIFICATION

V S A (1x10=10 marks)

Q.1. Fill in the blanks with the words given in the help box

Assam , Fire , Safe , Camel , Honey , Pigeon, Drinking , Hockey , Cotton , White

1. Pots are baked in _____
2. In olden days letters were sent by _____
3. We feel _____ in our family .
4. Water collected in tanks is mostly used for _____
5. Houses on stilts are found in _____
6. We get _____ from honeybees.
7. _____ is the national game .
8. _____ is called the Ship of desert .
9. We wear _____ clothes in summer season .
10. The blind use a _____ stick when they go out .

S A (2 X 5 = 10 marks)

Q.No.2 Answer the following questions---

1) i) Name the game.

Ans _____



ii) What type of game is it?

Ans _____(indoor/outdoor)

2. Name two animals that---

i) You cannot touch.

ii) You have touched...

3) Classify the following into Natural things and Man -made things
(Sunlight, House, Pen, Air)

Natural things	Man made things

4) Encircle the correct type of family of-

i) Tara - Joint family / single parent family

ii) Sitamma – Joint family / single parent family

5) Match the correct answer

1.



No U turn

2.



No smoking

3.



No Parking

4.



No Horn

L A (5 X 1 = 5 marks)

Q. 3 Circle names of any five water –containers and write the names below

A	B	G	L	A	S	S	G	J	B
E	A	R	T	H	E	N	P	O	T
Q	C	D	B	E	F	B	H	I	A

U	R	S	A	T	J	U	G	K	N
A	J	E	R	R	Y	C	A	N	K
D	N	T	R	R	N	K	L	E	Y
F	X	B	E	N	O	E	M	Z	W
H	G	C	L	B	O	F	T	L	E

1. _____ 2. _____ 3. _____

4. _____ 5. _____

DISCOVERY OF FACTS

V S A (1 X 5 = 5 marks)

Q.1 Tick (✓) the correct answer.

- a) The Sun rises in the **East / West**.
- b) Water, wind, and soil are **Living / Non-living** things.
- c) **Kho-Kho / Football** can be played without ball.
- d) We should **Waste / Save** even a single drop of water.
- e) A veterinary doctor treats **Human / Animals**.

S A (2 x 5 = 10 marks)

Q. 2 . i) Which of the following is an unstitched dress. Underline it.

Frock Dupatta Shirt Saree
Skirt Turban Scarf Shorts

ii) What kind of problems do old people have?

iii) Name the materials used to make a Pucca house.

iv) Draw your **'family tree'**.

v) Write names of any four means of communication.

_____	_____
_____	_____

L A (2 x 5 = 10 marks)

Q. 3 i) Name the **medicinal plants** used **for curing**-

- | | |
|-------------------|-------|
| a) Cough and cold | _____ |
| b) Toothache | _____ |
| c) Stomachache | _____ |
| d) Wound | _____ |
| e) Skin diseases | _____ |

ii) Arrange and write the process of making pot .

1. Drying the pot in the sun and baking in the kiln.
2. Digging, Drying and sieving the clay.
3. Placing clay dough on potter's wheel to shape the pot.
4. Mixing water to make clay dough.
5. Decorating the pot with colour.

☐
☐
☐
☐
☐

Ans 1. _____

2. _____

3. _____

4. _____

5. _____