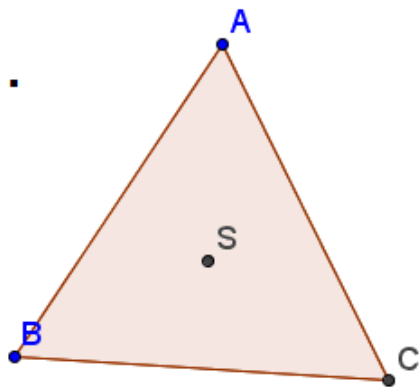


Name: _____ Date: _____ Period: _____

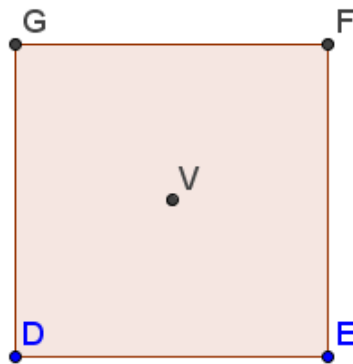
For each figure:

- A) Measure one interior angle
- B) Find the smallest angle of rotational symmetry
- C) Add the measure of the interior angle and the angle of rotational symmetry

1.



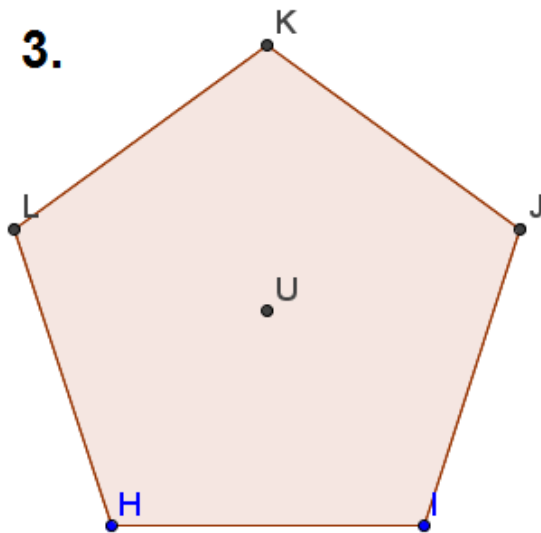
2.



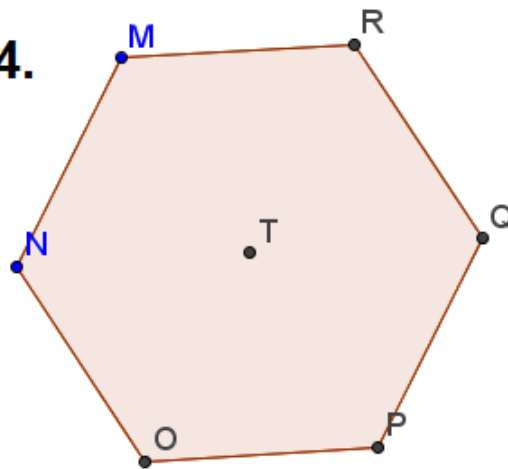
1.
A)
B)
C)

2.
A)
B)
C)

3.



4.



3.
A)
B)
C)

4.
A)
B)
C)