

5

# Worksheet for Science

Quarter 1

Week

5

**Worksheet for Science Grade 5**  
**Quarter 1: Week 5**  
**SY 2023-2024**

This material is intended exclusively for the use of teachers participating in the pilot implementation of the MATATAG K to 10 Curriculum during the School Year 2023-2024. It aims to assist in delivering the curriculum content, standards, and lesson competencies. Any unauthorized reproduction, distribution, modification, or utilization of this material beyond the designated scope is strictly prohibited and may result in appropriate legal actions and disciplinary measures.

Borrowed content included in this material is owned by their respective copyright holders. Every effort has been made to locate and obtain permission to use these materials from their respective copyright owners. The publisher and development team do not represent nor claim ownership over them.

**Development Team**

**Writers: Kathleen Mallorca Morales**

**Validators: Diana Lou E. Sipalay**

**Illustrator:**

**Layout Artist:**

**Management Team**

Juan Dela Cruz, Juan Dela Cruz, and Juan Dela Cruz

Every care has been taken to ensure the accuracy of the information provided in this material. For inquiries or feedback, please write or call the Office of the Director of the Bureau of Learning Resources via telephone numbers (02) 8634-1072 and 8631-6922 or by email at [blr.od@deped.gov.ph](mailto:blr.od@deped.gov.ph).

**LEARNING ACTIVITY SHEET 1**

<b>Learning Area:</b>	Science	<b>Quarter:</b>	1st Quarter
<b>Lesson No.:</b>	5	<b>Date:</b>	
<b>Lesson Title/ Topic:</b>	Temperature and its effect on the state of matter		
<b>Name:</b>		<b>Grade &amp; Section:</b>	

**I. Activity No.1:** Heating and Cooling a Candle**II. Objective(s):**

- a. define heat and how energy moves; and
- b. determine the effect of heat on the different states of matter

**III. Materials Needed:**

laboratory thermometer, candle, burner, empty tin can, bowl with water

**IV. Instructions:**

1. Break up the candle into small pieces and put them in the empty tin can.
2. Place the thermometer in the tin and take the burner as shown in the picture below.
3. Measure the temperature of the candle every two minutes and observe the candle until it melts completely.
4. Record the temperature and your observations in the table after every two minutes for ten minutes.

**RECORD OF OBSERVATIONS**

<b>Time</b> (minutes)	<b>Temperature</b> (Celsius)	<b>Condition of</b> the Candle
00		
02		
04		
06		
08		
10		

5. After melting, place the tin can in the bowl of water. Measure the temperature of the melted candle every two minutes for another ten minutes and observe its hardness.
6. Record the temperature and your observations in the table.

**RECORD OF OBSERVATIONS**

Time (minutes)	Temperature (Celsius)	Condition of the Melted Candle
00		
02		
04		
06		
08		
10		

7. Share your results with your classmates.

**Discussion Questions:**


1. What was the state of the candle before and after heating?

2. How did the state of the candle change after placing it in the bowl?

3. What was the temperature of the candle when it completely melted and hardened?


4. How does the candle change its state from a solid to a liquid and from a liquid to a solid?

5. Imagine seeing the molecules of the candle. Could you draw how they look like before heating? Draw it in the box below.



What state of matter was it? \_\_\_\_\_

6. How about after it was heated? Draw it in the box below.




What state of matter was it? \_\_\_\_\_

7. What do you think caused the molecules to change their arrangement?


---

8. When the melted candle was poured into the can, what do you think the molecules look like? Draw it in the box.



What state of matter was it? \_\_\_\_\_

9. How about when the temperature reading was at its lowest? How do you think the molecules looked then? Draw it in the box.



What state of matter was it? \_\_\_\_\_

## V. Synthesis

What happened to the candle when you heat and cool it? What do you think is the effect of heat on solid and liquid materials?

---



---



---



---

**LEARNING ACTIVITY SHEET 2**

<b>Learning Area:</b>	Science	<b>Quarter:</b>	1st Quarter
<b>Lesson No.:</b>	5	<b>Date:</b>	
<b>Lesson Title/ Topic:</b>	Temperature and its effect on the state of matter		
<b>Name:</b>		<b>Grade &amp; Section:</b>	

**I. Activity No.2:** Water Wonder

**II. Objective:**

- a. explain the effect of heat on the different states of matter.

**III. Materials Needed:**

laboratory thermometer, two ice cubes on a platter, a burner, an empty tin can

**IV. Instruction:**

1. Observe the ice cubes on a platter and get the temperature every two minutes. Write this in Column B.
2. Record the observations on the condition of the ice cube in Column C.
3. When the ice has melted, take note of its volume and record it in Column E. Pour it into the empty tin can. Take the temperature and record this in Column D.
4. Mount the tin can to the burner and bring it to a boil.
5. Record the temperature every two minutes for 14 minutes and observe the changes that have taken place. Observe the amount of water.

**RECORD OF OBSERVATIONS**

<b>Time</b> (minutes) A	<b>Temp</b> (Celsius) B	<b>Condition of</b> <b>the ice cube</b> C	<b>Temp</b> (Celsius) D	<b>Condition of</b> <b>the water</b> E
00				
02				
04				
06				
08				
10				
12				
14				

6. After about three temperature recordings (approximately 5-6 minutes), put off the fire and record your observations. Record how much water is left.

**V. Synthesis**

**Discussion Questions:**

1. What happened to the ice cubes when the temperature increased?

---

---

2. What happened to water when heat was continuously applied?

---

---

3. What happened to the volume of water before and after applying more heat ?

---

---

4. Where do you think the water goes?

---

---

5. What observable characteristic of water surfaced?

---

---

6. What changes in the states of matter did you observe during this activity?

---

---