



Prefeitura Municipal de Quadra
Capital do Milho Branco
Secretaria Municipal de Educação

Gabarito de Matemática 6º ano 2021 - 3º Bimestre - aula 7 – NEE

ATIVIDADE 1:




SOME AS FIGURAS IGUAIS:

EXEMPLO:

5 + 3 = 8

A)  +  = 

3 + 2 = 5


B)  +  = 


8 + 4 = 12



Prefeitura Municipal de Quadra
Capital do Milho Branco
Secretaria Municipal de Educação


C)




+ 

16 + **6** = **22**

D)



+ 

15 + **9** = **24**



Prefeitura Municipal de Quadra
Capital do Milho Branco
Secretaria Municipal de Educação

ATIVIDADE 2:

SUBTRAÇÃO (MENOS):

EXEMPLO:

$$5 - 1 = 4$$

○ ○ ○ ○ ●

A) $8 - 5 = 3$



B) $7 - 2 = 5$





Prefeitura Municipal de Quadra
Capital do Milho Branco
Secretaria Municipal de Educação

C) $12 - 5 = 7$

The diagram shows two rows of circles. The top row has six white circles, representing the number 12 (one ten and two ones). The bottom row has six circles: one white circle followed by five green circles, representing the number 5 (five ones). The result 7 is shown as seven green circles.

D) $20 - 8 = 12$

The diagram shows a grid of circles. The top two rows each have five white circles, representing the number 20 (two tens). The third row has two white circles followed by three green circles, representing the number 8 (eight ones). The result 12 is shown as one ten rod (a row of five green circles) and two one units (a row of two green circles).