

7.2

Why Do Ethnicities have Distinctive Distributions?



7.2

Apartheid A harsh system of racial segregation enforced in South Africa from 1948 - 1994

Black Lives Matter Movement that campaigns against violence and perceived racism toward black people and educates others about the challenges that African Americans continue to face in the United States.

Blockbusting Real estate agents convincing people to sell houses because of minorities or poor people moving into the area and making money by reselling the property for a higher price

Redlining The now illegal (in the USA) practice of refusing to loan money to specific areas because of poverty in the area

Sharecropper A person who works fields rented from a landowner and pays the rent and repays the loans by turning over to the landowner a share of the crops.

Triangular slave trade A practice, primarily during the eighteenth century, in which European ships transported slaves from Africa to Caribbean islands, molasses from the Caribbean to Europe, and trade goods from Europe to Africa.

Key Issue#:

7.2.1

Name _____ Period _____

Learning Outcome Describe forced migration from Africa

Questions/Main Ideas

Notes

Slavery

Triangular slave trade




▲ **FIGURE 7-24 ORIGINS AND DESTINATIONS OF SLAVES** Ships sailed from Africa to the Western Hemisphere, from the Americas to Europe, and from Europe to Africa. From Africa, slaves and gold were transported to the Western Hemisphere, primarily to the Caribbean islands.



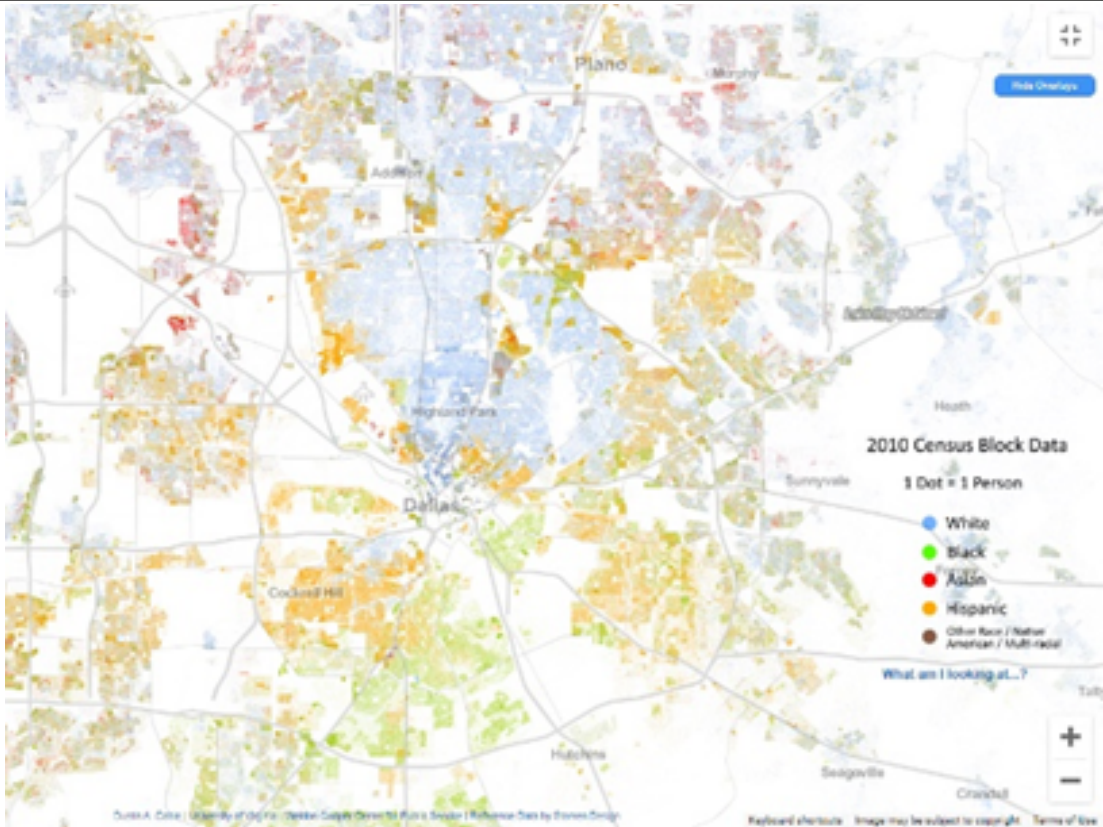
▲ **FIGURE 7-25 TRIANGULAR SLAVE TRADE** Ships left Europe for Africa with cloth and other goods used to buy the slaves. The same ships transported the slaves across the Atlantic. Completing the triangle, the ships returned to Europe with sugar and molasses. Some ships carried molasses from the Caribbean to the North American colonies and rum from the colonies to Europe, forming a rectangular trading pattern.

Voluntary Migration from Latin America & Asia	
Pause and Reflect	Which area of Africa appears to have been the place or origin for most slaves sent to the North America Colonies?
Summary	
Questions for class	1.
	2.
	3.

Key Issue#: 7.2.2	Name _____Period_____
Learning outcome Describe the patterns of migration of African Americans within the United State.	
Questions/Main Ideas	Notes
African American distinctive internal migration	<div> <div> <div>1.</div> <div>2.</div> </div> <div>  <p>▲ FIGURE 7-26 INTERREGIONAL MIGRATION OF AFRICAN AMERICANS Migration followed four distinct channels along the East Coast, east-central, west-central, and southwestern regions of the country.</p> </div> </div>

Interregional Migration	Share cropper
Intraregional Migration	Expansion of African-American Neighborhoods “White Flight” Block busting Redlining

Dallas County Racial
make distribution



Summary

Questions for class

1.

2.



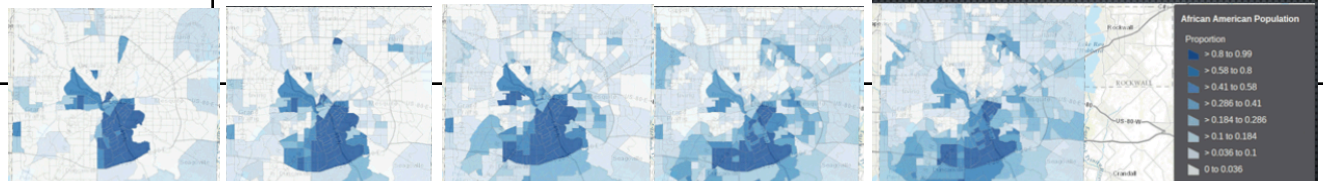
3.

Key Issue#:


7.2.3


Name _____Period _____

Learning outcome Explain the laws once used to segregate races in the United States and South Africa

Questions/Main Ideas	Notes
United States: "Separate but Equal"	
U.S. Civil Rights Movement	
Black Lives Matter	
South Africa: Separate Development	<p>Apartheid</p> 
Question	<p>Compare African American population patterns in Dallas County Texas from 1970 to 2010</p> 

Pause and Reflect	More than 50 years after the Civil Rights Acts, why might schools in cities like Baltimore and Detroit still be racially segregated?
Summary	
Questions for class	1.
	2.
	3.

Key Issue#: 7.2.4	Name _____ Period _____
Learning Outcome Describe how ethnicities can be divided among more than one nationality	
Questions/Main Ideas	Notes
Ethnicities in South Asia	<div>  <p>FIGURE 7-35 ETHNIC DIVISION OF SOUTH ASIA In 1947, British India was partitioned into two independent states, India and Pakistan, which resulted in the forced migration of an estimated 17 million people. The creation of Pakistan as two territories nearly 1,600 kilometers (1,000 miles) apart proved unstable, and in 1971 East Pakistan became the independent country of Bangladesh.</p> <p>FIGURE 7-36 KASHMIR India and Pakistan dispute the location of their border in the Kashmir region.</p> </div>

Dividing the Kurds	 <p>▲ FIGURE 7-37 KURDISTAN The area on the map is the territory that Kurds wish to consolidate into an independent Kurdistan.</p>
Pause and Reflect	Ezplain why an independent state of Kurdistan would be opposed by the governments of Iran, Iraq, Syria, and Turkey
Summary	
Questions for class	1.
	2.
	3.