


High Rise

Perimeter

The perimeter of any 2-D shape is the distance around the outside of the shape.

The **perimeter** is the distance around the outside of a 2-D shape.

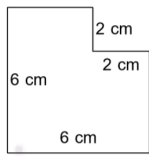


Buttons: Skip, navigation arrows, and a 'Hide Text' button.

Perimeter of Complex Figures

Perimeter

Find The Perimeter Of Complex Figures



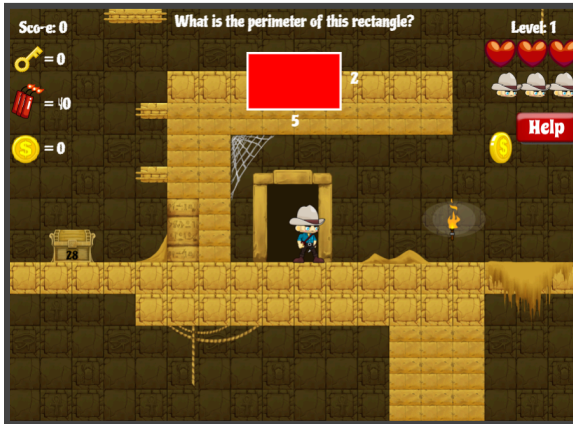
Click the "Start Quiz" button to proceed

Geo Tombs

Area/Perimeter

Score: 0 Level: 1

What is the perimeter of this rectangle?



Buttons: Help, and icons for key, bomb, and coin.

Area of Figures

Area

Shape Surveyor


Area/Perimeter

FUNBRAIN.COM

Correct	Incorrect
0	0

Change difficulty: [Harder](#)

Calculate the Perimeter of the Square:




Buttons: Shape Surveyor (multiple), and a 'Check It!' button.

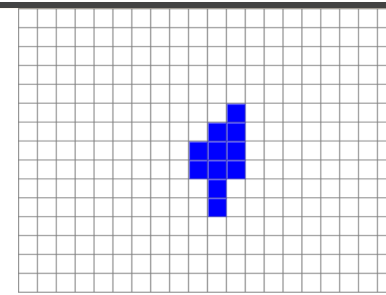
Area Explorer

Area

Find The Area Of Rectangles



Click the "Start Quiz" button to proceed



What is the shape's area? square units

Scoring:

Area Builder

Area

Level 1
1 of 6
Score: 0

Your goal:
Area = 18

The interface shows a goal of area 18. On the left, there are two checkboxes for grid sizes: a 3x3 grid and a 3x2 grid. Below these are four shapes: a 1x1 square, a 1x2 rectangle, a 1x3 rectangle, and a 2x2 square. A yellow lightning bolt icon is next to the shapes.

Nets of 3D Shapes

Identify 3D Shapes

3D NETS

Identification of the correct 3D shape from a given net.

A net of a triangular prism is shown, consisting of two triangles and three rectangles.

Volume Game

Cubic Volume

Click the shapes with a volume of 4 cubic units.

Six 3D shapes made of blue cubes are shown on a light blue background. The shapes are: a 2x2x2 cube, a 1x4x1 rectangular prism, a 2x2x1 rectangular prism, a 1x3x1 rectangular prism, a 1x2x1 rectangular prism, and a 2x1x1 rectangular prism. A yellow star is under the 1x2x1 shape.

ROUND: 1 / 4 HITS: 0 MISSES: 0 SCORE: 0

Minecraft Volume

Cubic Volume

MINECRAFT

Volume of Rectangular Prisms

A 3x2x1 rectangular prism made of colorful Minecraft blocks is shown on a grassy field. To the right, a vertical list of volume options is displayed.

Volume

Rags to Riches

Volume

Volume of Cubes and Rectangles

Volume

Find the volume of a rectangular prism with the measurements: $l = 22\text{ m}$; $w = 10\text{ m}$; $h = 4\text{ m}$.

HINT HINT HINT

A: 880 meters
B: 880 cubic meters
C: 224 cubic meters
D: 880 square meters

\$1,000,000
\$500,000
\$250,000
\$128,000
\$64,000
\$32,000
\$16,000
\$8,000
\$4,000
\$2,000

Volume of a Cube
Volume

Find The Volume Of Cubes

Click the "Start Quiz" button to proceed

What is the volume?

4 km
1 km 1 km

cubic km

Answer

Facile
Volume

5th Grade Volume Jeopardy

COMPUTATIONS	WORD PROBLEMS	MISSING DIMENSIONS	AREA AND PERIMETER	VOCAB	MATH FELLOWSHIP
\$100	\$100	\$100	\$100	\$100	\$100
\$200	\$200	\$200	\$200	\$200	\$200
\$300	\$300	\$300	\$300	\$300	\$300
\$400	\$400	\$400	\$400	\$400	\$400
\$500	\$500	\$500	\$500	\$500	\$500

Final Facile

Score: PINEAPPLE (0) LIONESSES (0)

Hints ON