

For those who CANNOT access Digits and have talked to me about it, you can access the homework problems here.

You can either “Make a Copy” of this document and type your answers below the question OR do your homework on paper and turn it in to me by the due date.

1.

Draw a net of the figure.



Which net matches the given figure?

☐ A.



☐ B.




☐ C.



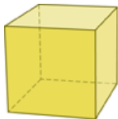
2.

Identify the three-dimensional figure the given net forms.

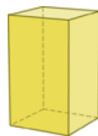


Which figure does the given net form?

☐ A.



☐ B.



☐ C.



3.

Identify the three-dimensional figure the given net forms.



Which figure does the given net form?

☐ A. triangular pyramid

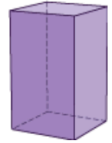
☐ B. rectangular prism

☐ C. square pyramid

☐ D. cube

4.

Describe a net of the rectangular prism. Use pencil and paper. Draw a net of the rectangular prism.



Which of the following describes a net of the rectangular prism?

- ☐ A. two rectangular bases and two pairs of triangular lateral faces
- ☐ B. one rectangular base and two pairs of triangular lateral faces
- ☐ C. two rectangular bases and two pairs of rectangular lateral faces
- ☐ D. two pairs of rectangular bases and two pairs of rectangular lateral faces

5.

Draw a net of the figure.



Which net matches the given figure?

☐ A.



☐ B.



☐ C.

