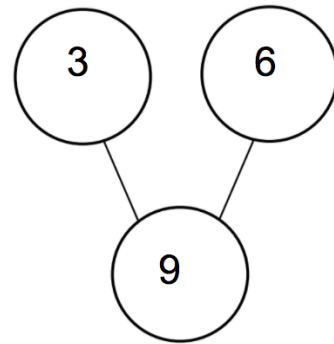


Name: \_\_\_\_\_

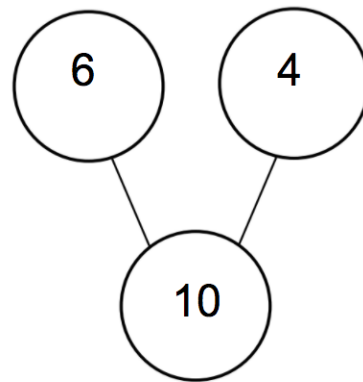
Date: \_\_\_\_\_



Write a subtraction sentence to match the number bond.

Name: \_\_\_\_\_

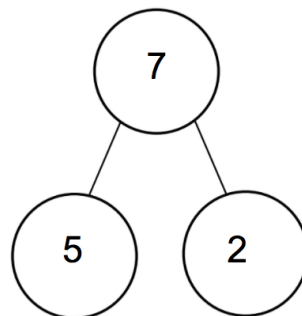
Date: \_\_\_\_\_



Write a subtraction sentence to match the number bond.

Name: \_\_\_\_\_

Date: \_\_\_\_\_



Write a subtraction sentence to match the number bond. \_\_\_\_\_