



Name: \_\_\_\_\_

Week #1


Monday

How much money is here?	Draw quick picture	Expanded form & word form	Time	Social Studies
 cents= _____ dollars= _____	22	22	1.	
			2.	
			3.	


Tuesday

 cents= _____ dollars= _____	37	37	1.	
			2.	
			3.	


Wednesday

 cents= _____ dollars= _____	45	45	1.	
			2.	
			3.	

Thursday

 cents= _____ dollars= _____	56	56	1.	
			2.	
			3.	






Friday


 cents= _____ dollars= _____	63	63	1.	
			2.	

			3.	
--	--	--	----	--

Name: \_\_\_\_\_

Week #2







	How much money is here?	Draw quick picture	Expanded form & word form	Time	Social Studies
Monday	 cents= _____ dollars= _____	83	83	1.	
				2.	
				3.	
Tuesday	 cents= _____ dollars= _____	33	33	1.	
				2.	
				3.	
Wednesday	 cents= _____ dollars= _____	52	52	1.	
				2.	
				3.	
Thursday	 cents= _____ dollars= _____	61	61	1.	
				2.	
				3.	
Friday		23	23	1.	

  cents= _____ dollars= _____			2.	
			3.	





Name: \_\_\_\_\_

Week #3








Monday

How much money is here?	Draw quick picture	Expanded form & word form	Time	Social Studies
      cents= _____ dollars= _____	78	78	1.	
			2.	
			3.	










Tuesday

    cents= _____ dollars= _____	42	42	1.	
			2.	
			3.	


Wednesday

       cents= _____ dollars= _____	35	35	1.	
			2.	
			3.	

Thursday

         cents= _____ dollars= _____	24	24	1.	
			2.	
			3.	


Friday

 <p>cents= _____ dollars= _____</p>	65	65	1.	
			2.	
			3.	


Name: \_\_\_\_\_

Week #4

Monday

How much money is here?	Draw quick picture	Expanded form & word form	Time	Social Studies
 <p>cents= _____ dollars= _____</p>	21	21	1.	
			2.	
			3.	


Tuesday


 <p>cents= _____ dollars= _____</p>	54	54	1.	
			2.	
			3.	

Wednesday

 <p>cents= _____ dollars= _____</p>	64	64	1.	
			2.	
			3.	

Thursday


	78	78	1.	
			2.	

cents= _____ dollars= _____			3.	
 cents= _____ dollars= _____	22	22	1.	
			2.	
			3.	


Name: \_\_\_\_\_

Week #5


Monday

How much money is here?	Draw quick picture	Expanded form & word form	Time	Social Studies
 cents= _____ dollars= _____	87	87	1.	
			2.	
			3.	


Tuesday



 cents= _____ dollars= _____	32	32	1.	
			2.	
			3.	

Wednesday

 cents= _____ dollars= _____	28	28	1.	
			2.	
			3.	

Thursday




	65	65	1.	
---	----	----	----	--

 cents= _____ dollars= _____			2.	
			3.	
 cents= _____ dollars= _____	94	94	1.	
			2.	
			3.	

Name: \_\_\_\_\_



Week #6

Monday


How much money is here?	Draw quick picture	Expanded form & word form	Time	Social Studies
 cents= _____ dollars= _____	525	525	1.	
			2.	
			3.	
 cents= _____ dollars= _____	386	386	1.	
			2.	
			3.	
 cents= _____ dollars= _____	599	599	1.	
			2.	
			3.	


Tuesday


Wednesday

 <p>cents= _____ dollars= _____</p>	<p>224</p>	<p>224</p>	<p>1.</p>	
 <p>cents= _____ dollars= _____</p>	<p>112</p>	<p>112</p>	<p>1.</p>	
			<p>2.</p>	
			<p>3.</p>	
			<p>2.</p>	
			<p>3.</p>	



## Week #7

How much money is here?	Draw quick picture	Expanded form & word form	Time	Social Studies
 <p>cents= _____ dollars= _____</p>	621	621	1.	
			2.	
			3.	

 <p>cents= _____ dollars= _____</p>	377	377	1.	
			2.	
			3.	

	259	259	1.	
			2.	


Thursday

cents= _____ dollars= _____			3.	
 cents= _____ dollars= _____	111	111	1.	
			2.	
			3.	
 cents= _____ dollars= _____	324	324	1.	
			2.	
			3.	


Name: \_\_\_\_\_

## Week #8


Monday

How much money is here?	Draw quick picture	Expanded form & word form	Time	Social Studies
 cents= _____ dollars= _____	721	721	1.	
			2.	
			3.	




Tuesday

 cents= _____ dollars= _____	831	831	1.	
			2.	
			3.	



Wednesday

 cents= _____ dollars= _____	418	418	1.	
--	-----	-----	----	--





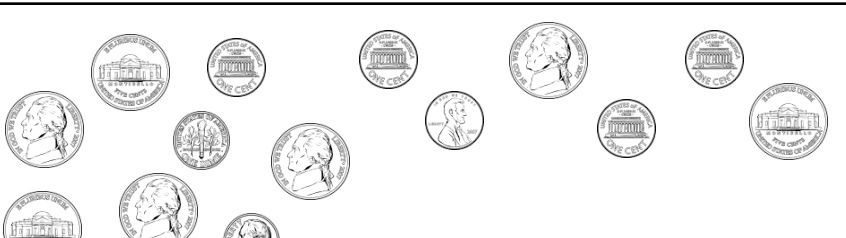
 <p style="text-align: right;">cents= _____ dollars= _____</p>			2.	
			3.	
 <p style="text-align: right;">cents= _____ dollars= _____</p>	396	396	1.	
			2.	
			3.	
 <p style="text-align: right;">cents= _____ dollars= _____</p>	452	452	1.	
			2.	
			3.	

## Week #9

How much money is here?	Draw quick picture	Expanded form & word form	Time	Social Studies
 <p>cents= _____ dollars= _____</p>	124	124	1.	
			2.	
			3.	
 <p>cents= _____ dollars= _____</p>	621	621	1.	
			2.	
			3.	

Tuesday



Wednesday

 <p>cents= _____ dollars= _____</p>	418	418	1.	
			2.	
			3.	
 <p>cents= _____ dollars= _____</p>	396	396	1.	
			2.	
			3.	
 <p>cents= _____ dollars= _____</p>	453	453	1.	
			2.	
			3.	

Name: \_\_\_\_\_

Week #10

Monday

How much money is here?	Draw quick picture	Expanded form & word form	Time	Social Studies
 <p>cents= _____ dollars= _____</p>	542	542	1.	
			2.	
			3.	
	723	723	1.	
			2.	












Tuesday

Wednesday

Thursday






Monday

Tuesday

	cents= _____ dollars= _____			3.	
    	cents= _____ dollars= _____	222	222	1.	
				2.	
				3.	
 	cents= _____ dollars= _____	396	396	1.	
				2.	
				3.	
   	cents= _____ dollars= _____	312	312	1.	
				2.	
				3.	

Name: \_\_\_\_\_

Week #11




	How much money is here?	Draw quick picture	Expanded form & word form	Time	Social Studies
 	cents= _____ dollars= _____	540	540	1.	
				2.	
				3.	
  		430	430	1.	

Wednesday

Thursday


Monday

Tuesday

	cents= _____ dollars= _____			2.	
				3.	
	cents= _____ dollars= _____	320	320	1.	
				2.	
				3.	
	cents= _____ dollars= _____	210	210	1.	
				2.	
				3.	
	cents= _____ dollars= _____	130	130	1.	
				2.	
				3.	





Name: \_\_\_\_\_

Week #12

How much money is here?	Draw quick picture	Expanded form & word form	Time	Social Studies
	690	690	1.	
			2.	
			3.	

Wednesday


Thursday

 <p>cents= _____ dollars= _____</p>	930	930	1.	
			2.	
			3.	
 <p>cents= _____ dollars= _____</p>	650	650	1.	
			2.	
			3.	
 <p>cents= _____ dollars= _____</p>	770	770	1.	
			2.	
			3.	
 <p>cents= _____ dollars= _____</p>	430	430	1.	
			2.	
			3.	

Name: \_\_\_\_\_

Week #13





Monday

How much money is here?	Draw quick picture	Expanded form & word form	Time	Social Studies
	640	640	1.	
			2.	

Wednesday


Thursday

Monday

	cents= _____ dollars= _____			3.	
	cents= _____ dollars= _____	430	430	1.	
				2.	
				3.	
	cents= _____ dollars= _____	540	540	1.	
				2.	
				3.	
	cents= _____ dollars= _____	470	470	1.	
				2.	
				3.	
	cents= _____ dollars= _____	530	530	1.	
				2.	
				3.	

Name: \_\_\_\_\_

























Week #14

How much money is here?	Draw quick picture	Expanded form & word form	Time	Social Studies
	401	401	1.	

Wednesday

Thursday

Friday

<p>cents= _____ dollars= _____</p>			2.	
			3.	
<div></div> <p>cents= _____ dollars= _____</p>	505	505	1.	
			2.	
			3.	
<div></div> <p>cents= _____ dollars= _____</p>	204	204	1.	
			2.	
			3.	
<div></div> <p>cents= _____ dollars= _____</p>	303	303	1.	
			2.	
			3.	
<div></div> <p>cents= _____ dollars= _____</p>	503	503	1.	
			2.	
			3.	
































Name: \_\_\_\_\_

Week #15

How much money is here?	Draw quick picture	Expanded form & word form	Time	Social Studies
-------------------------	--------------------	---------------------------	------	----------------

Wednesday

Thursday



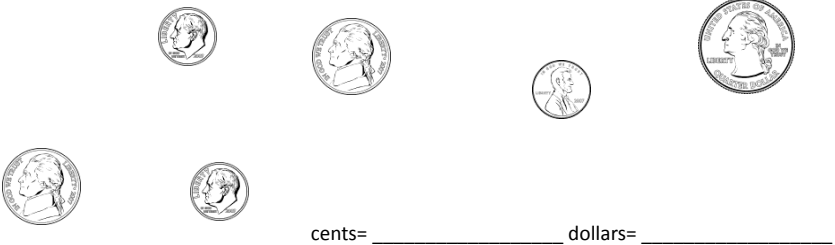


<div>     </div> <div>cents= _____ dollars= _____</div>	807	807	1.	
			2.	
			3.	
<div>        </div> <div>cents= _____ dollars= _____</div>	609	609	1.	
			2.	
			3.	
<div>         </div> <div>cents= _____ dollars= _____</div>	507	507	1.	
			2.	
			3.	
<div>       </div> <div>cents= _____ dollars= _____</div>	306	306	1.	
			2.	
			3.	
<div>       </div> <div>cents= _____ dollars= _____</div>	704	704	1.	
			2.	
			3.	

Name: \_\_\_\_\_



Wednesday

Thursday






How much money is here?		Draw quick picture	Expanded form & word form	Time	Social Studies
 cents= _____ dollars= _____	506	506	1.		
			2.		
			3.		
 cents= _____ dollars= _____	806	806	1.		
			2.		
			3.		
 cents= _____ dollars= _____	402	402	1.		
			2.		
			3.		
 cents= _____ dollars= _____	502	502	1.		
			2.		
			3.		
 cents= _____ dollars= _____	708	708	1.		
			2.		
			3.		

Name: \_\_\_\_\_

Week #17

Wednesday

Thursday






How much money is here?		Draw quick picture	Expanded form & word form	Time	Social Studies
 <p>cents= _____ dollars= _____</p>	100	100	1.		
			2.		
			3.		
 <p>cents= _____ dollars= _____</p>	500	500	1.		
			2.		
			3.		
 <p>cents= _____ dollars= _____</p>	300	300	1.		
			2.		
			3.		
 <p>cents= _____ dollars= _____</p>	800	800	1.		
			2.		
			3.		
 <p>cents= _____ dollars= _____</p>	600	600	1.		
			2.		
			3.		

Name: \_\_\_\_\_

Week #18






Wednesday

Thursday

How much money is here?	Draw quick picture	Expanded form & word form	Time	Social Studies
  cents= _____ dollars= _____	200	200	1.	
			2.	
			3.	
  cents= _____ dollars= _____	900	900	1.	
			2.	
			3.	
  cents= _____ dollars= _____	400	400	1.	
			2.	
			3.	
  cents= _____ dollars= _____	500	500	1.	
			2.	
			3.	
  cents= _____ dollars= _____	100	100	1.	
			2.	
			3.	

Name: \_\_\_\_\_






Week #19

How much money is here?	Draw quick picture	Expanded form & word form	Time	Social Studies
 <p>cents= _____ dollars= _____</p>	505	505	1.	
			2.	
			3.	
 <p>cents= _____ dollars= _____</p>	41	41	1.	
			2.	
			3.	
 <p>cents= _____ dollars= _____</p>	123	123	1.	
			2.	
			3.	
 <p>cents= _____ dollars= _____</p>	230	230	1.	
			2.	
			3.	
 <p>cents= _____ dollars= _____</p>	56	56	1.	
			2.	
			3.	

Name: \_\_\_\_\_

Wednesday

Thursday



















How much money is here?		Draw quick picture	Expanded form & word form	Time	Social Studies
 <p>cents= _____ dollars= _____</p>	503	503	1.		
			2.		
			3.		
 <p>cents= _____ dollars= _____</p>	33	33	1.		
			2.		
			3.		
 <p>cents= _____ dollars= _____</p>	51	51	1.		
			2.		
			3.		
 <p>cents= _____ dollars= _____</p>	990	990	1.		
			2.		
			3.		
 <p>cents= _____ dollars= _____</p>	43	43	1.		
			2.		
			3.		

Name: \_\_\_\_\_

Week #21






Wednesday

Thursday

How much money is here?	Draw quick picture	Expanded form & word form	Time	Social Studies
  <p>cents= _____ dollars= _____</p>	11	11	1.	
			2.	
			3.	
   <p>cents= _____ dollars= _____</p>	220	220	1.	
			2.	
			3.	
   <p>cents= _____ dollars= _____</p>	300	300	1.	
			2.	
			3.	
    <p>cents= _____ dollars= _____</p>	44	44	1.	
			2.	
			3.	
      <p>cents= _____ dollars= _____</p>	440	440	1.	
			2.	
			3.	

Name: \_\_\_\_\_






Week #22

How much money is here?		Draw quick picture	Expanded form & word form	Time	Social Studies
 <p>cents= _____ dollars= _____</p>	55	55	1.		
			2.		
			3.		
 <p>cents= _____ dollars= _____</p>	66	66	1.		
			2.		
			3.		
 <p>cents= _____ dollars= _____</p>	70	70	1.		
			2.		
			3.		
 <p>cents= _____ dollars= _____</p>	808	808	1.		
			2.		
			3.		
 <p>cents= _____ dollars= _____</p>	67	67	1.		
			2.		
			3.		

Name: \_\_\_\_\_

Wednesday

Thursday

How much money is here?		Draw quick picture	Expanded form & word form	Time	Social Studies
 <p>cents= _____ dollars= _____</p>	103		103	1.	
				2.	
				3.	
 <p>cents= _____ dollars= _____</p>	200		200	1.	
				2.	
				3.	
 <p>cents= _____ dollars= _____</p>	309		309	1.	
				2.	
				3.	
 <p>cents= _____ dollars= _____</p>	41		41	1.	
				2.	
				3.	
 <p>cents= _____ dollars= _____</p>	87		87	1.	
				2.	
				3.	

Name: \_\_\_\_\_

Week #24



How much money is here?	Draw quick picture	Expanded form & word form	Time	Social Studies
1. Trinity has 1 dime, 2 nickels, and two pennies. How much money does she have in all?       cents= _____ dollars= _____	143	143	1.	
			2.	
			3.	
1. Matthew has 4 dimes, 1 nickel, and 1 penny. How much money does he have in all?       cents= _____ dollars= _____	678	678	1.	
			2.	
			3.	
1. Kevin has 3 dimes, 3 nickels, and 3 pennies. How much does he have in all?       cents= _____ dollars= _____	789	789	1.	
			2.	
			3.	
1. Garrett has 2 dimes, 5 nickels, and 2 pennies. How much money does he have in all?       cents= _____ dollars= _____	890	890	1.	
			2.	
			3.	
1. Bob has 6 dimes, 2 nickels, and 7 pennies. How much change does he have in all?       cents= _____ dollars= _____	943	943	1.	
			2.	
			3.	

Name: \_\_\_\_\_

Week #25

How much money is here?	Draw quick picture	Expanded form & word form	Time	Social Studies
1. Rick has 1 quarter, 1 dime, and 2 pennies. How much money does he have in all?       cents= _____ dollars= _____	98	98	1.	
			2.	
			3.	
1. Vanessa has 2 quarters, 3 dimes, 1 nickel, and 4 pennies. How much change does she have in all?       cents= _____ dollars= _____	80	80	1.	
			2.	
			3.	
1. Joe found 1 quarter, 2 dimes, 1 nickel, and 8 pennies on his way to school. How much change did he find?       cents= _____ dollars= _____	700	700	1.	
			2.	
			3.	
1. Gabriella has 7 dimes, 5 nickels, and 2 pennies. How much money does she have in all?       cents= _____ dollars= _____	650	650	1.	
			2.	
			3.	
1. Briana has 3 quarters, 2 nickels, and 11 pennies. How much change does she have in all?       cents= _____ dollars= _____	43	43	1.	
			2.	
			3.	

Name: \_\_\_\_\_

How much money is here?	Draw quick picture	Expanded form & word form	Time	Social Studies
1. Anna has one \$100 bill, one \$10 bill, and one \$5 bill. How much does she have in all?        cents= _____ dollars= _____	604	604	1.	
			2.	
			3.	
1. Marcelo has three \$10 bills, 3 quarters, and 2 dimes in his wallet. How much money does he have in all?        cents= _____ dollars= _____	432	432	1.	
			2.	
			3.	
1. Jack received two \$100 bill, two \$10 bills, and three dimes. How much money does he have in all?        cents= _____ dollars= _____	321	321	1.	
			2.	
			3.	
1. Audrey found four \$10 bills, three \$5 bills and 7 nickels in her piggy bank. How much money did she find?        cents= _____ dollars= _____	210	210	1.	
			2.	
			3.	
1. Jade saved one \$5 bill, two \$1 bills, 1 quarter, and 1 dime. How much money does she have in all?        cents= _____ dollars= _____	754	754	1.	
			2.	
			3.	

Name: \_\_\_\_\_

Week #27

How much money is here?	Draw quick picture	Expanded form & word form	Time	Social Studies
1. John saved one \$100 bill, one \$10 bill, seven \$1 bills, and 3 dimes. How much money did he save in all?       cents= _____ dollars= _____	101	101	1.	
			2.	
			3.	
1. Bella found one \$5 bill, six \$1 bills, 1 quarter, 2 nickels, and 13 pennies in her purse. How much money does she have in all?       cents= _____ dollars= _____	202	202	1.	
			2.	
			3.	
1. Jordan has one \$100 bill, 7 \$5 bills, 4 quarters, and 9 pennies. How much does he have in all?       cents= _____ dollars= _____	303	303	1.	
			2.	
			3.	
1. Ally has four \$5 bills, 7 \$1 bills, 1 quarter and 12 pennies. How much money does she have in all?       cents= _____ dollars= _____	404	404	1.	
			2.	
			3.	
1. Tyler found six \$5 bills, three \$1 bills, 8 dimes, and three nickels in his wallet. How much money did he find?       cents= _____ dollars= _____	505	505	1.	
			2.	
			3.	

Name: \_\_\_\_\_

Week #28

How much money is here?	Draw quick picture	Expanded form & word form	Time	Social Studies
1. Jared want to count his money. He opened his piggy bank and found 56 cents. He found one quarter, two dimes, one nickel, and some pennies. How many pennies did he find?       cents= _____ dollars= _____	918	918	1.	
			2.	
			3.	
1. Sally had 44 cents. Three dimes, one nickel, and some pennies. How many pennies does she have?       cents= _____ dollars= _____	819	819	1.	
			2.	
			3.	
1. Nick has 52 cents. One quarter, two dimes, and some pennies. How many pennies does she have?       cents= _____ dollars= _____	726	726	1.	
			2.	
			3.	
1. Gabby emptied her piggy bank. She counted 38 cents. Three dimes, one nickel, and some pennies. How many pennies did she find?       cents= _____ dollars= _____	627	627	1.	
			2.	
			3.	
1. Emily counted the money in her purse. There were 86 cents. Two quarters, two dimes, two nickels and the rest were pennies. How many pennies does she have?       cents= _____ dollars= _____	299	299	1.	
			2.	
			3.	

Name: \_\_\_\_\_

Week #29

How much money is here?	Draw quick picture	Expanded form & word form	Time	Social Studies
1. Max took the trash out, so his mom gave him a quarter to go with his 45 cents. How much money does he have now?       cents= _____ dollars= _____	610	610	1.	
			2.	
			3.	
1. Isabella found a dime and three pennies along with her 72 cents. How much money does she have?       cents= _____ dollars= _____	729	729	1.	
			2.	
			3.	
1. Billy's mom gave him four dimes, and ten pennies to go with his 43 cents. How much money does he have?       cents= _____ dollars= _____	838	838	1.	
			2.	
			3.	
1. Jordan washed the dishes, so his dad gave him a quarter and five nickels to go with his 8 cents. How much change does he have now?       cents= _____ dollars= _____	747	747	1.	
			2.	
			3.	
1. Hayley went for a walk and found a quarter, two nickels, and seven pennies to go with her 10 cents. How much money does she have now?       cents= _____ dollars= _____	321	321	1.	
			2.	
			3.	

Name: \_\_\_\_\_

Week #30

How much money is here?	Draw quick picture	Expanded form & word form	Time	Social Studies
1. Alyssa went for a walk and found six nickels and eleven pennies along with her 9 cents. How much money does she have all together?       cents= _____ dollars= _____	549	549	1.	
			2.	
			3.	
1. After walking the dog, his mom gave him a quarter and two dimes to go with his 48 cents. How much money does he have now?       cents= _____ dollars= _____	814	814	1.	
			2.	
			3.	
1. Zoe earned two quarters and five dimes to go along with her 50 cents. How much money does she have?       cents= _____ dollars= _____	291	291	1.	
			2.	
			3.	
1. After Wyatt swept, his mom gave him seven nickels, two dimes, and 3 pennies to go with his 13 cents. How much money does he have in all?       cents= _____ dollars= _____	400	400	1.	
			2.	
			3.	
1. Matt's father gave him 10 cents to go along with his quarter, three dimes, and two nickels. How much money does he have all together?       cents= _____ dollars= _____	99	99	1.	
			2.	
			3.	

Name: \_\_\_\_\_

Week #31

How much money is here?	Draw quick picture	Expanded form & word form	Time	Social Studies
1. Betty went to the candy store with her money and bought three items. She bought jellybeans for 50 cents, a lollipop for 15 cents, and a gumball for a dime. How much did Betty spend?  cents= _____ dollars= _____	196	196	1.	
			2.	
			3.	
1. My friend bought a pencil for 38 cents, a bouncy ball for 20 cents, and a spinning top for 15 cents. How much money did they spend?  cents= _____ dollars= _____	827	827	1.	
			2.	
			3.	
1. Andrew went to the store and bought a notebook for 48 cents and color pencils for 50 cents. How much did he spend at the store?  cents= _____ dollars= _____	938	938	1.	
			2.	
			3.	
1. I went to the candy shop and bought a chocolate bar for 50 cents, gummy bears for 30 cents, and a lollipop for 25 cents. How much money did I spend?  cents= _____ dollars= _____	49	49	1.	
			2.	
			3.	
1. Jeff bought a birthday card for 50 cents, a party hat for 30 cents, and a balloon for 25 cents. How much did Jeff spend in all?  cents= _____ dollars= _____	311	311	1.	
			2.	
			3.	

Name: \_\_\_\_\_

Week #32



How much money is here?	Draw quick picture	Expanded form & word form	Time	Social Studies
1. Jack bought a toy for 60 cents, a pen for 30 cents, and a highlighter for a quarter. How much money did he spend?          cents= _____ dollars= _____	591	591	1.	
			2.	
			3.	
1. Ross purchased a rose for 75 cents, a chocolate bar for 65 cents, and a card for 50 cents. How much money did he spend in all?          cents= _____ dollars= _____	682	682	1.	
			2.	
			3.	
1. Frankie went to the store and bought three items. Some water balloons for 75 cents, a water gun for 60 cents, and a beach ball for 2 quarters. How much did she spend?          cents= _____ dollars= _____	773	773	1.	
			2.	
			3.	
1. Josh went to the candy shop and bought chocolate peanuts for 80 cents, licorice for 25 cents, and a gumball for 18 cents. How much money did he spend?          cents= _____ dollars= _____	864	864	1.	
			2.	
			3.	
1. Tina bought glue for 82 cents, colored paper for 70 cents, and a ruler for a quarter. How much did she spend?          cents= _____ dollars= _____	999	999	1.	
			2.	
			3.	

Name: \_\_\_\_\_

Week #33

How much money is here?	Draw quick picture	Expanded form & word form	Time	Social Studies
1. Dylan had 50 cents but bought a lollipop for 34 cents. How much change does he have left?       cents= _____ dollars= _____	654	654	1.	
			2.	
			3.	
1. Drew had a dollar but spent 65 cents on a highlighter. How much money does he have left?       cents= _____ dollars= _____	229	229	1.	
			2.	
			3.	
1. Victoria had 75 cents but bought a candy bar for 2 quarters. How much money does she have left?       cents= _____ dollars= _____	100	100	1.	
			2.	
			3.	
1. Carlos had 2 dollars but bought a notebook for a dollar and a pencil for 29 cents. How much money does he have left?       cents= _____ dollars= _____	705	705	1.	
			2.	
			3.	
1. Veronica had 90 cents but bought a chocolate bar for 65 cents. How much money does she have left?       cents= _____ dollars= _____	201	201	1.	
			2.	
			3.	

Name: \_\_\_\_\_

How much money is here?	Draw quick picture	Expanded form & word form	Time	Social Studies
1. Dylan had 75 cents; he bought a lollipop for 25 cents. How much change does he have left?       cents= _____ dollars= _____	430	430	1.	
			2.	
			3.	
1. Andre has 85 cents. He bought three items, a marker for 36 cents, an eraser for a quarter, and gum for 15 cents. How much money does he have left?       cents= _____ dollars= _____	606	606	1.	
			2.	
			3.	
1. James had 99 cents and bought something for 77 cents. How much money does he have left?       cents= _____ dollars= _____	721	721	1.	
			2.	
			3.	
1. Kylie has 90 cents. She went to the store and bought bubbles for 55 cents and lollipop for 25 cents. How much money does she have left?       cents= _____ dollars= _____	934	934	1.	
			2.	
			3.	
1. Andy went to the candy store with 1 dollar. He bought a gumball for a dime and a chocolate bar for 75 cents. How much money does he have left?       cents= _____ dollars= _____	443	443	1.	
			2.	
			3.	

Name: \_\_\_\_\_

How much money is here?	Draw quick picture	Expanded form & word form	Time	Social Studies
1. Michael has four \$10 bills, two \$5 bills, and two quarters in his wallet. How much money does he have in all?       cents= _____ dollars= _____	567	567	1.	
			2.	
			3.	
1. In Jaydon's piggy bank, he has 23 \$1 bills, one \$5 bill, three dimes, and 8 pennies. How much money does he have in all?       cents= _____ dollars= _____	927	927	1.	
			2.	
			3.	
1. Shelly has a \$100 bill, two \$50 bills, and 40 pennies in her purse. How much money does she have in all?       cents= _____ dollars= _____	44	44	1.	
			2.	
			3.	
1. Serena has two \$100 bills, four \$20 bills, and seven quarters. How much money does she have in all?       cents= _____ dollars= _____	209	209	1.	
			2.	
			3.	
1. In Greg's wallet he has a \$50 bill, one \$20 bill, five \$5 bills, and 3 nickels. How much money does he have in all?       cents= _____ dollars= _____	800	800	1.	
			2.	
			3.	






Name: \_\_\_\_\_

How much money is here?	Draw quick picture	Expanded form & word form	Time	Social Studies
1. Mike opened his piggy bank and found 68 cents. He found two quarters, one dime, one nickel and some pennies. How many pennies did he find?       cents= _____ dollars= _____	799	799	1.	
			2.	
			3.	
1. Quintin has 39 cents in his wallet. He found one dime, four nickels, and some pennies. How many pennies does he have?       cents= _____ dollars= _____	603	603	1.	
			2.	
			3.	
1. Kendall has 82 cents in her purse. She has two quarters, two dimes, and many pennies. How many pennies does she have?       cents= _____ dollars= _____	572	572	1.	
			2.	
			3.	
1. Daisy found 21 cents in her room. One dime, one nickel, and the rest were pennies. How many pennies did she find?       cents= _____ dollars= _____	362	362	1.	
			2.	
			3.	
1. Mark has 90 cents in his pocket. One quarter, five dimes, three nickels, and some pennies. How many pennies did he find?       cents= _____ dollars= _____	102	102	1.	
			2.	
			3.	

Name: \_\_\_\_\_

Wednesday

Thursday

How much money is here?		Draw quick picture	Expanded form & word form	Time	Social Studies
 <p>cents= _____ dollars= _____</p>	412	412	1.		
			2.		
			3.		
 <p>cents= _____ dollars= _____</p>	648	648	1.		
			2.		
			3.		
 <p>cents= _____ dollars= _____</p>	728	728	1.		
			2.		
			3.		
 <p>cents= _____ dollars= _____</p>	192	192	1.		
			2.		
			3.		
 <p>cents= _____ dollars= _____</p>	707	707	1.		
			2.		
			3.		

Name: \_\_\_\_\_

Week #38

Wednesday

Thursday

How much money is here?		Draw quick picture	Expanded form & word form	Time	Social Studies
				1.	
				2.	
				3.	
cents= _____ dollars= _____					
				1.	
				2.	
				3.	
cents= _____ dollars= _____					
				1.	
				2.	
				3.	
cents= _____ dollars= _____					
				1.	
				2.	
				3.	
cents= _____ dollars= _____					
				1.	
				2.	
				3.	
cents= _____ dollars= _____					

Name: \_\_\_\_\_

Week #39

How much money is here?	Draw quick picture	Expanded form & word form	Time	Social Studies
			1.	
			2.	
			3.	
cents= _____ dollars= _____				
			1.	
			2.	
			3.	
cents= _____ dollars= _____				
			1.	
			2.	
			3.	
cents= _____ dollars= _____				
			1.	
			2.	
			3.	
cents= _____ dollars= _____				
			1.	
			2.	
			3.	
cents= _____ dollars= _____				