

Republika ng Pilipinas  
**KAGAWARAN NG EDUKASYON**



Rehiyon XII  
**SANGAY NG PAARALANG LUNGSOD**  
\_\_\_\_\_ **DISTRICT**  
Lungsod ng \_\_\_\_\_

**FOURTH PERIODICAL TEST IN MATHEMATICS I**

Name: \_\_\_\_\_

Score: \_\_\_\_\_

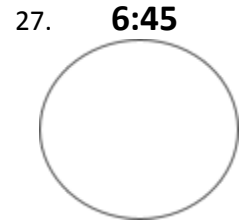
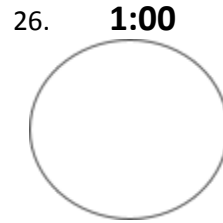
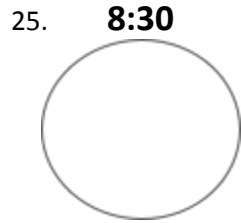
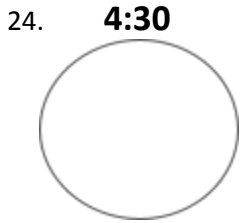
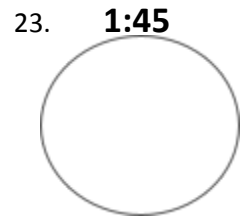
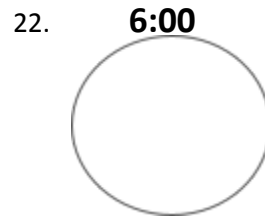
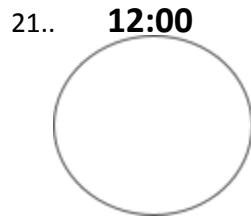
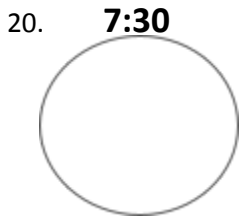
I. Choose and write the letter of the correct answer.

- \_\_\_1. How many days are there in a week?  
a. 5                      b. 6                      c. 7
- \_\_\_2. What day comes after Friday?  
a. Thursday                      b. Saturday                      c. Sunday
- \_\_\_3. How many months are there in a year?  
a. 12                      b. 24                      c. 7                      d. 14
- \_\_\_4. When do we celebrate Christmas?  
a. January                      b. November                      c. December
- \_\_\_5. Which month has the shortest number of days?  
a. May                      b. February                      c. April
- \_\_\_6. How many minutes are there in an hour?  
a. 60                      b. 100                      c. 30
- \_\_\_7. What do we celebrate every January 1?  
a. March                      b. July                      c. January
- \_\_\_8. When do we celebrate Valentine's Day?  
a. February                      b. June                      c. April
- \_\_\_9. What is the 1<sup>st</sup> month of the year?  
a. December                      b. September                      c. August
- \_\_\_10. What is the first day of school?  
a. Friday                      b. Monday                      c. Wednesday
- \_\_\_11. When do we go to church?  
a. Sunday                      b. Monday                      c. Tuesday
- \_\_\_12. What is the last day month of the year?  
a. November                      b. September                      c. December

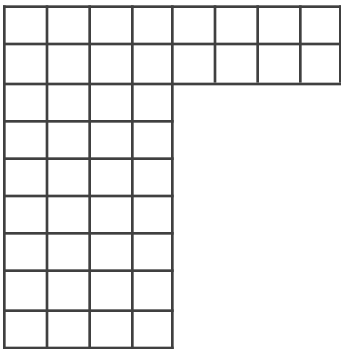
II. 13-19. Arrange the days of the week in order. Write numbers 1 to 7.

- \_\_\_ Saturday                      \_\_\_ Tuesday                      \_\_\_ Sunday                      \_\_\_ Monday  
\_\_\_ Wednesday                      \_\_\_ Friday                      \_\_\_ Thursday

III. Draw the clock and show the correct time.



IV. Give the area of each figure.



30. \_\_\_ square units

28. \_\_\_ square units

29. \_\_\_ square units

Prepared by:  
NEREIZZA M. MARQUEZ  
Teacher I