


5


Fifth day



in



fifth grade!




5



Name _____

Date _____



Decorate the first point with your initials. The second point is the name of your favorite book or author. The third is your favorite song. The fourth is your favorite fruit and the fifth is your favorite dessert. In the middle draw a picture of something special to you.

Division with 5's-

| | | | |
|---------------|---------------|---------------|---------------|
| $25 \div 5 =$ | $10 \div 5 =$ | $0 \div 5 =$ | $20 \div 5 =$ |
| $50 \div 5 =$ | $25 \div 5 =$ | $45 \div 5 =$ | $50 \div 5 =$ |
| $20 \div 5 =$ | $25 \div 5 =$ | $55 \div 5 =$ | $20 \div 5 =$ |
| $25 \div 5 =$ | $45 \div 5 =$ | $25 \div 5 =$ | $55 \div 5 =$ |
| $15 \div 5 =$ | $60 \div 5 =$ | $5 \div 5 =$ | $35 \div 5 =$ |
| $5 \div 5 =$ | $25 \div 5 =$ | $15 \div 5 =$ | $0 \div 5 =$ |
| $45 \div 5 =$ | $45 \div 5 =$ | $25 \div 5 =$ | $30 \div 5 =$ |
| $45 \div 5 =$ | $50 \div 5 =$ | $20 \div 5 =$ | $35 \div 5 =$ |
| $50 \div 5 =$ | $40 \div 5 =$ | $5 \div 5 =$ | $0 \div 5 =$ |
| $55 \div 5 =$ | $25 \div 5 =$ | $40 \div 5 =$ | $10 \div 5 =$ |
| $35 \div 5 =$ | $60 \div 5 =$ | $50 \div 5 =$ | $20 \div 5 =$ |
| $60 \div 5 =$ | $30 \div 5 =$ | $20 \div 5 =$ | $40 \div 5 =$ |
| $30 \div 5 =$ | $45 \div 5 =$ | $10 \div 5 =$ | $60 \div 5 =$ |
| $40 \div 5 =$ | $50 \div 5 =$ | $20 \div 5 =$ | $45 \div 5 =$ |
| $35 \div 5 =$ | $20 \div 5 =$ | $60 \div 5 =$ | $0 \div 5 =$ |
| $55 \div 5 =$ | $25 \div 5 =$ | $0 \div 5 =$ | $5 \div 5 =$ |
| $5 \div 5 =$ | $45 \div 5 =$ | $35 \div 5 =$ | $0 \div 5 =$ |
| $55 \div 5 =$ | $20 \div 5 =$ | $20 \div 5 =$ | $5 \div 5 =$ |
| $35 \div 5 =$ | $35 \div 5 =$ | $35 \div 5 =$ | $0 \div 5 =$ |
| $0 \div 5 =$ | $20 \div 5 =$ | $60 \div 5 =$ | $30 \div 5 =$ |
| $45 \div 5 =$ | $5 \div 5 =$ | $15 \div 5 =$ | $50 \div 5 =$ |
| $35 \div 5 =$ | $35 \div 5 =$ | $10 \div 5 =$ | $30 \div 5 =$ |
| $45 \div 5 =$ | $25 \div 5 =$ | $5 \div 5 =$ | $60 \div 5 =$ |
| $0 \div 5 =$ | $50 \div 5 =$ | $15 \div 5 =$ | $60 \div 5 =$ |
| $30 \div 5 =$ | $55 \div 5 =$ | $55 \div 5 =$ | $45 \div 5 =$ |

Write as many words as you can think of using only the letters from
Fiveburgersandfries-



| | | |
|--|--|--|
| | | |
| | | |
| | | |
| | | |
| | | |
| | | |



Write as many words as you can think of using only the letters from
Fivetacosandchips



| | | |
|--|--|--|
| | | |
| | | |
| | | |
| | | |
| | | |
| | | |



How often do we use **five** or **fifth**?

____, 10, _____, 20, _____, 30, _____, 40, _____

High _____ candy bar _____ Avenue

Maroon _____ month is May

Jackson _____ Last day of school-June _____

_____ fingers + _____ fingers = 10 fingers

_____ senses

_____, 4, 3, 2, 1 Blast off!

_____ paragraphs for a story



Saks _____ Avenue Department Store

The _____ Element (movie with Bruce Willis as a cab driver)

Between the fourth and sixth floor- _____ floor

Texting on your cell phone (jkl) _____


Five minutes before six _____:

Temperature between 49 and 51 degrees- _____ degrees

How much money?



How much money?



How much money?



How much money?



How much money?



How much money?




How much money?



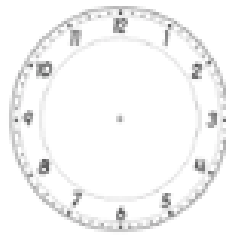
How much money?




What time is it?




5:50



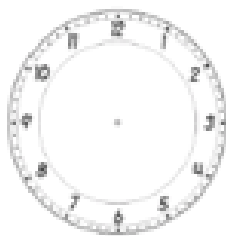
3:25



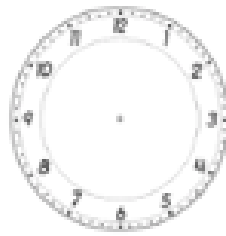
5:25



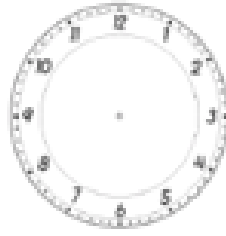
7:45



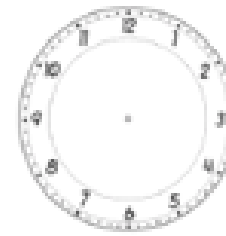
5:45



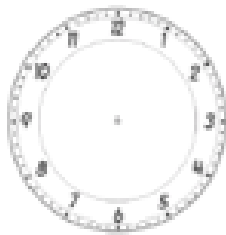
10:15



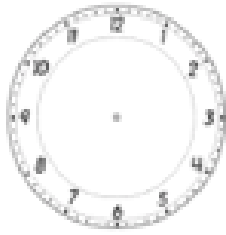
10:35



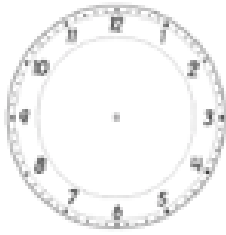
5:05



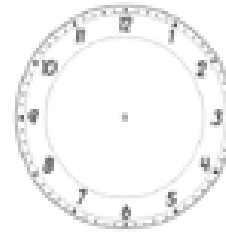
5:51



10:55



5:35



10:05
