


Task 2: Rational Counting



Task 3: Number Identification					
3	7	9	13	24	
36	40	52	61	68	
72	77	86	88	94	
115	236	358	479	574	

Task 4: Number Discrimination-Practice

Practice 1

8

6

Practice 2

12

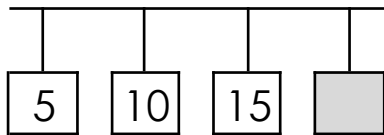
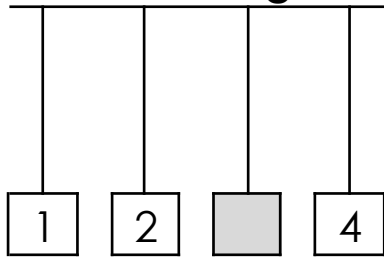
14

Task 4: Number Discrimination

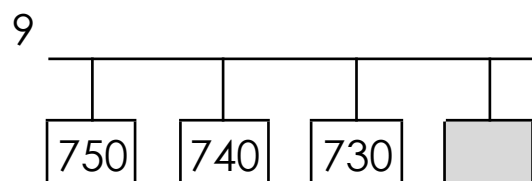
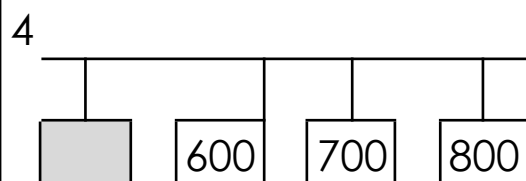
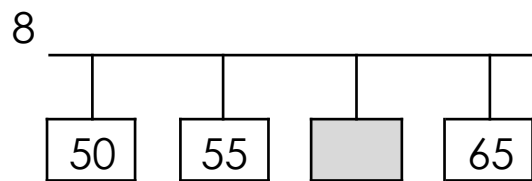
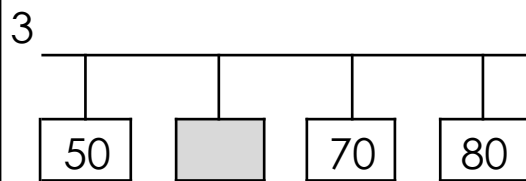
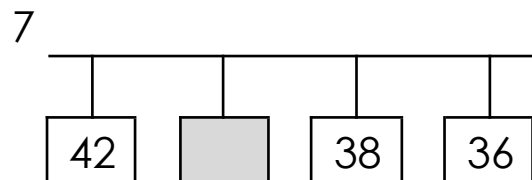
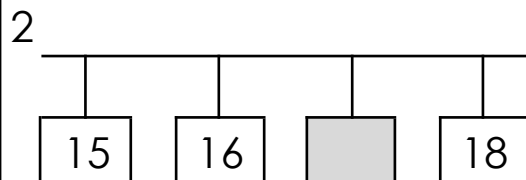
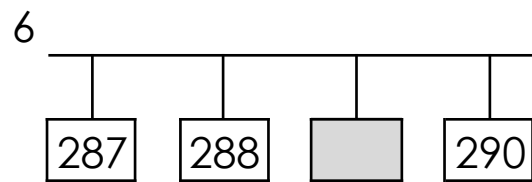
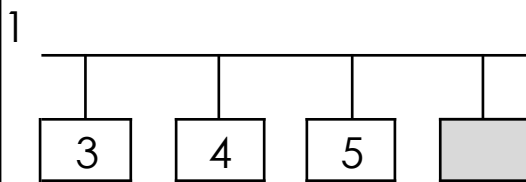
6	4
10	23
33	28
57	47
64	66

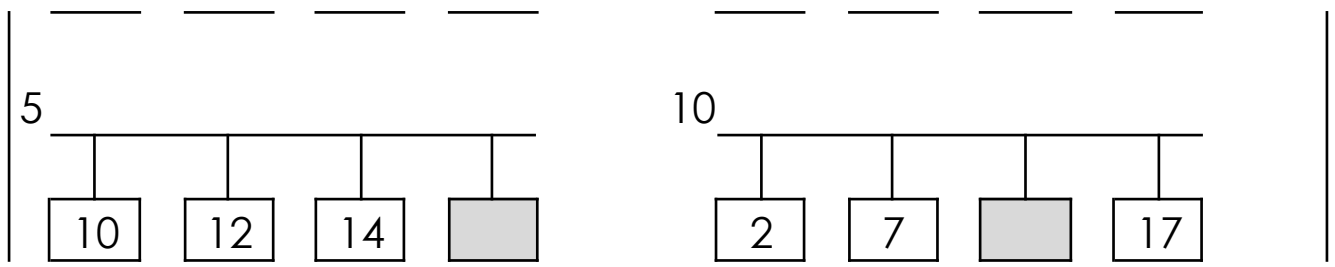
93	77
145	152
286	536
622	631
964	966

Task 5: Missing Number-Practice



Task 5: Missing Number





Task 6A: Addition-Level 1

$2 + 1 =$	$9 + 6 =$
$4 + 2 =$	$8 + 9 =$
$3 + 4 =$	$7 + 5 =$
$5 + 3 =$	$9 + 9 =$
$3 + 6 =$	$10 + 3 =$
$7 + 6 =$	$2 + 15 =$
$2 + 8 =$	$13 + 6 =$
$5 + 4 =$	$4 + 11 =$
$4 + 7 =$	$10 + 6 =$
$8 + 4 =$	$6 + 12 =$

Task 6B: Addition-Level 2

$$15 + 4 =$$

$$18 + 7 =$$

$$31 + 18 =$$

$$42 + 13 =$$

$$47 + 19 =$$

--

Task 7A: Subtraction-Level 1

$3 - 1 =$	$15 - 9 =$
$6 - 2 =$	$17 - 8 =$
$7 - 3 =$	$12 - 5 =$
$8 - 4 =$	$18 - 9 =$
$9 - 2 =$	$13 - 3 =$
$13 - 7 =$	$17 - 2 =$
$10 - 2 =$	$19 - 6 =$
$9 - 4 =$	$15 - 11 =$
$11 - 7 =$	$16 - 6 =$
$12 - 8 =$	$18 - 12 =$

Task 7B: Subtraction-Level 2

$$19 - 4 =$$

$$25 - 7 =$$

$$49 - 31 =$$

$$55 - 42 =$$

$$66 - 19 =$$



Task 8: Word Problems

- ❖ Adunay 8 ka saging sa lamisa.
Gipun-an kini og 2 ka saging.
Pila man ka saging tanan?

- ❖ Adunay 9 ka saging sa lamisa.
4 ra kabuok ang hinog. Hilaw pa ang uban.
Pila man kabuok ang hilaw nga saging?

- ❖ Adunay 5 ka saging si Rita.
Samtang si Jose adunay 3 ka saging.
Pila man ka saging ang ipuno/idugang ni Jose para
mapareho kadaghana ang ilang saging ni Rita?

- ❖ Adunay mga saging si Rita.
Gipun-an kini ni Jose ug 7 ka mga saging.
Nahimo nang 10 tanan ang mga saging ni Rita. Pila
man diay kabuok ang saging ni Rita sa
sinugdanan/pirmero?

- ❖ Adunay 16 ka saging.
Giangay pagbahin sa 2 ka mga bata.
Pila man ka mga saging ang bahin sa kada
bata?

- ❖ Adunay 3 ka mga plato.
Kada plato adunay 3 ka mga saging.

Pila man tanan ang mga saging?

Task 9: Geometric Pattern Completion- Practice

○ △ ○ △ ○ △ _

□ □ ○ □ □ ○ _ _

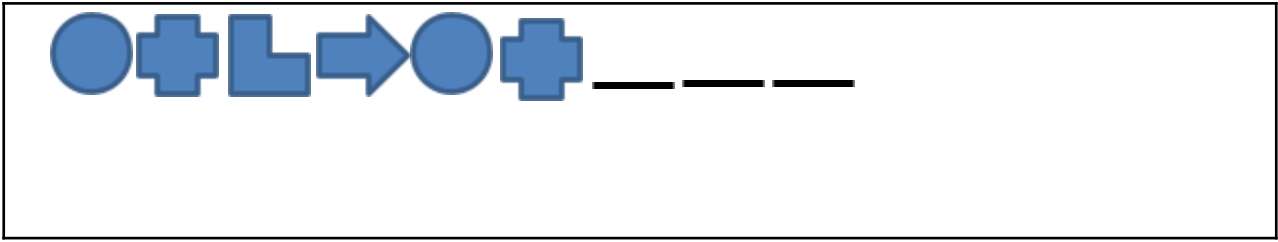
Task 9: Geometric Pattern Completion

😊 ❤️ 😊 ❤️ 😊 ❤️ _

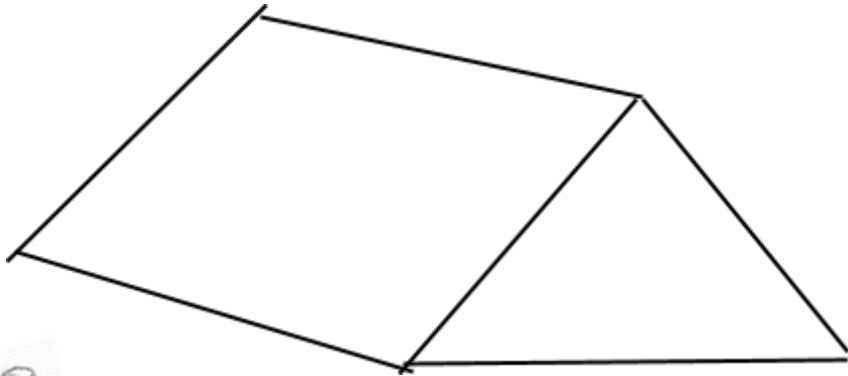
▲ ❤️ ▲ ❤️ ▲ _ _

★ □♦ ★ □♦ ★ _ _

☀️ ★ 🌙 ● ☀️ ★ 🌙 ● _



Task 10: Geometric Visualization-Practice



Ruben



Mara

Task 10: Geometric Visualization

