

KENDRIYA VIDYALAYA SANGATHAN HYDERABAD REGION
SESSION ENDING EXAMINATION MODEL PAPER 14-2025-26

CLASS: V

SUBJECT: TWAU






TIME: 90 MIN


NAME: _____ ROLL NO: _____

OBSERVATION & RECORDING (10)	IDENTIFICATION & CLASSIFICATION (15)	DISCOVERY OF FACTS (15)	TOTAL (40)

I)OBSERVATION & RECORDING: (10)

A) OBSERVE THE PICTURES AND ANSWER THE QUESTIONS GIVEN BELOW: 1 x 6 =6

	1. By observing the picture, which material is used to make this shawl? _____
	2. The dance shown in the picture comes from which state? _____
	3. What is captured by this device to make electricity? _____
	4. I am green and spicy, and I travelled from a different country. Who am I and which place do I belong to? _____
	5. From the picture of the tree, tell which season it represents. _____

	<p>6. The plant shown here gives us which natural fibre?</p> <p>_____</p>
-----------------------------------------------------------------------------------	---------------------------------------------------------------------------

B) Can you name any 3 traffic signs you have seen near your school or home? (1×2=2)

C) Which river and mountain range are mentioned in National Anthem? (1×2=2)

River	Mountain Ranges

II) IDENTIFICATION & CLASSIFICATION:

(15)

A) Answer the following


(3x 2 =6)

1 . Classify the items and write in correct box .


Fruits waste, Bottles, Spoiled food, Newspaper

WET WASTE BOX	DRY WASTE BOX

2. Put the markings (like 1,2,3,4) on the life cycle of a silkworm to arrange it in a proper sequence.



a. Silkworm eggs ()



b. Butterfly ()



c. Caterpillar ()



d. Cocoon ()

3. “Just like we grow and change, the world around us is changing too.”

What causes day and night?

Ans. _____

—

B. Match the following:

(1 x 4= 4)

A	B
a. Swach Bharat Mission	21 st June
b. Republic Day	India's first man in space
c. International Yoga Day	Clean toilets and Hygiene
d. Wing Commander Rakesh Sharma	26 th January

C. Complete the table:

(1 x 5= 5)

Season	Month of the year
Spring (Vasanta)	
Summer(Grishma)	
Monsoon(Varsha)	
Autumn(Sharad	
Pre Winter (Hemant)	Mid November to mid December
Winter(Shishir)	

III) DISCOVERY OF FACTS:

(15)

A) Read the question and tick the correct answer :

1 x 6= 6

1. Which item is usually set aside for recyclers and not thrown in bins?

- a) Apple peels
- b) Old newspapers
- c) Plastic bottles
- d) Food wrappers

2. Which Indian festival celebrates the spirit of togetherness, colors, and unity?

- a) Diwali
- b) Holi
- c) Raksha Bandhan
- d) Pongal

3. The Andaman and Nicobar Islands are located in which sea?

- a) Arabian Sea
- b) Bay of Bengal
- c) Indian Ocean
- d) Red Sea

4. Choose the fuel that creates smoke and pollution on burning.

- (a) Solar energy
- (b) Wind energy

- (c) Coal
- (d) Water

5. What is the main source of energy for life on Earth?

- a) Wind
- b) Water
- c) The Sun
- d) Electricity

6. The concept of 'zero' was first written down in:

- a) Greece
- b) Egypt
- c) India
- d) China

B) Answer the following:

1. Give reasons :

a) Why do rosy starlings travel thousands of kilometers to India every winter?

b) How do they help farmers?

2. Why is the tailorbird compared to a tailor?

Ans.

C) Observe the picture carefully and answer the following questions:



1. Which is the first mangrove forest in India? (1)

2. Why do the mangroves trees have roots above the water? (2)

Ans.

3. How do mangrove roots help protect the land? (1)

Ans.

4. Name one animal found in Sunderban. (1)

CLASS V TWAU SET 14 - BLUE PRINT TIME: 90 MINUTES TOTAL MARKS: 40 (WRITTEN)

COMPETENCIES		OBSERVATION AND REPORTING(10M)			IDENTIFICATION AND CLASSIFICATION (15M)			DISCOVERY OF FACTS (15M)			TOTAL (40M)
S.NO	Topic	VSA	SA	LA	VSA	SA	LA	VSA	SA	LA	
1	OUR SCHOOL-A HAPPY PLACE		1(2)			1(2)		1(1)			5
2	OUR VIBRANT COUNTRY	1(1)	1(2)		2(1)			1(1)			6
3	SOME UNIQUE PLACE							1(1)		1(5)	6
4	ENERGY-HOW THINGS WORK	1(1)						2(1)			3
5	CLOTHES-HOW THINGS ARE MADE	2(1)				1(2)			1(2)		6
6	RHYTHMS OF NATURE	1(1)				1(2)	1(5)		1(2)		10
7	EARTH-OUR SHARED HOME	1(1)			2(1)			1(1)			4
	TOTAL	6	4		4	6	5	6	4	5	40

ANSWER KEY

CLASS-5 TWAU SET-14

I)OBSERVATION & RECORDING: (10)

A) OBSERVE THE PICTURES AND ANSWER THE QUESTIONS GIVEN BELOW: 1 x 6 =6

i) WOOL iv) SOUTH AMERICA

ii)BIHU(ASSAM) v) AUTUMN

iii) SUNLIGHT vi) COTTON

B) 1. School Ahead Sign

Pedestrian Crossing Sign

Speed Limit Sign

c)

River	Mountain Ranges
i) Gang a	(i) Vindhya Hills
(ii) Yamuna	ii) Himalaya Mountains

II) IDENTIFICATION & CLASSIFICATION

A) 1.

WET WASTE BOX	DRY WASTE BOX
Fruits waste	Bottles,
Spoiled food	Newspaper

2. Silkworm

eggs----- Caterpillar----- Cocoon ----- Butterfly

3. Day changes into night because the Earth rotates. When one side of the Earth faces the Sun, it is day, and when it turns away, it is night.

B.

A	B
e. Swach Bharat Mission	Clean toilets and Hygiene
f. Republic Day	26 th January
g. International Yoga Day	21 st June
h. Wing Commander Rakesh Sharma	India's first man in space

C.

Season	Month of the year
Spring (Vasanta)	February to March

Summer(Grishma)	April to June
Monsoon(Varsha)	July to September
Autumn(Sharad	October to November
Pre Winter (Hemant)	Mid November to mid December
Winter(Shishir)	Mid December to January

III) DISCOVERY OF FACTS (15)

A)

1. c) Plastic bottles 2. b) Holi 3. b) Bay of Bengal
4. (c) Coal 5. c) The Sun 6. c) India

B) 1. a) THEY ENJOY WARM WEATHER IN INDIA AND FEED ON LOCUSTS AND GRASSHOPPERS.

b) The rosy starling helps farmers by eating pests from crops

2. A **tailorbird** is compared to a **tailor** because it **stitches leaves together** to make its nest — just like a tailor stitches pieces of cloth to make clothes.

B) 1. The sundaebans

2. Mangrove trees have **roots above the water** because they grow in **muddy areas** where the **soil has very little air**.

3.their roots hold the soil together and help stop waves from washing the land away.

4. Royal Bengal tiger

