


*

Nume:		Data:	
-------	--	-------	--

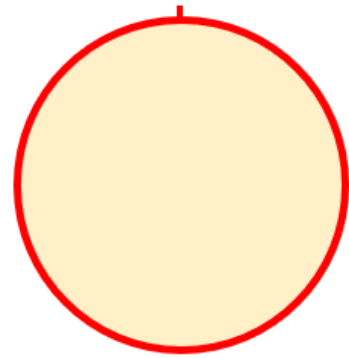
Evaluare sumativă

1. (20p) Reprezintă următoarele mulțimi folosind diagramele din dreptul fiecărui exemplu și notează corespunzător pe fiecare mulțime.

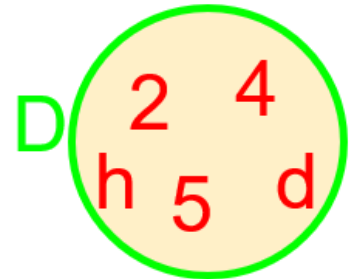
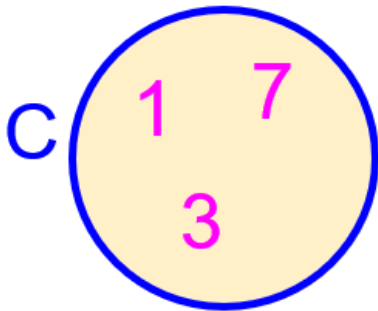
$A = \{0; 2; 7\}$



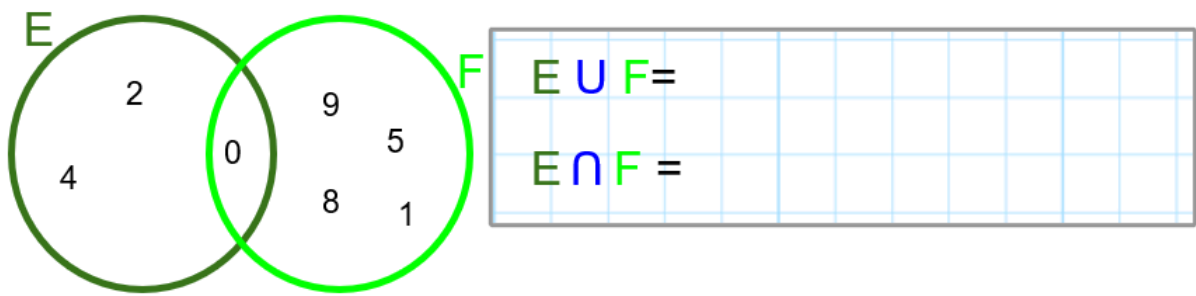
$B = \{1; 3; 9; 11; 13\}$



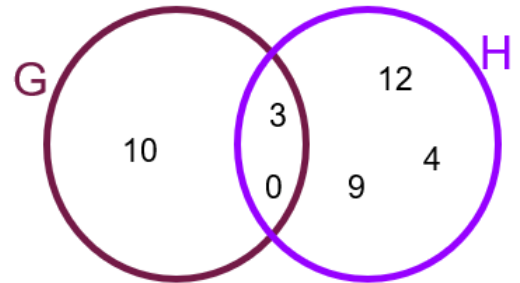
2. (20p) Scrie ca un matematician următoarele mulțimi și apoi află cardinalul lor.



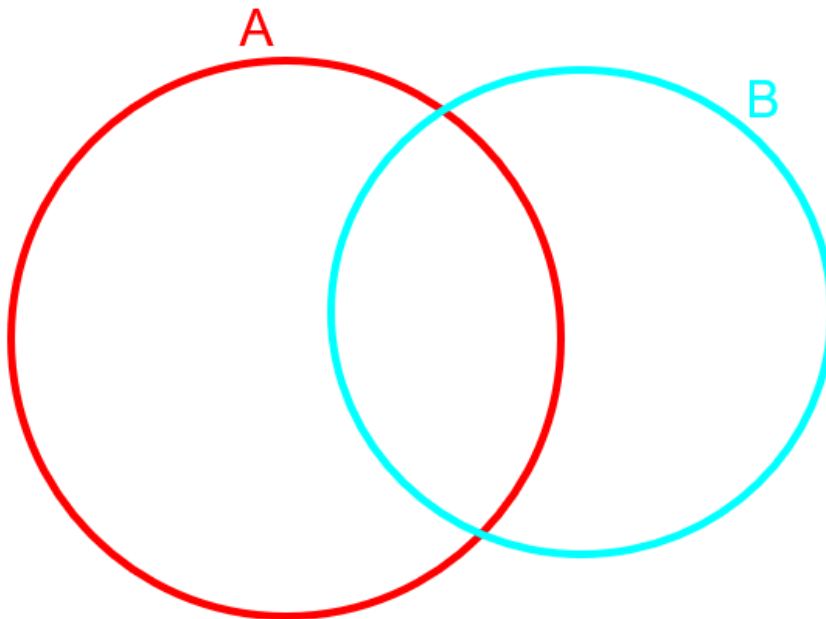
3. (20p) Completează:



$G / H =$
$H / G =$



4. (30p) Completează diagramele cu elementele corespunzătoare:



$A \cup B = \{a; b; c; d; e\}$
$A \cap B = \{b; e\}$
$A / B = \{a\}$

Oficiu: 10p

Succes!

prof. Suliman Marinela