

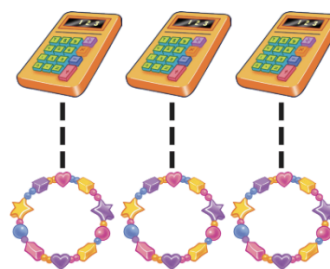
Topic 2: Compare Numbers 0 to 5

equal



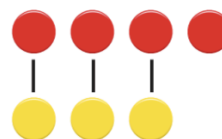
Point to the picture.
Say: *Both groups have 3 counters.
They are **equal**.*

same number as



Point to the picture.
Say: *The top group has the **same number as** the bottom group.*

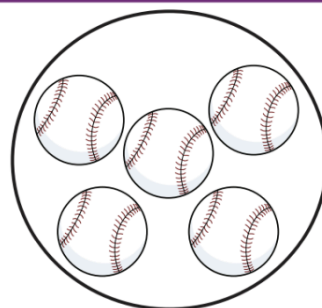
compare



Point to the picture.
Say: *When we **compare** these groups,
we see that they each have a different
amount of counters.*

Topic 2: Compare Numbers 0 to 5

group



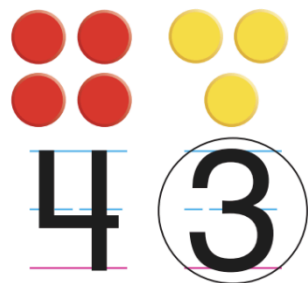
Point to the baseballs.
Say: This is a **group** of baseballs.

greater than




Point to the 4.
Say: 4 is **greater than** 3.

less than



Point to the 3.
Say: 3 is **less than** 4.

model



Point to the model.
Say: **Models** help us represent number or word problems.

Topic 2: Compare Numbers 0 to 5