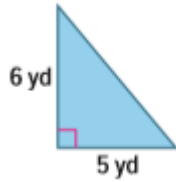


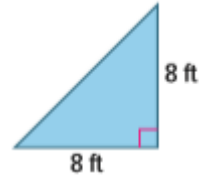
Area of Triangles Practice

Find the area of each triangle. Make sure to show your work for full credit.

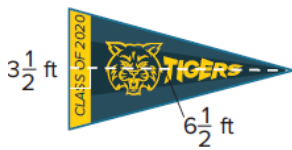
1.



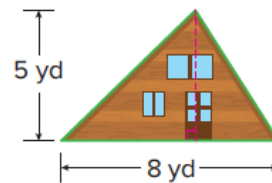
2.



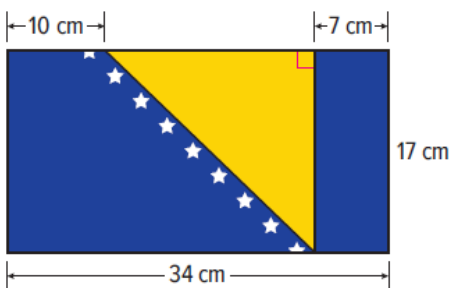
3. Tameeka is in charge of designing a school pennant for spirit week. What is the area of the pennant? (Example 2)



4. Norma has an A-frame cabin. The back is shown below. If the total area of the windows and doors is 3.5 square yards, how many square yards of paint will she need to cover the back of the cabin? (Example 2)



7. The flag of Bosnia and Herzegovina is shown. What is the area of the triangle on the flag?



8. What is the area of the triangle?

