


Name _____ Date _____

1.4 Homework 2

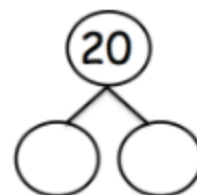
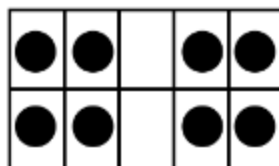
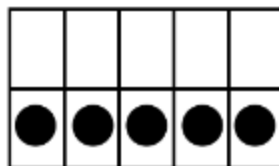
Write two equations for the domino.



$$\underline{\quad\quad} + \underline{\quad\quad} = \underline{\quad\quad}$$

$$\underline{\quad\quad} + \underline{\quad\quad} = \underline{\quad\quad}$$

How many more to make 20?
Fill in the number bond to show the combination that makes 20.



I have 2 sides that are equal, another 2 sides that are equal, and 4 corners. I am a closed figure. Who am I?

Word Bank

Trapezoid	Circle	Square
Rectangle	Hexagon	Triangle

Draw the shape.

Draw a line to cut the rectangle into halves.

