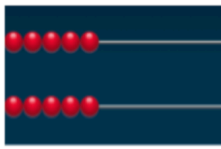
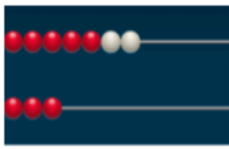
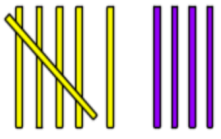
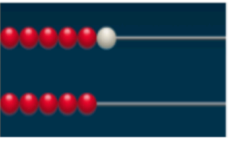




Activity #2 Unit 1 Module 3

Which One Doesn't Belong? Notice the Numbers

A  $5 + 5$	B  $6 + 5$
C  $6 + 4$	D  $6 + 5$

▶ 0:00 / 0:40   

Look at this set of four pictures. Decide which one doesn't belong with the other three. Use math words to describe your thinking. There are many ways to think about each one!