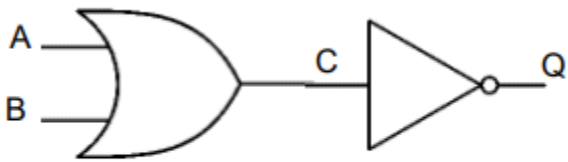
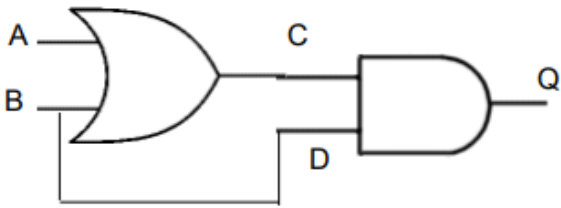


More Logic Circuits

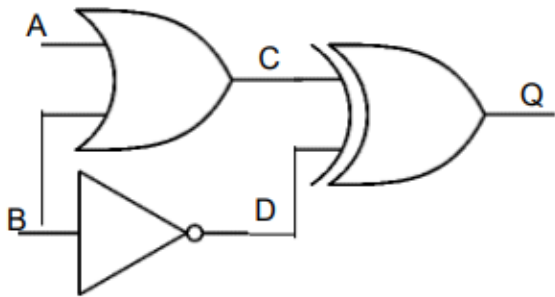
Complete the truth tables for each of the following logic circuits



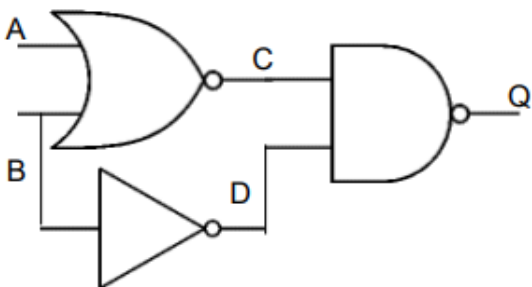
A	B	C	Q
0	0		
0	1		
1	0		
1	1		



A	B	C	D	Q
0	0			
0	1			
1	0			
1	1			



A	B	C	D	Q
0				
0				
1				
1				



A	B	C	D	Q
	0			
	1			
	0			
	1			

Answer Key

A	B	C	Q
0	0	0	1
0	1	1	0
1	0	1	0
1	1	1	0

A	B	C	D	Q
0	0	0	0	0
0	1	1	1	1
1	0	1	0	0
1	1	1	1	1

A	B	C	D	Q
0	0	0	1	1
0	1	1	0	1
1	0	1	1	0
1	1	1	0	1

A	B	C	D	Q
0	0	1	1	0
0	1	0	0	1
1	0	0	1	1
1	1	0	0	1