




MATHEMATICS 3
1ST SUMMATIVE TEST
1ST QUARTER

Name: _____

Write the number represented by each set of numbers discs, blocks, flats, longs, and squares.



Use blocks, flats, longs, and squares to illustrate the following numbers.

1. 9 215

2. 3 428

3. 4 614

Use number disc to illustrate the following numbers.

4. 1 709

5. 10 000

Write the place value that digit 6 holds.

1. 47 546 _____

2. 65 408 _____

3. 76 325 _____

4. 89 641 _____

5. 90 768 _____

KEY:

1. 3 365
2. 8 139
3. 4 373
4. 6 002
5. 3 221

1. ones
2. ten thousands
3. thousands
4. hundreds
5. tens