



I. Cross A, B, C or D as the correct answer!

1. The length of the key is about?



- A. 11 kg
- B. 11 km
- C. 11 m
- D. 11 cm

2. The height of the cupboard is about?



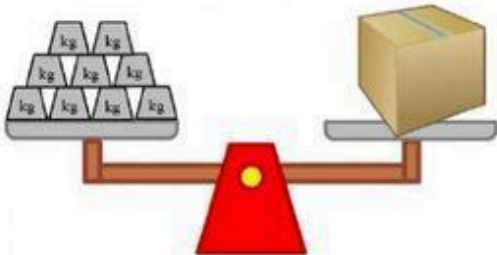
- A. 1 kg
- B. 1 km
- C. 1 m
- D. 1 cm

3. The distance run in 50 minutes is about?



- A. 10 kg
- B. 10 km
- C. 10 m
- D. 10 cm

4. Look at the picture!



The box weighs is about?

- A. 9 kg
- B. 8 gr
- C. 7 gr
- D. 6 kg

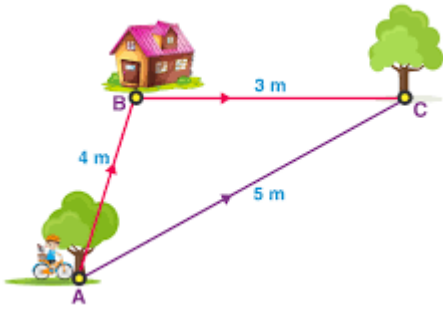
5. Look at the picture!



6. The mass of the fish is about?

- A. 3 kg 600 g
- B. 1 kg 300 g
- C. 1 kg
- D. 2 kg 300 g

7. Look at the picture to find the answer!



The distance from **A** house to **B** is...m

- A. 5 m
- B. 4 m
- C. 3 m
- D. 4 km

8. Look at the picture!

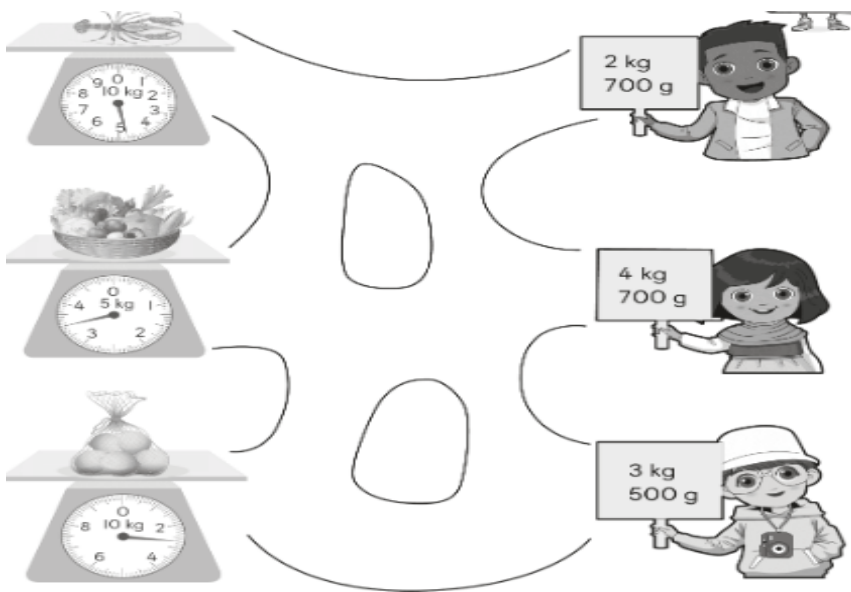


Ralph uses a weighing scale to find the mass of a rice.

The mass of a rice is ... kg

- A. 3 kg 250 g
- B. 4 kg 250 g
- C. 5 kg 250 g
- D. 6 kg 250 g

9. Follow the path that shows the correct mass!



II. Draw the missing pointers!

10. Draw the missing pointers on the weighing scales

Item	Mass
Duck	7 kg 500 g
Chicken	900 g

A.





B.



Duck

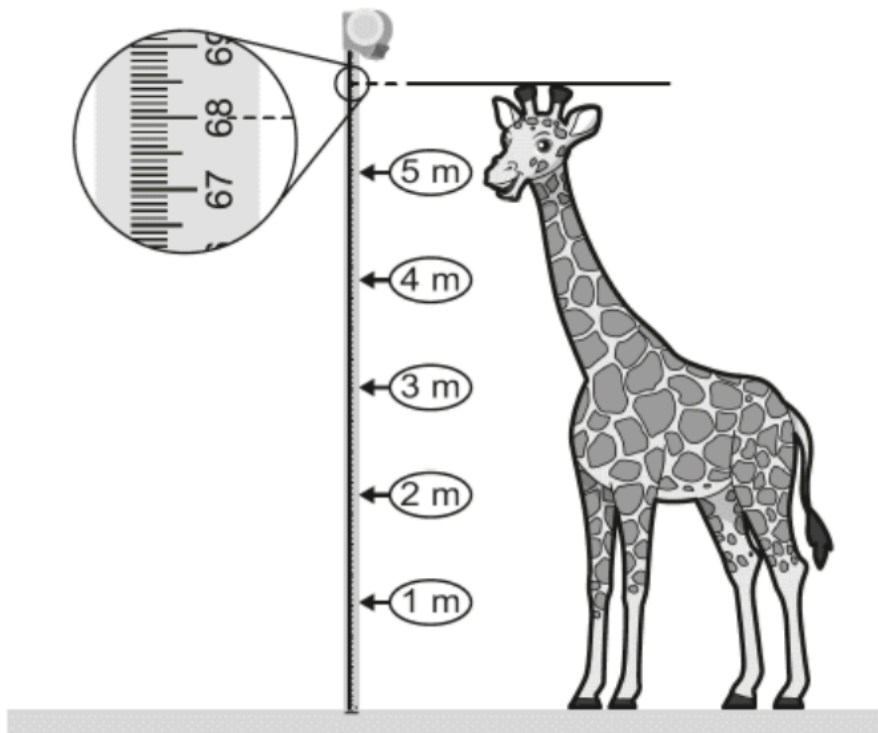
chicken

11. A stack of paper has a mass of 4 kg 500 g
Draw the pointer on each kitchen scale.

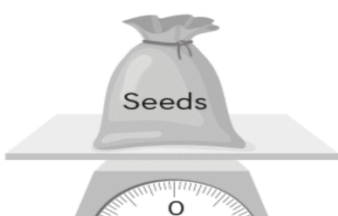


III. Answer this questions below!

12. Raj is measuring the height of a girafe.
The height of a girafe is about . . . m . . . cm



13. The mass of a pack of seeds
is. . . kg . . . g



14. The mass of the bananas
is. . . kg . . . g



Write hamdalah :