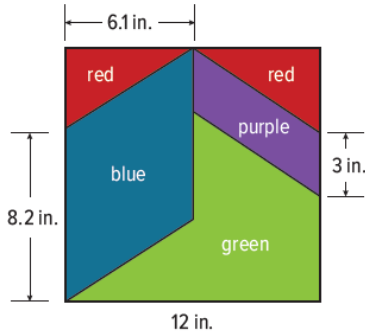



Area of Parallelograms Practice

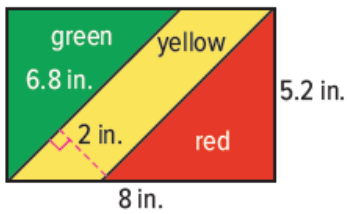
1. The pattern shows the dimensions of a quilting square that Nakida will use to make a quilt. How much blue fabric will she need to make one square? (Example 1)



2. A group of students is painting the flag of Brunei for a geography project. Joseph is responsible for painting only the background colors of the flag. How many square inches will he cover with white paint? (Example 1)



3. Find the area of the yellow striped region of the flag of the Republic of the Congo.



4. **Open Response** What is the area of the parallelogram?

